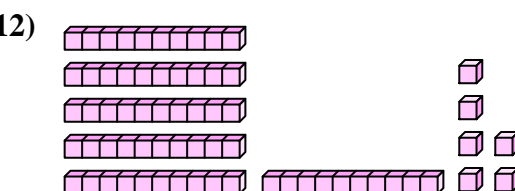
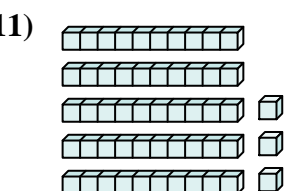
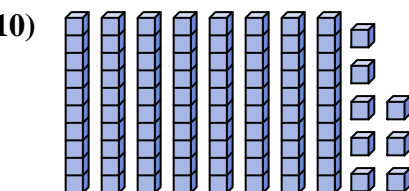
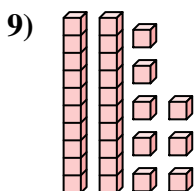
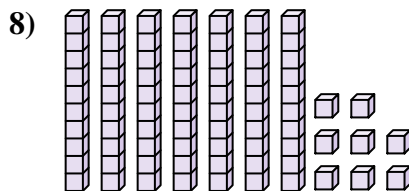
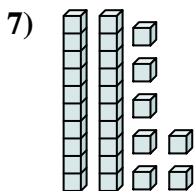
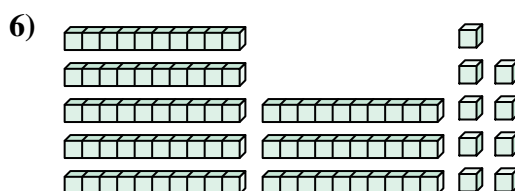

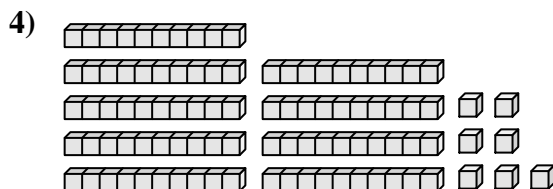
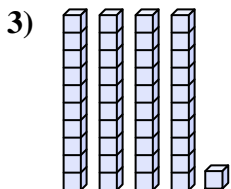
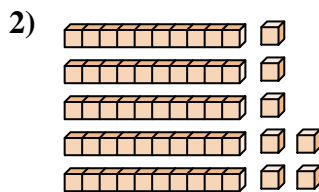
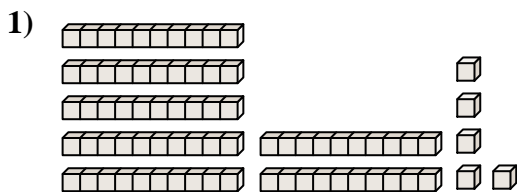




Comptez le nombre total de blocs.

**Réponses**

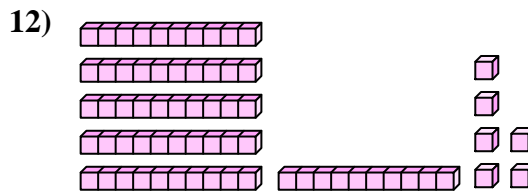
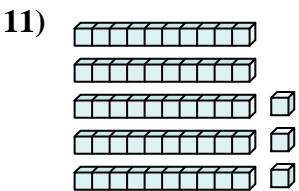
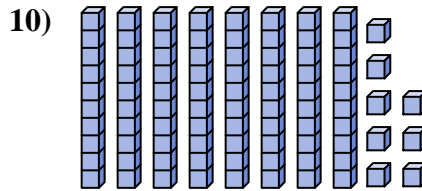
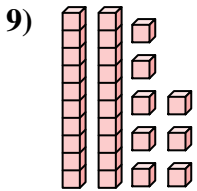
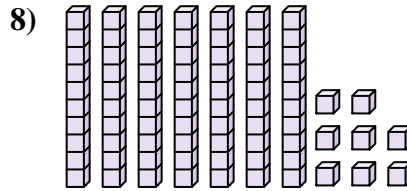
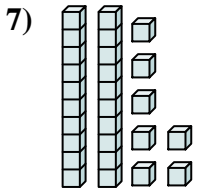
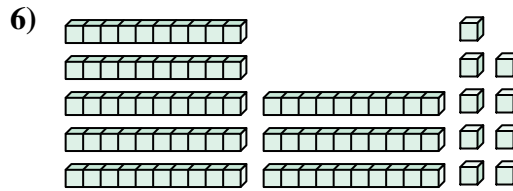
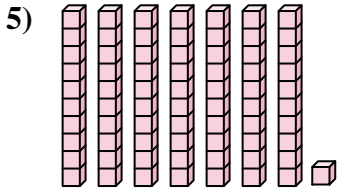
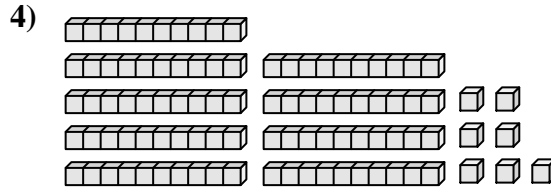
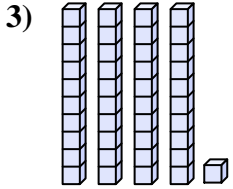
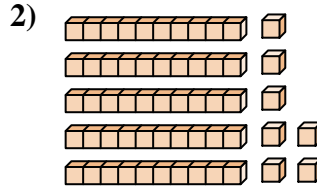
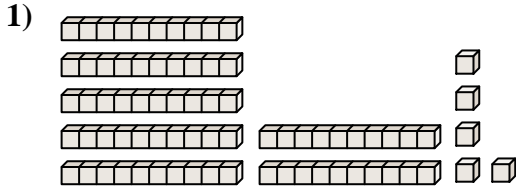


- 1. \_\_\_\_\_
- 2. \_\_\_\_\_
- 3. \_\_\_\_\_
- 4. \_\_\_\_\_
- 5. \_\_\_\_\_
- 6. \_\_\_\_\_
- 7. \_\_\_\_\_
- 8. \_\_\_\_\_
- 9. \_\_\_\_\_
- 10. \_\_\_\_\_
- 11. \_\_\_\_\_
- 12. \_\_\_\_\_



Comptez le nombre total de blocs.

**Réponses**



1. 75
2. 57
3. 41
4. 97
5. 71
6. 89
7. 27
8. 78
9. 28
10. 88
11. 53
12. 66



Comptez le nombre total de blocs.

27

88

57

41

71

78

97

89

28

75

**Réponses**

1. \_\_\_\_\_

2. \_\_\_\_\_

3. \_\_\_\_\_

4. \_\_\_\_\_

5. \_\_\_\_\_

6. \_\_\_\_\_

7. \_\_\_\_\_

8. \_\_\_\_\_

9. \_\_\_\_\_

10. \_\_\_\_\_

