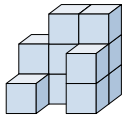




Résoudre chaque problème.

Réponses

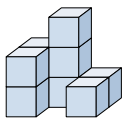
1) If you were looking at the 3d shape from the back what would you see?



- A.
- B.
- C.
- D.

1. \_\_\_\_\_

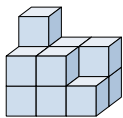
2) If you were looking at the 3d shape from the back what would you see?



- A.
- B.
- C.
- D.

2. \_\_\_\_\_

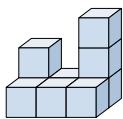
3) If you were looking at the 3d shape from the back what would you see?



- A.
- B.
- C.
- D.

3. \_\_\_\_\_

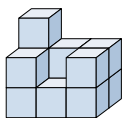
4) If you were looking at the 3d shape from the left side what would you see?



- A.
- B.
- C.
- D.

4. \_\_\_\_\_

5) If you were looking at the 3d shape from the back what would you see?



- A.
- B.
- C.
- D.

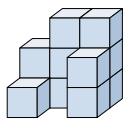
5. \_\_\_\_\_



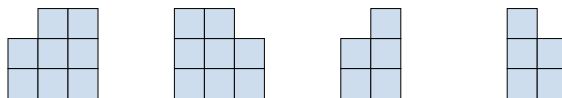
Résoudre chaque problème.

Réponses

1) If you were looking at the 3d shape from the back what would you see?

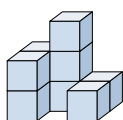


A.                      B.                      C.                      D.

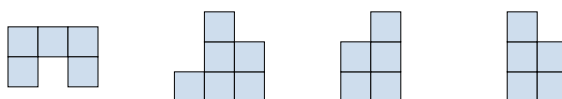


1. **B**

2) If you were looking at the 3d shape from the back what would you see?

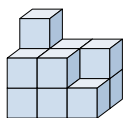


A.                      B.                      C.                      D.

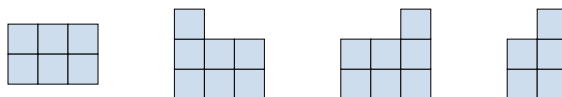


2. **B**

3) If you were looking at the 3d shape from the back what would you see?

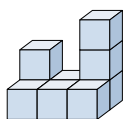


A.                      B.                      C.                      D.



3. **C**

4) If you were looking at the 3d shape from the left side what would you see?

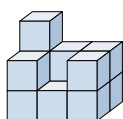


A.                      B.                      C.                      D.




4. **B**

5) If you were looking at the 3d shape from the back what would you see?



A.                      B.                      C.                      D.



5. **C**