



Déterminez si la figure a effectué une translation, une rotation ou une réflexion.

**Réponses**

1)



2)



3)



4)



5)



6)



7)




8)



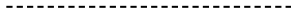
9)



10)




11)



12)



13)



14)



15)

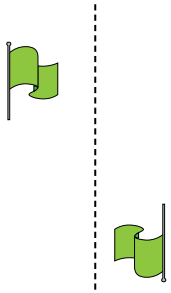


1. \_\_\_\_\_
2. \_\_\_\_\_
3. \_\_\_\_\_
4. \_\_\_\_\_
5. \_\_\_\_\_
6. \_\_\_\_\_
7. \_\_\_\_\_
8. \_\_\_\_\_
9. \_\_\_\_\_
10. \_\_\_\_\_
11. \_\_\_\_\_
12. \_\_\_\_\_
13. \_\_\_\_\_
14. \_\_\_\_\_
15. \_\_\_\_\_

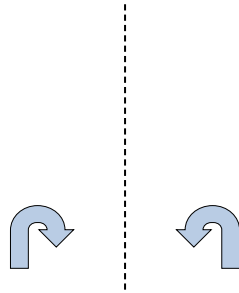


Déterminez si la figure a effectué une translation, une rotation ou une réflexion.

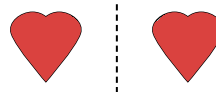
1)



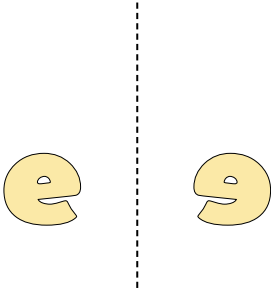
2)




3)



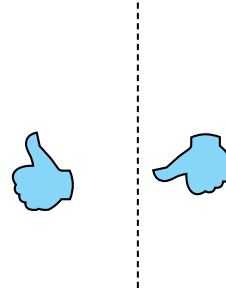
4)



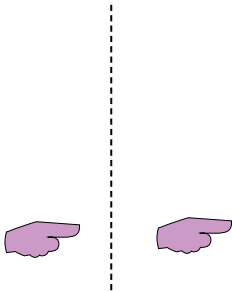
5)



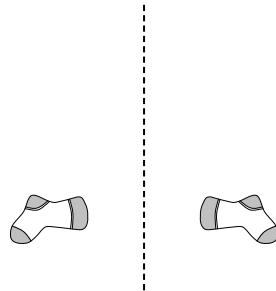
6)



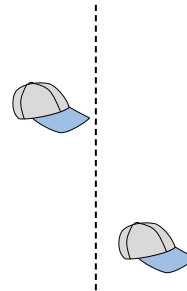
7)



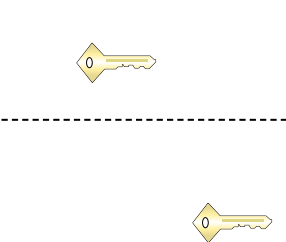
8)



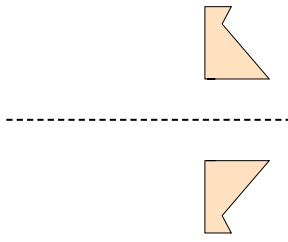
9)




10)




11)



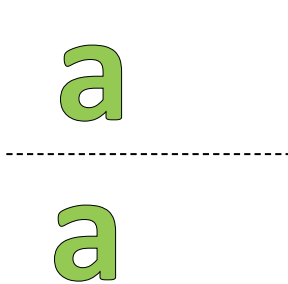
12)



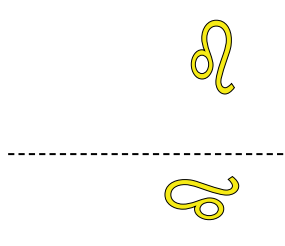
13)



14)



15)



**Réponses**

1. rotation

2. réflexion

3. réflexion

4. réflexion

5. translation

6. rotation

7. translation

8. réflexion

9. translation

10. translation

11. réflexion

12. rotation

13. rotation

14. translation

15. rotation



Déterminez si la figure a effectué une translation, une rotation ou une réflexion.

**Réponses**

1)



2)



3)



4)



5)



6)



7)



8)



9)



10)



11)



12)



13)



14)



15)



1. \_\_\_\_\_

2. \_\_\_\_\_

3. \_\_\_\_\_

4. \_\_\_\_\_

5. \_\_\_\_\_

6. \_\_\_\_\_

7. \_\_\_\_\_

8. \_\_\_\_\_

9. \_\_\_\_\_

10. \_\_\_\_\_

11. \_\_\_\_\_

12. \_\_\_\_\_

13. \_\_\_\_\_

14. \_\_\_\_\_

15. \_\_\_\_\_



Déterminez si la figure a effectué une translation, une rotation ou une réflexion.

1)



2)




3)




4)



5)



6)



7)



8)



9)



10)



11)



12)



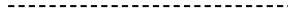
13)



14)



15)



**Réponses**

1. rotation

2. réflexion

3. rotation

4. réflexion

5. translation

6. translation

7. translation

8. réflexion

9. réflexion

10. rotation

11. rotation

12. rotation

13. réflexion

14. translation

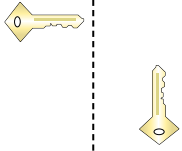
15. translation



Déterminez si la figure a effectué une translation, une rotation ou une réflexion.

**Réponses**

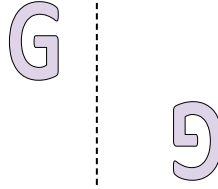
1)



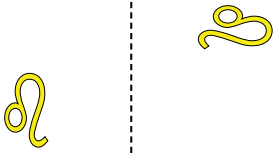
2)



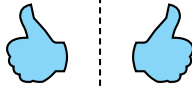
3)



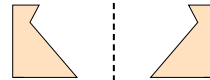
4)



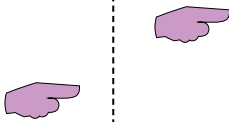
5)



6)



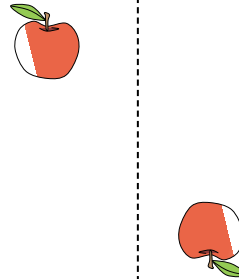
7)



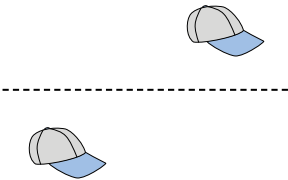
8)



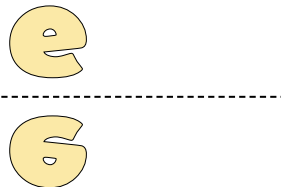
9)



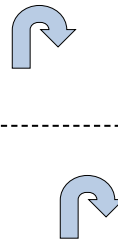
10)




11)




12)



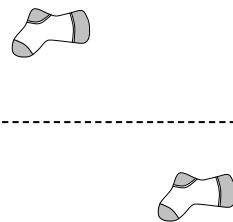
13)



14)



15)

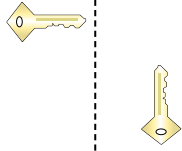


1. \_\_\_\_\_
2. \_\_\_\_\_
3. \_\_\_\_\_
4. \_\_\_\_\_
5. \_\_\_\_\_
6. \_\_\_\_\_
7. \_\_\_\_\_
8. \_\_\_\_\_
9. \_\_\_\_\_
10. \_\_\_\_\_
11. \_\_\_\_\_
12. \_\_\_\_\_
13. \_\_\_\_\_
14. \_\_\_\_\_
15. \_\_\_\_\_



Déterminez si la figure a effectué une translation, une rotation ou une réflexion.

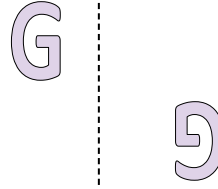
1)



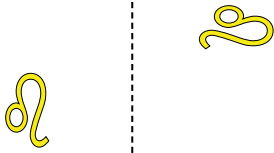
2)



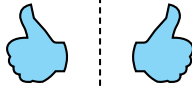
3)



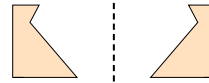
4)



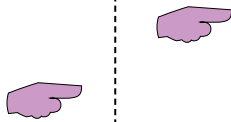
5)



6)



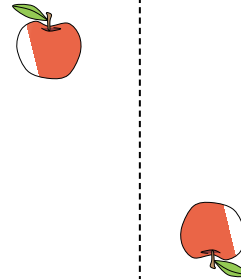
7)



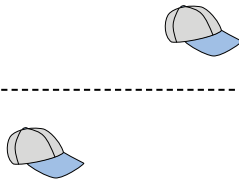
8)



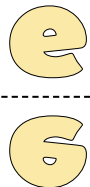
9)



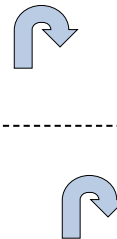
10)



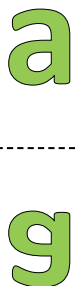
11)




12)



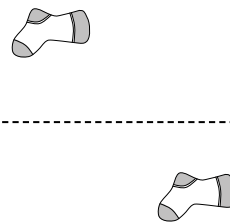
13)



14)



15)



**Réponses**

1. rotation

2. translation

3. rotation

4. rotation

5. réflexion

6. réflexion

7. translation

8. réflexion

9. rotation

10. translation

11. réflexion

12. translation

13. réflexion

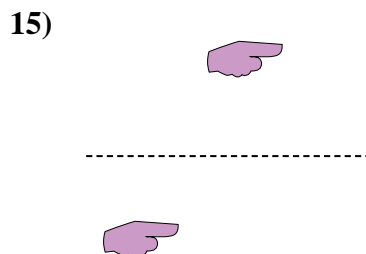
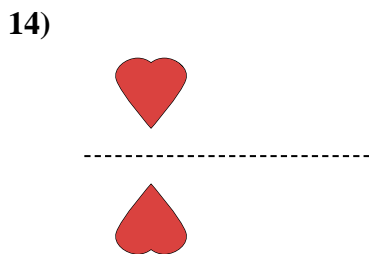
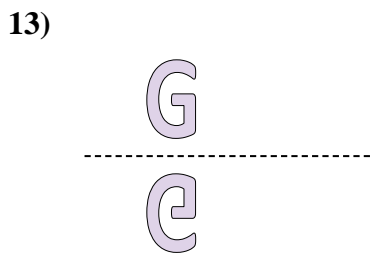

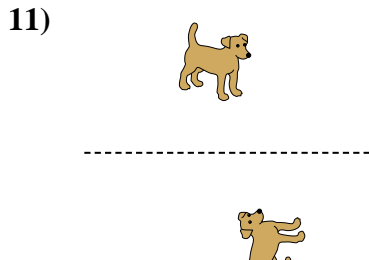
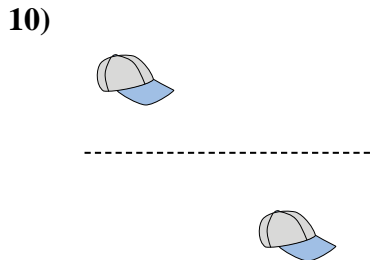
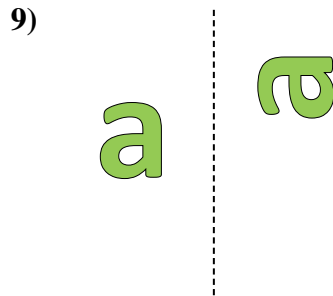
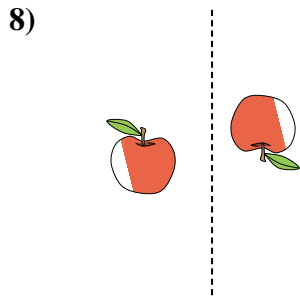
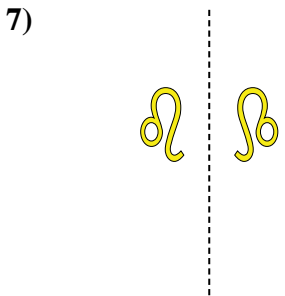
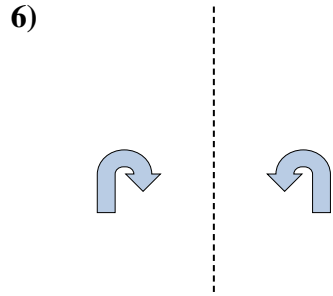
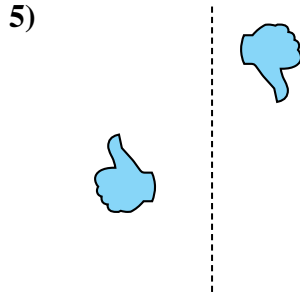
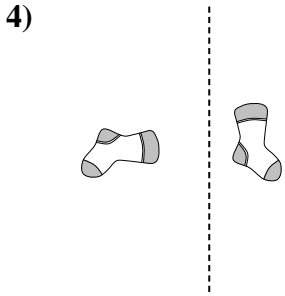
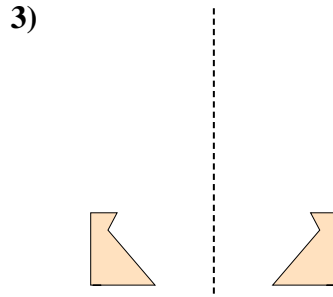
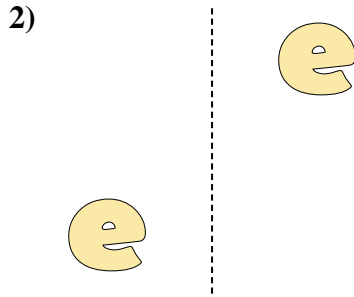
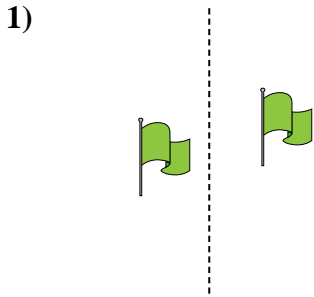
14. réflexion

15. translation



Déterminez si la figure a effectué une translation, une rotation ou une réflexion.

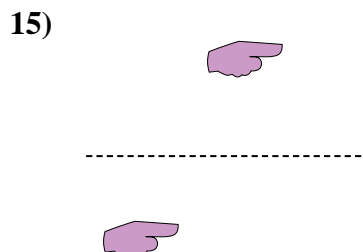
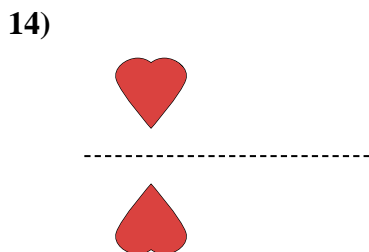
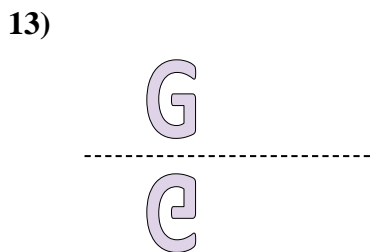
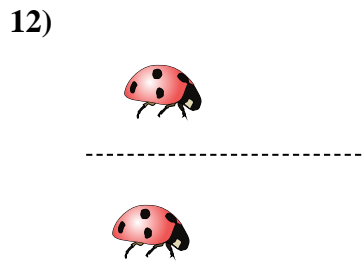
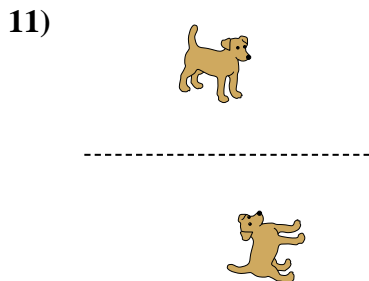
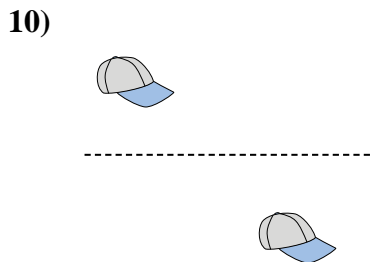
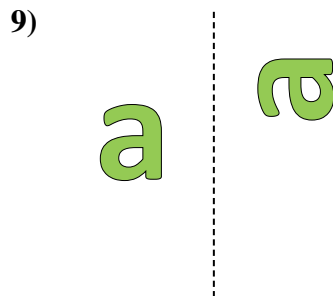
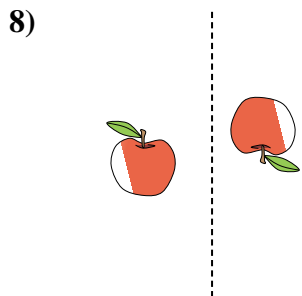
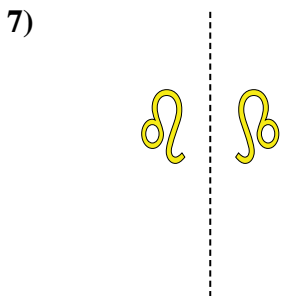
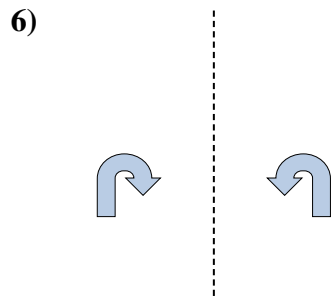
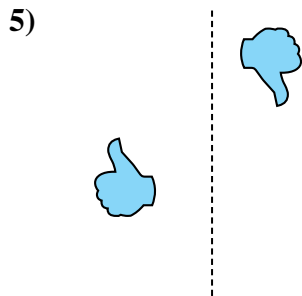
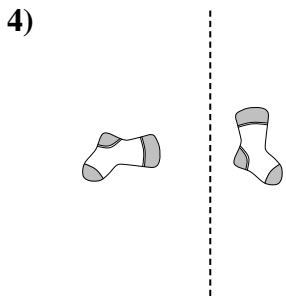
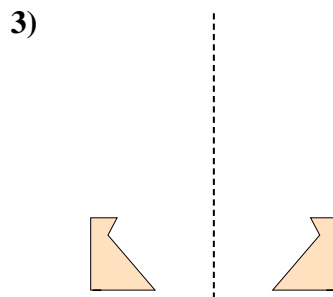
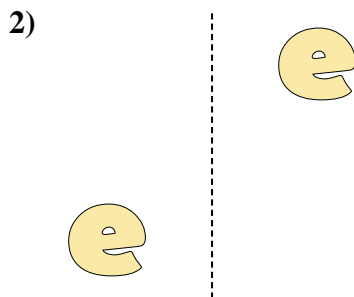
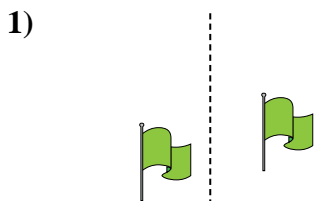
**Réponses**



1. \_\_\_\_\_
2. \_\_\_\_\_
3. \_\_\_\_\_
4. \_\_\_\_\_
5. \_\_\_\_\_
6. \_\_\_\_\_
7. \_\_\_\_\_
8. \_\_\_\_\_
9. \_\_\_\_\_
10. \_\_\_\_\_
11. \_\_\_\_\_
12. \_\_\_\_\_
13. \_\_\_\_\_
14. \_\_\_\_\_
15. \_\_\_\_\_



Déterminez si la figure a effectué une translation, une rotation ou une réflexion.



**Réponses**

1. **translation**

2. **translation**

3. **réflexion**

4. **rotation**

5. **rotation**

6. **réflexion**

7. **réflexion**

8. **rotation**

9. **rotation**

10. **translation**

11. **rotation**

12. **translation**

13. **réflexion**

14. **réflexion**

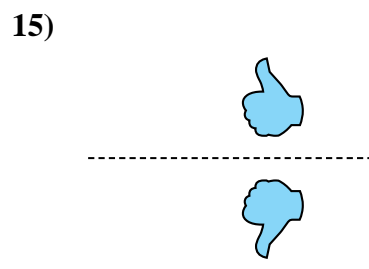
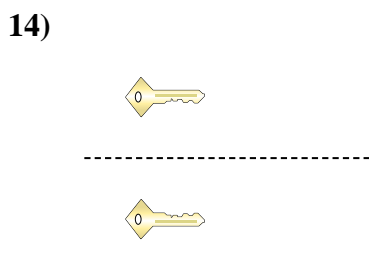
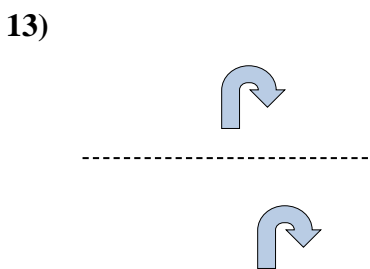
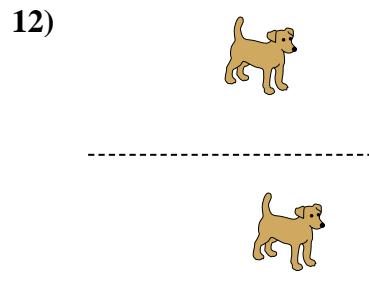
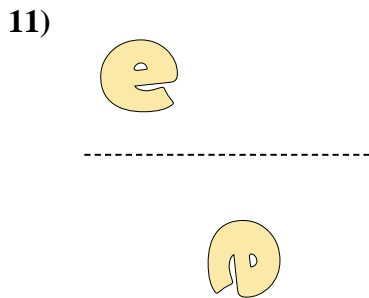
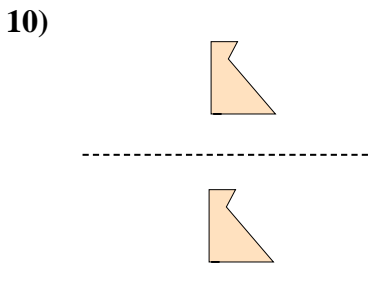
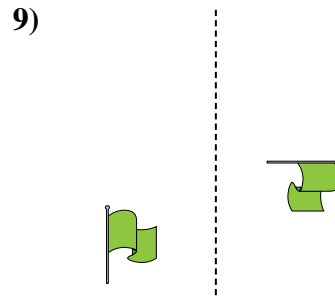
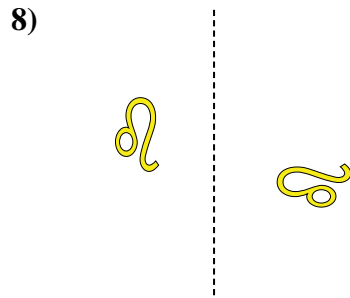
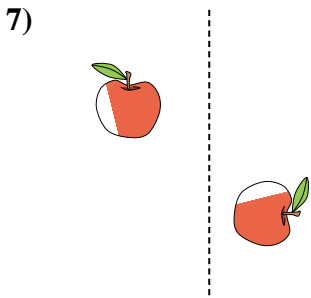
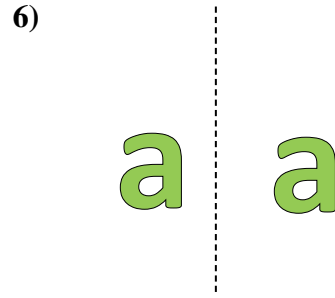
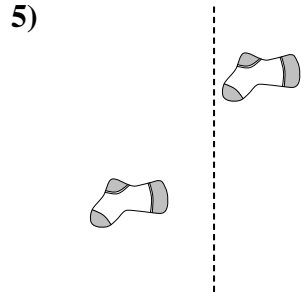
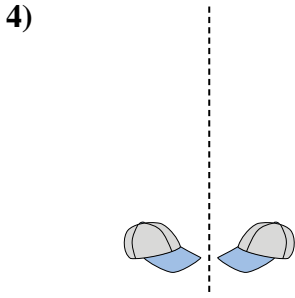
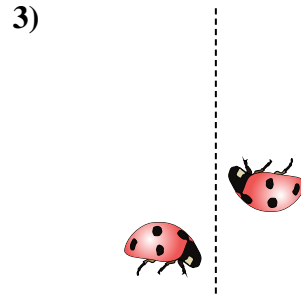
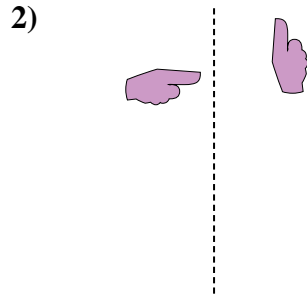
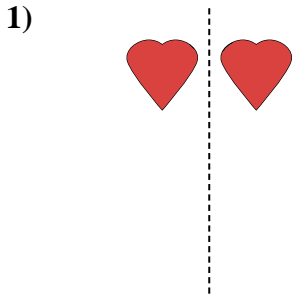
15. **translation**





Déterminez si la figure a effectué une translation, une rotation ou une réflexion.

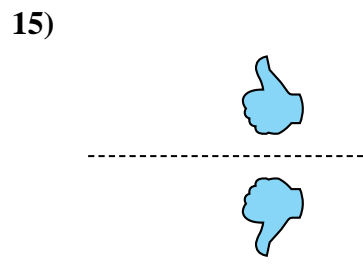
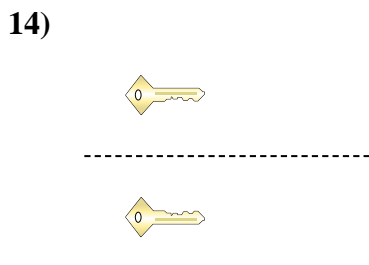
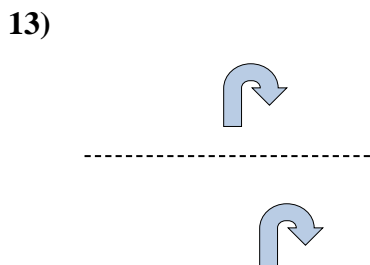
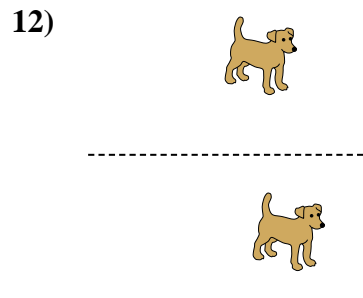
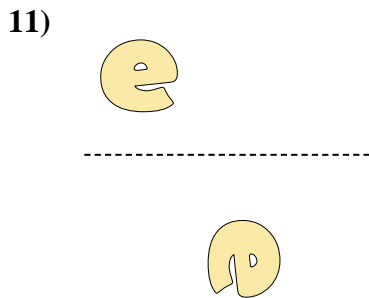
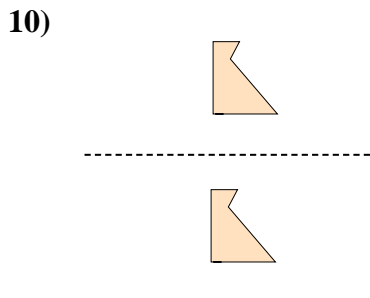
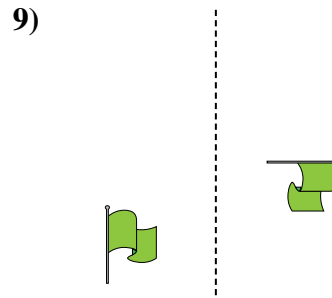
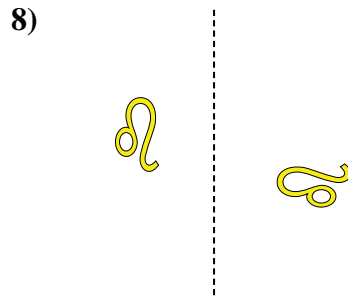
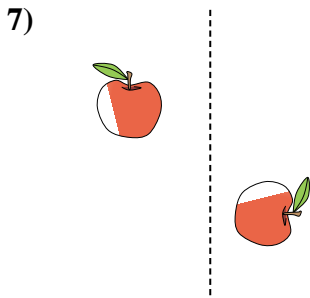
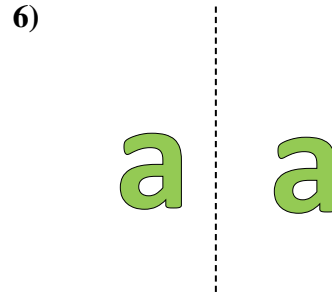
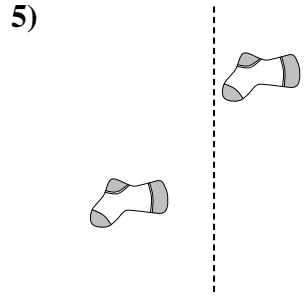
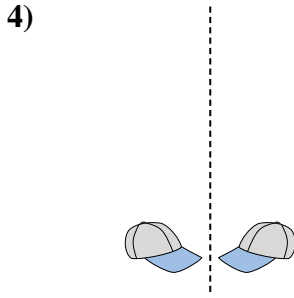
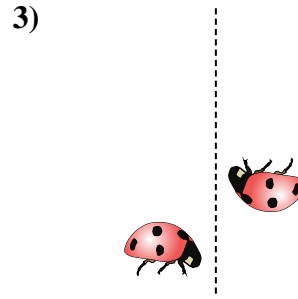
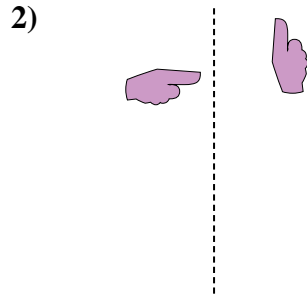
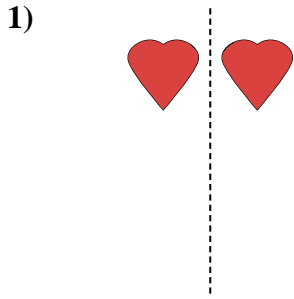
**Réponses**



1. \_\_\_\_\_
2. \_\_\_\_\_
3. \_\_\_\_\_
4. \_\_\_\_\_
5. \_\_\_\_\_
6. \_\_\_\_\_
7. \_\_\_\_\_
8. \_\_\_\_\_
9. \_\_\_\_\_
10. \_\_\_\_\_
11. \_\_\_\_\_
12. \_\_\_\_\_
13. \_\_\_\_\_
14. \_\_\_\_\_
15. \_\_\_\_\_



Déterminez si la figure a effectué une translation, une rotation ou une réflexion.



Réponses

1. réflexion

2. rotation

3. rotation

4. réflexion

5. translation

6. translation

7. rotation

8. rotation

9. rotation

10. translation

11. rotation

12. translation

13. translation

14. réflexion

15. réflexion



Déterminez si la figure a effectué une translation, une rotation ou une réflexion.

**Réponses**


1)



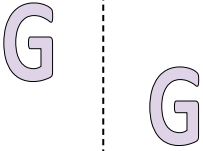
2)



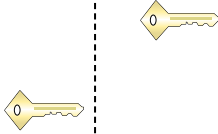
3)



4)



5)




6)



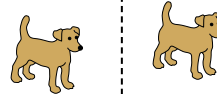
7)



8)



9)



10)



11)



12)



13)



14)



15)



1. \_\_\_\_\_
2. \_\_\_\_\_
3. \_\_\_\_\_
4. \_\_\_\_\_
5. \_\_\_\_\_
6. \_\_\_\_\_
7. \_\_\_\_\_
8. \_\_\_\_\_
9. \_\_\_\_\_
10. \_\_\_\_\_
11. \_\_\_\_\_
12. \_\_\_\_\_
13. \_\_\_\_\_
14. \_\_\_\_\_
15. \_\_\_\_\_



Déterminez si la figure a effectué une translation, une rotation ou une réflexion.


1)



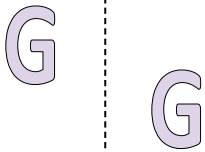
2)



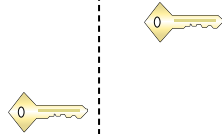
3)



4)



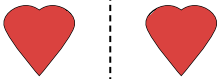
5)




6)



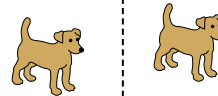
7)



8)



9)



10)



11)



12)



13)



14)



15)



**Réponses**

1. **réflexion**

2. **translation**

3. **rotation**

4. **translation**

5. **translation**

6. **rotation**

7. **réflexion**

8. **réflexion**

9. **translation**

10. **translation**

11. **translation**

12. **réflexion**

13. **rotation**

14. **rotation**

15. **rotation**



Déterminez si la figure a effectué une translation, une rotation ou une réflexion.

**Réponses**

1)



2)



3)



4)



5)



6)



7)



8)



9)



10)



11)



12)



13)



14)



15)



1. \_\_\_\_\_
2. \_\_\_\_\_
3. \_\_\_\_\_
4. \_\_\_\_\_
5. \_\_\_\_\_
6. \_\_\_\_\_
7. \_\_\_\_\_
8. \_\_\_\_\_
9. \_\_\_\_\_
10. \_\_\_\_\_
11. \_\_\_\_\_
12. \_\_\_\_\_
13. \_\_\_\_\_
14. \_\_\_\_\_
15. \_\_\_\_\_



Déterminez si la figure a effectué une translation, une rotation ou une réflexion.

1)



2)



3)



4)



5)




6)




7)



8)



9)



10)



11)



12)



13)



14)



15)



**Réponses**

1. **translation**

2. **translation**

3. **réflexion**

4. **rotation**

5. **translation**

6. **rotation**

7. **rotation**

8. **réflexion**

9. **rotation**

10. **réflexion**

11. **rotation**

12. **rotation**

13. **translation**

14. **réflexion**

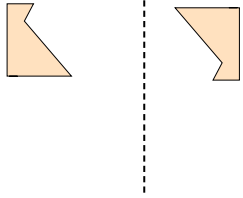
15. **réflexion**



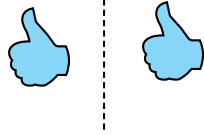
Déterminez si la figure a effectué une translation, une rotation ou une réflexion.

**Réponses**


1)



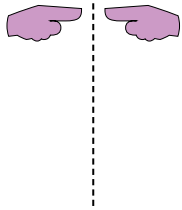
2)



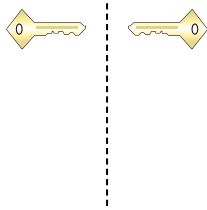
3)



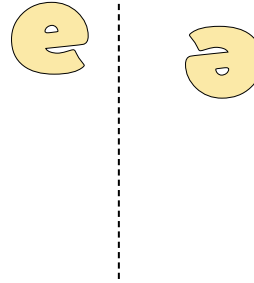
4)



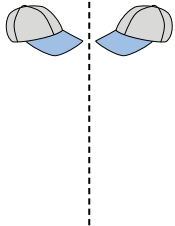
5)



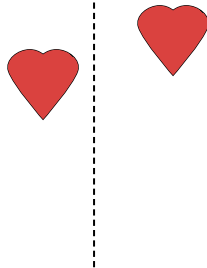
6)




7)



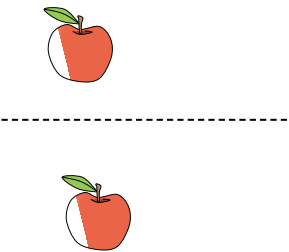
8)



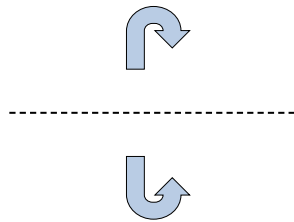
9)



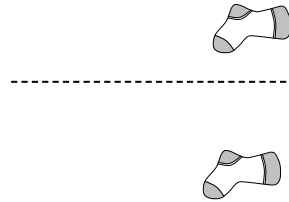
10)



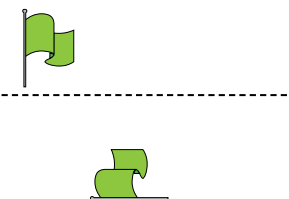
11)



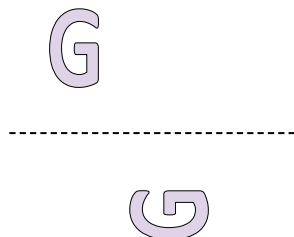
12)



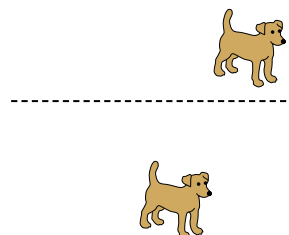
13)



14)



15)




1. \_\_\_\_\_
2. \_\_\_\_\_
3. \_\_\_\_\_
4. \_\_\_\_\_
5. \_\_\_\_\_
6. \_\_\_\_\_
7. \_\_\_\_\_
8. \_\_\_\_\_
9. \_\_\_\_\_
10. \_\_\_\_\_
11. \_\_\_\_\_
12. \_\_\_\_\_
13. \_\_\_\_\_
14. \_\_\_\_\_
15. \_\_\_\_\_

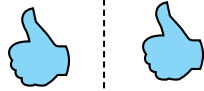


Déterminez si la figure a effectué une translation, une rotation ou une réflexion.


1)



2)



3)



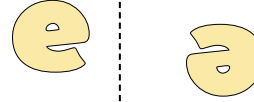
4)



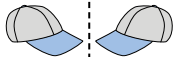
5)



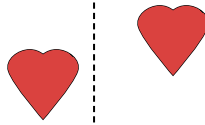
6)



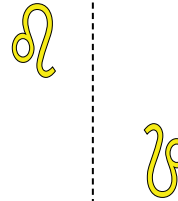
7)



8)



9)



10)



11)



12)



13)



14)



15)



**Réponses**

1. rotation

2. translation

3. réflexion

4. réflexion

5. réflexion

6. rotation

7. réflexion

8. translation

9. rotation

10. translation

11. réflexion

12. translation

13. rotation

14. rotation

15. translation






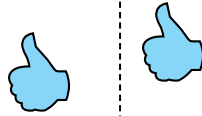
Déterminez si la figure a effectué une translation, une rotation ou une réflexion.

**Réponses**

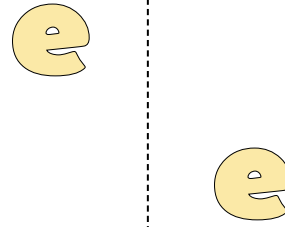
1)



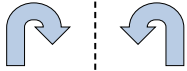
2)



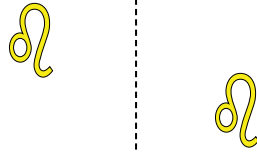
3)




4)



5)



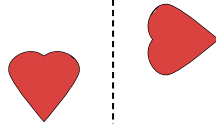
6)



7)



8)




9)




10)



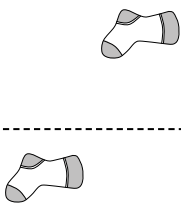
11)



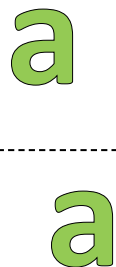
12)



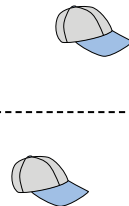
13)



14)



15)




1. \_\_\_\_\_
2. \_\_\_\_\_
3. \_\_\_\_\_
4. \_\_\_\_\_
5. \_\_\_\_\_
6. \_\_\_\_\_
7. \_\_\_\_\_
8. \_\_\_\_\_
9. \_\_\_\_\_
10. \_\_\_\_\_
11. \_\_\_\_\_
12. \_\_\_\_\_
13. \_\_\_\_\_
14. \_\_\_\_\_
15. \_\_\_\_\_

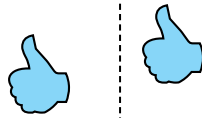


Déterminez si la figure a effectué une translation, une rotation ou une réflexion.

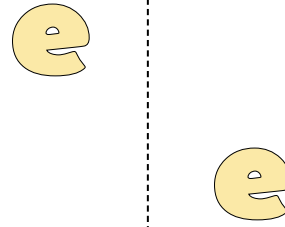
1)



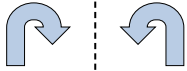
2)



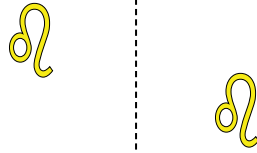
3)




4)



5)



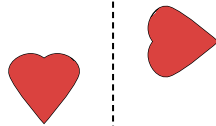
6)



7)




8)



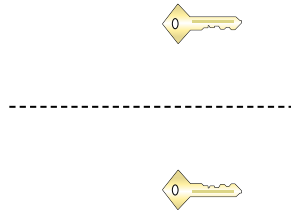
9)



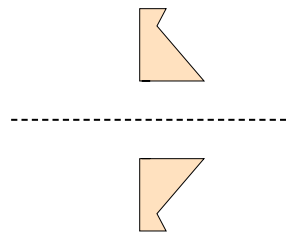
10)



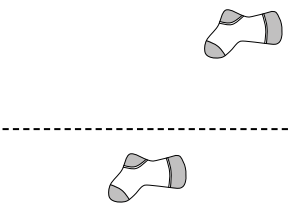
11)



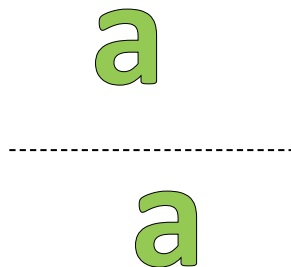
12)



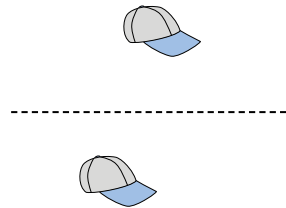
13)



14)



15)



**Réponses**

1. rotation

2. translation

3. translation

4. réflexion

5. translation

6. rotation

7. rotation

8. rotation

9. réflexion

10. réflexion

11. réflexion

12. réflexion

13. translation

14. translation

15. translation



Déterminez si la figure a effectué une translation, une rotation ou une réflexion.

**Réponses**

1)



2)



3)



4)



5)



6)



7)



8)



9)



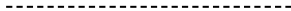
10)



11)



12)



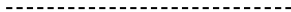
13)



14)



15)



1. \_\_\_\_\_
2. \_\_\_\_\_
3. \_\_\_\_\_
4. \_\_\_\_\_
5. \_\_\_\_\_
6. \_\_\_\_\_
7. \_\_\_\_\_
8. \_\_\_\_\_
9. \_\_\_\_\_
10. \_\_\_\_\_
11. \_\_\_\_\_
12. \_\_\_\_\_
13. \_\_\_\_\_
14. \_\_\_\_\_
15. \_\_\_\_\_



Déterminez si la figure a effectué une translation, une rotation ou une réflexion.

1)



2)



3)



4)



5)



6)



7)



8)



9)



10)



11)



12)



13)



14)



15)



**Réponses**

1. **translation**

2. **rotation**

3. **translation**

4. **réflexion**

5. **rotation**

6. **translation**

7. **réflexion**

8. **translation**

9. **réflexion**

10. **translation**

11. **translation**

12. **rotation**

13. **rotation**

14. **rotation**

15. **réflexion**