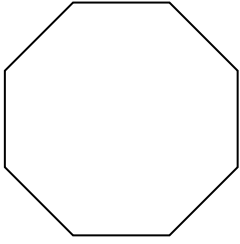


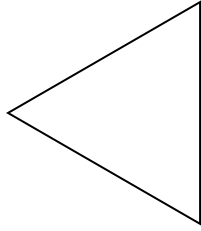


Déterminer si la figure est régulière ou irrégulière.

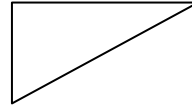
1)



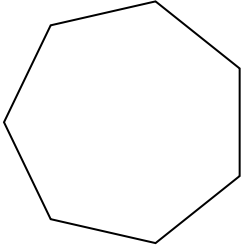
2)



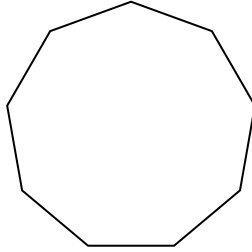
3)




4)



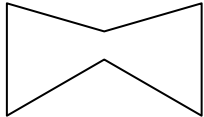
5)



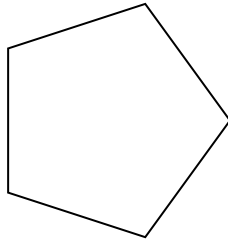
6)




7)




8)



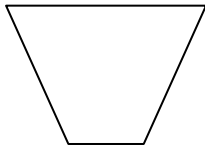
9)




10)




11)




12)



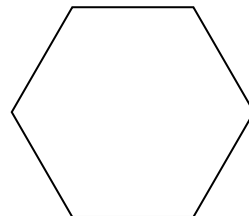
13)



14)



15)



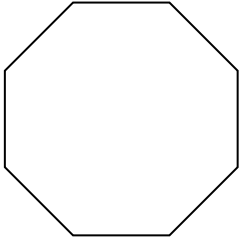
**Réponses**

- 1. \_\_\_\_\_
- 2. \_\_\_\_\_
- 3. \_\_\_\_\_
- 4. \_\_\_\_\_
- 5. \_\_\_\_\_
- 6. \_\_\_\_\_
- 7. \_\_\_\_\_
- 8. \_\_\_\_\_
- 9. \_\_\_\_\_
- 10. \_\_\_\_\_
- 11. \_\_\_\_\_
- 12. \_\_\_\_\_
- 13. \_\_\_\_\_
- 14. \_\_\_\_\_
- 15. \_\_\_\_\_

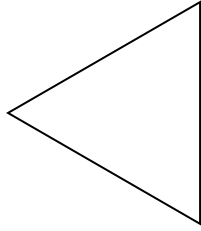


Déterminer si la figure est régulière ou irrégulière.

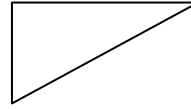
1)



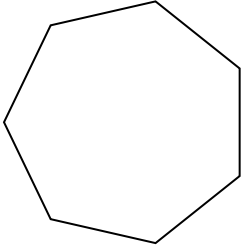
2)



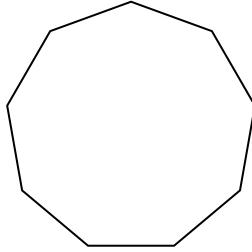
3)




4)



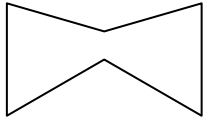
5)



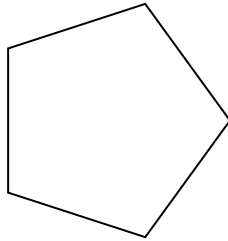
6)




7)




8)



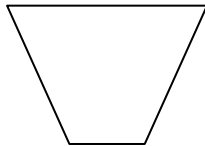
9)




10)




11)




12)



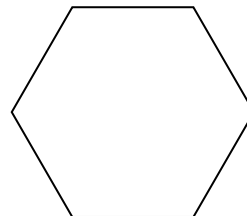
13)



14)



15)



**Réponses**

1. régulière

2. régulière

3. irrégulière

4. régulière

5. régulière

6. irrégulière

7. irrégulière

8. régulière

9. irrégulière

10. régulière

11. irrégulière

12. irrégulière

13. irrégulière

14. irrégulière

15. régulière