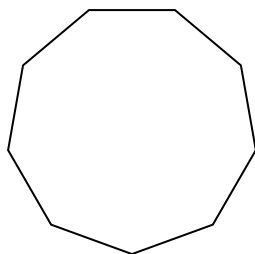


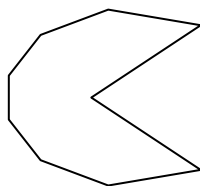


Déterminer si la figure est régulière ou irrégulière.

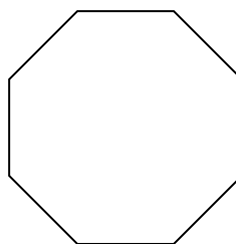
1)



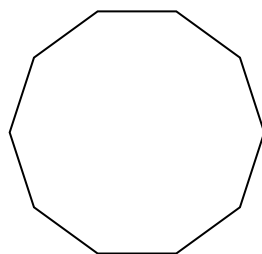
2)



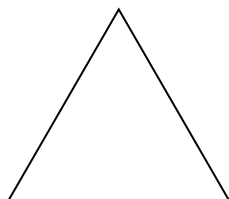
3)




4)




5)




6)



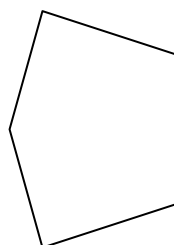
7)



8)




9)



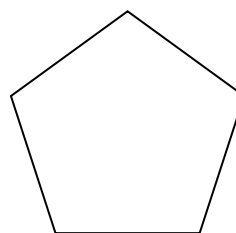
10)




11)



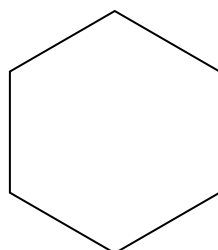
12)



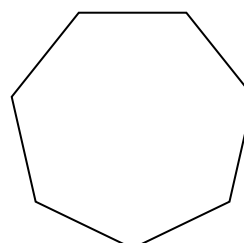
13)



14)



15)



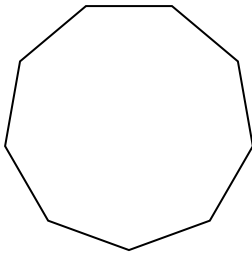
Réponses

1. _____
2. _____
3. _____
4. _____
5. _____
6. _____
7. _____
8. _____
9. _____
10. _____
11. _____
12. _____
13. _____
14. _____
15. _____

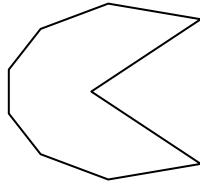


Déterminer si la figure est régulière ou irrégulière.

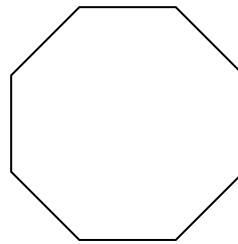
1)



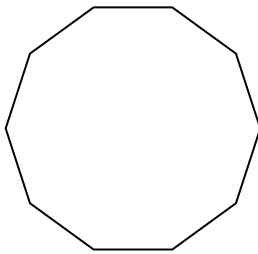
2)



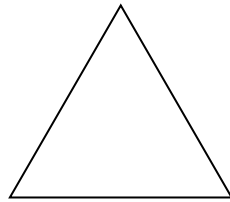
3)




4)




5)




6)



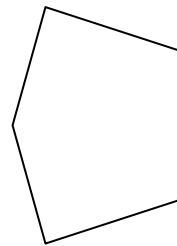
7)




8)




9)



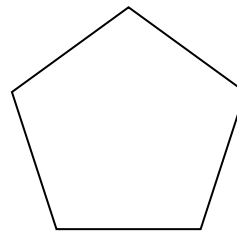
10)




11)



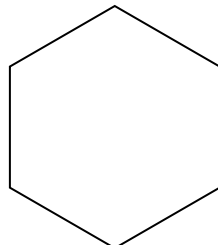
12)



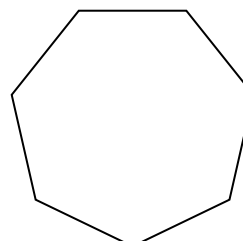
13)



14)



15)

Réponses

1. Régulier
2. Irrégulier
3. Régulier
4. Régulier
5. Régulier
6. Irrégulier
7. Irrégulier
8. Irrégulier
9. Irrégulier
10. Régulier
11. Irrégulier
12. Régulier
13. Irrégulier
14. Régulier
15. Régulier