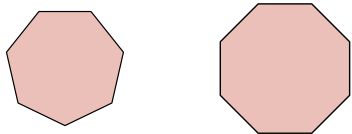




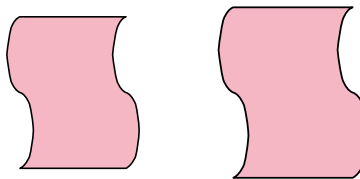
Déterminez si les formes affichées sont « similaires », « congruentes » ou « aucune ».

**Réponses**


1)



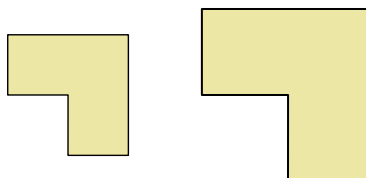
2)



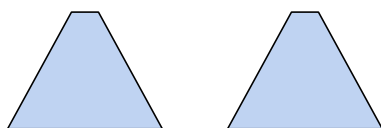
3)



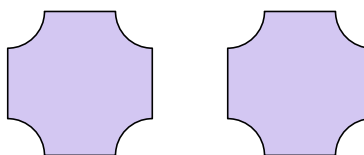
4)



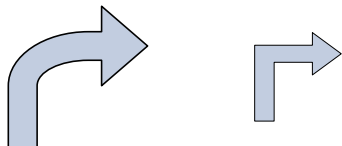
5)



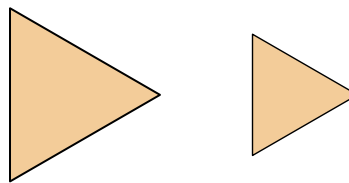
6)



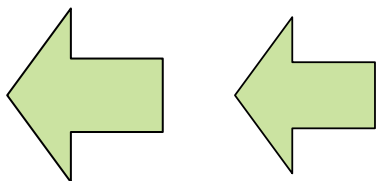
7)



8)



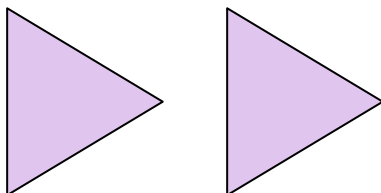
9)



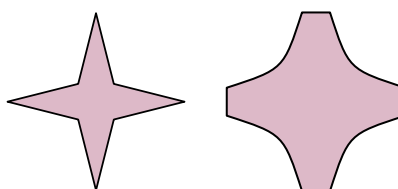
10)



11)



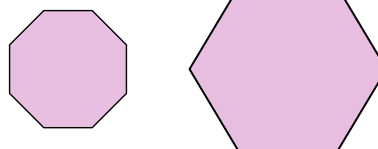
12)



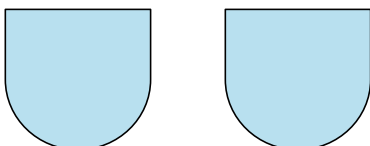
13)



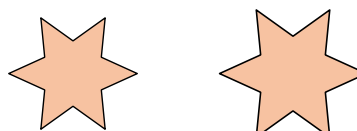
14)



15)



16)



1. \_\_\_\_\_

2. \_\_\_\_\_

3. \_\_\_\_\_

4. \_\_\_\_\_

5. \_\_\_\_\_

6. \_\_\_\_\_

7. \_\_\_\_\_

8. \_\_\_\_\_

9. \_\_\_\_\_

10. \_\_\_\_\_

11. \_\_\_\_\_

12. \_\_\_\_\_

13. \_\_\_\_\_

14. \_\_\_\_\_

15. \_\_\_\_\_

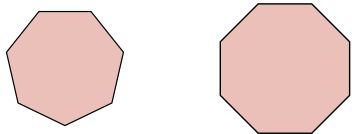
16. \_\_\_\_\_



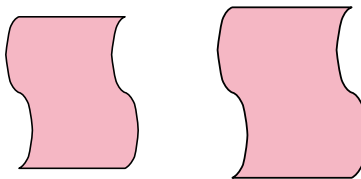
Déterminez si les formes affichées sont « similaires », « congruentes » ou « aucune ».

**Réponses**


1)



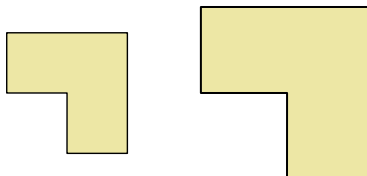
2)



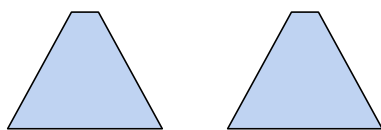
3)



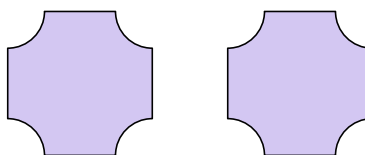
4)



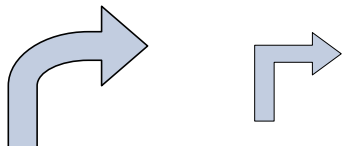
5)



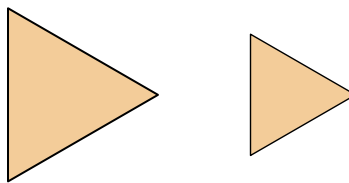
6)



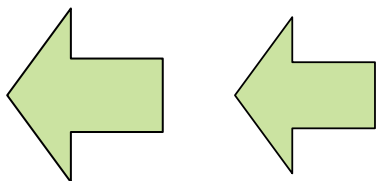
7)



8)



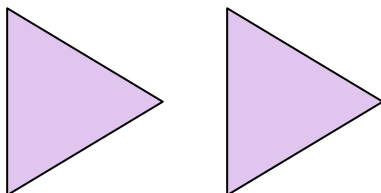
9)



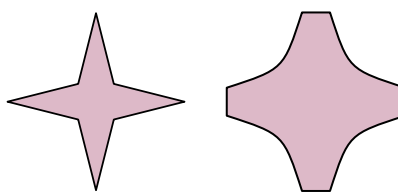
10)



11)



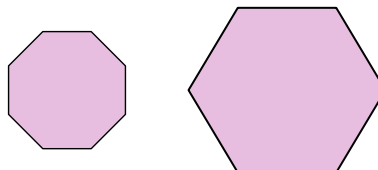
12)



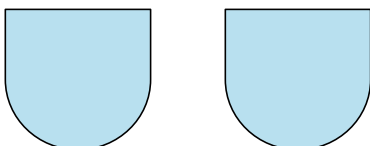
13)



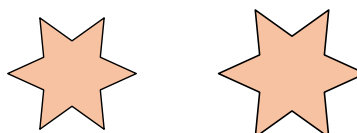
14)



15)



16)

1. ni l'un ni l'autre2. semblables3. ni l'un ni l'autre4. semblables5. congruents6. congruents7. ni l'un ni l'autre8. semblables9. semblables10. congruents11. congruents12. ni l'un ni l'autre13. congruents14. ni l'un ni l'autre15. congruents16. semblables