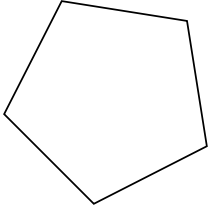





Identifiez le type de figure montrée.

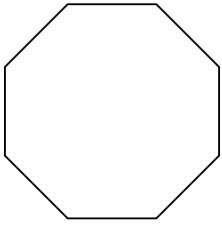
1)



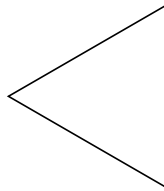
2)



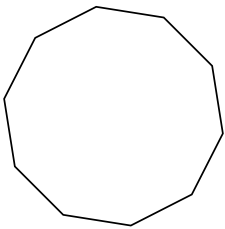
3)



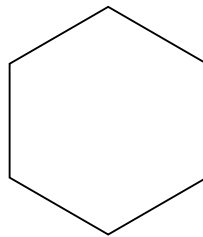
4)



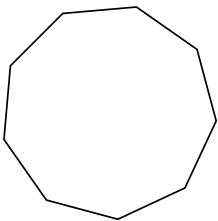
5)



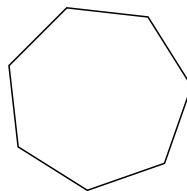
6)



7)



8)



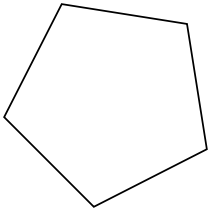
**Réponses**

- 1. \_\_\_\_\_
- 2. \_\_\_\_\_
- 3. \_\_\_\_\_
- 4. \_\_\_\_\_
- 5. \_\_\_\_\_
- 6. \_\_\_\_\_
- 7. \_\_\_\_\_
- 8. \_\_\_\_\_




Identifiez le type de figure montrée.

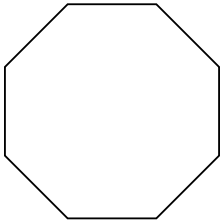
1)



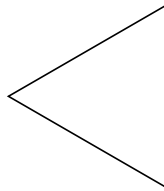
2)



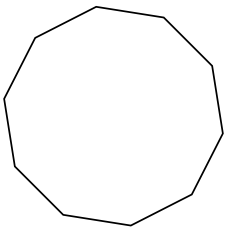
3)



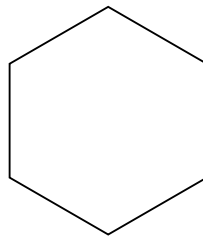
4)



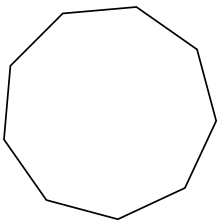
5)



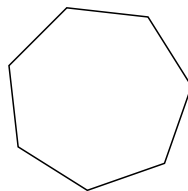
6)



7)



8)



Réponses

1. Pentagone

2. Quadrilatère

3. Octogone

4. triangle

5. Décagone

6. Hexagone

7. Nonagone

8. Heptagone