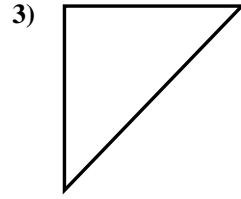
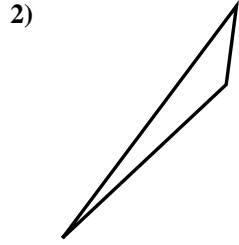
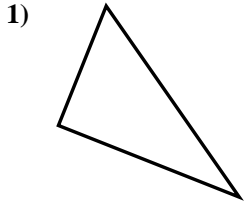




Déterminez si la figure est un triangle rectangle (oui ou non).

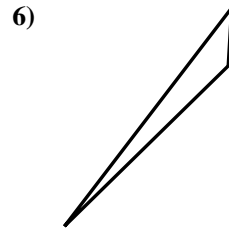
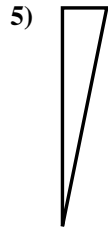
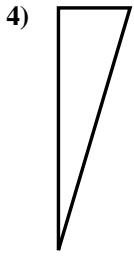
**Réponses**



1. \_\_\_\_\_

2. \_\_\_\_\_

3. \_\_\_\_\_

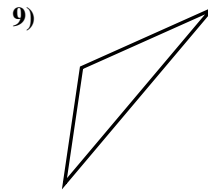
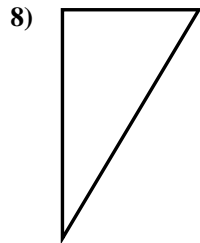
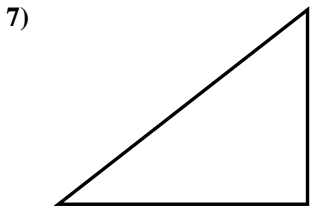


4. \_\_\_\_\_

5. \_\_\_\_\_

6. \_\_\_\_\_

7. \_\_\_\_\_

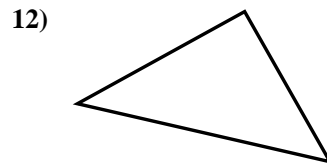
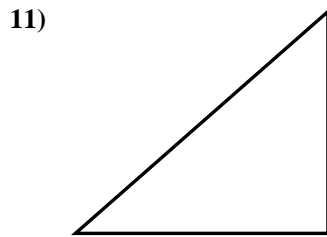
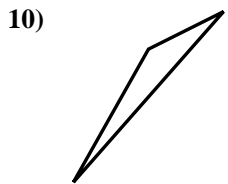


8. \_\_\_\_\_

9. \_\_\_\_\_

10. \_\_\_\_\_

11. \_\_\_\_\_

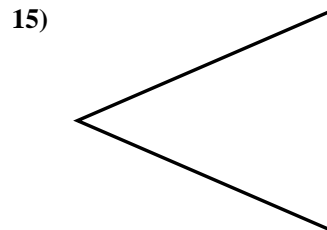
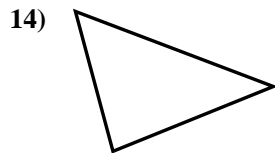
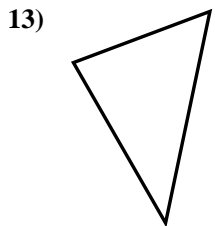


12. \_\_\_\_\_

13. \_\_\_\_\_

14. \_\_\_\_\_

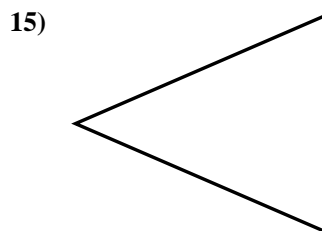
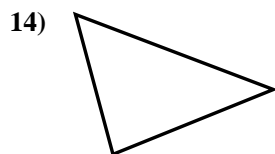
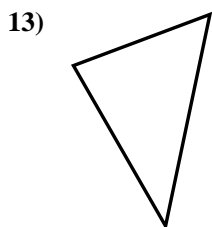
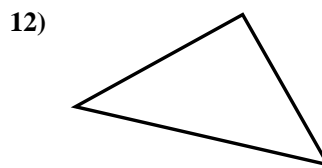
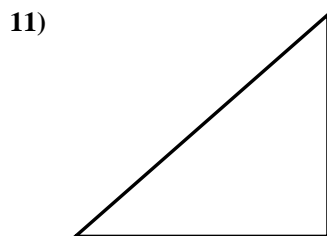
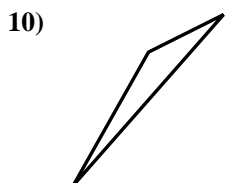
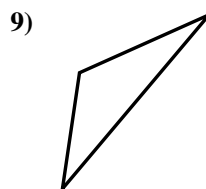
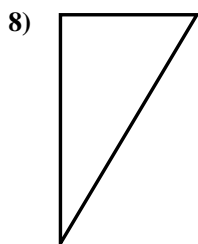
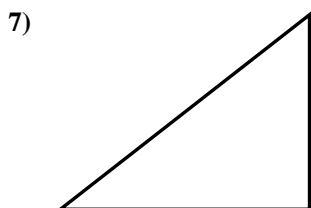
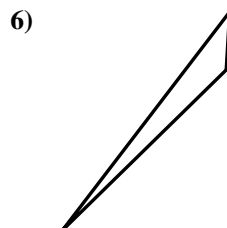
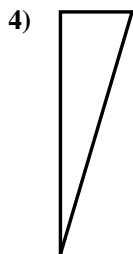
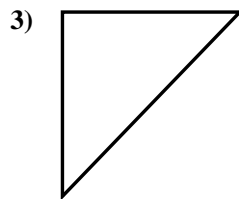
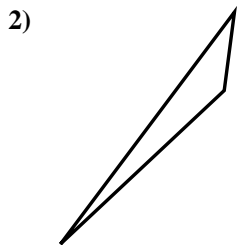
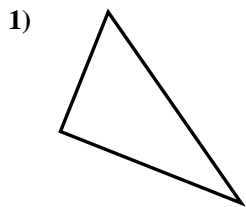
15. \_\_\_\_\_





Déterminez si la figure est un triangle rectangle (oui ou non).

**Réponses**



1. oui

2. non

3. oui

4. oui

5. oui

6. non

7. oui

8. oui

9. non

10. non

11. oui

12. oui

13. non

14. non

15. non