



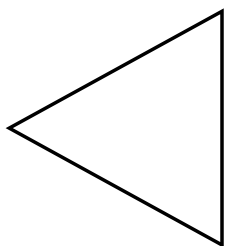
Identifier les triangles rectangles

Nom: _____

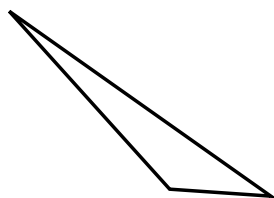
Déterminez si la figure est un triangle rectangle (oui ou non).

Réponses

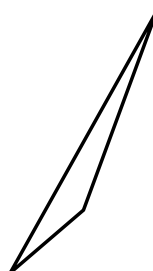
1)



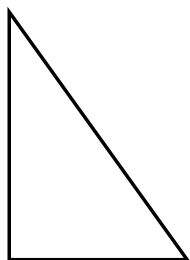
2)



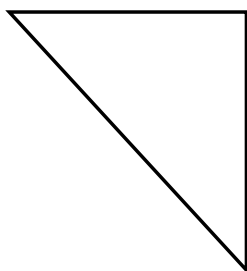
3)




4)



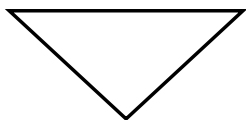
5)



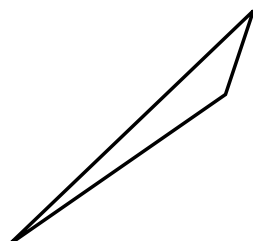
6)




7)



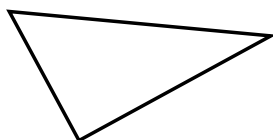
8)



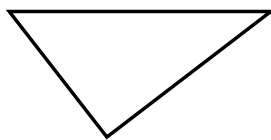
9)



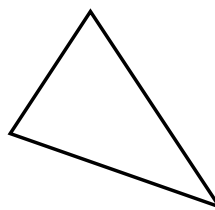
10)



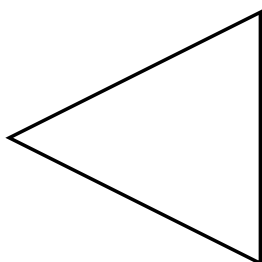
11)



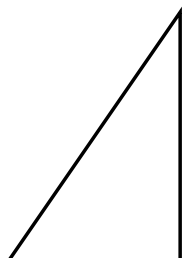
12)



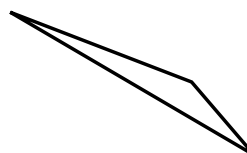
13)



14)



15)



1. _____

2. _____

3. _____

4. _____

5. _____

6. _____

7. _____

8. _____

9. _____

10. _____

11. _____

12. _____

13. _____

14. _____

15. _____



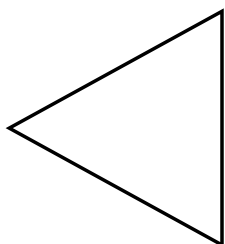
Identifier les triangles rectangles

Nom: **Clé**

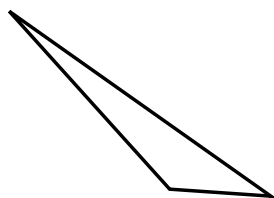
Déterminez si la figure est un triangle rectangle (oui ou non).

Réponses

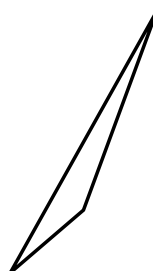
1)



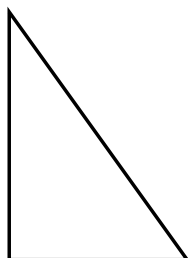
2)



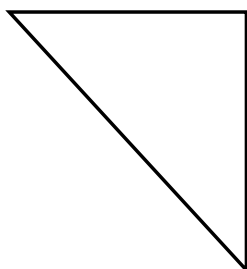
3)




4)



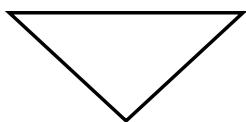
5)



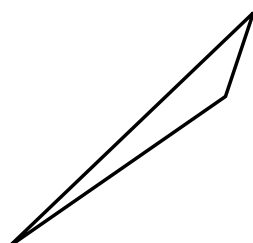
6)




7)



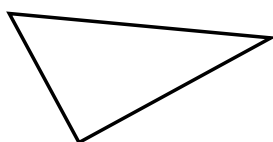
8)



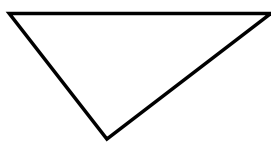
9)



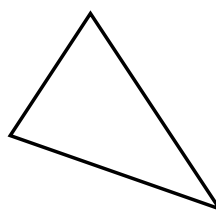
10)



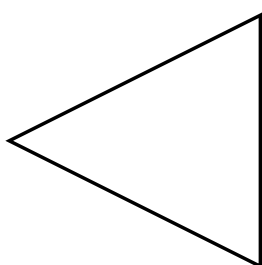
11)



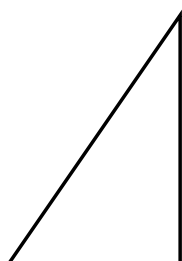
12)



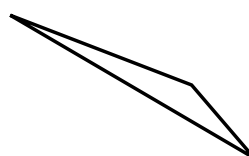
13)



14)



15)



1. **non**

2. **non**

3. **non**

4. **oui**

5. **oui**

6. **oui**

7. **non**

8. **non**

9. **oui**

10. **oui**

11. **oui**

12. **non**

13. **non**

14. **oui**

15. **non**