

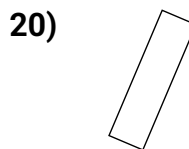
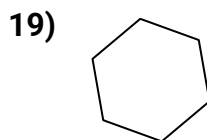
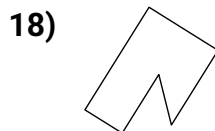
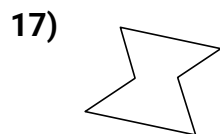
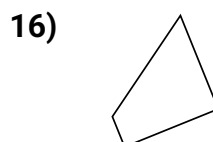
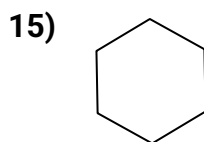
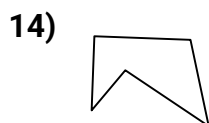
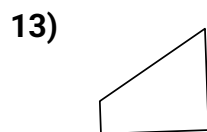
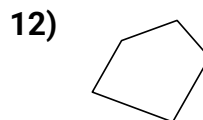
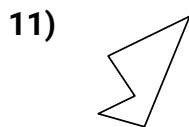
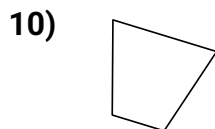
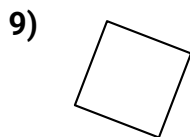
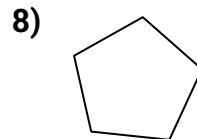
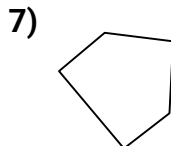
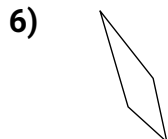
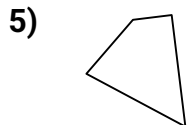
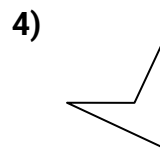
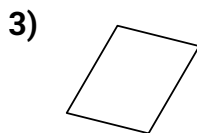
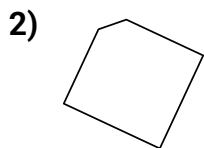



# Identifier des Quadrilatères

Nom: \_\_\_\_\_

Déterminez si la figure est un quadrilatère (oui ou non).

## Réponses



1. \_\_\_\_\_

2. \_\_\_\_\_

3. \_\_\_\_\_

4. \_\_\_\_\_

5. \_\_\_\_\_

6. \_\_\_\_\_

7. \_\_\_\_\_

8. \_\_\_\_\_

9. \_\_\_\_\_

10. \_\_\_\_\_

11. \_\_\_\_\_

12. \_\_\_\_\_

13. \_\_\_\_\_

14. \_\_\_\_\_

15. \_\_\_\_\_

16. \_\_\_\_\_

17. \_\_\_\_\_

18. \_\_\_\_\_

19. \_\_\_\_\_

20. \_\_\_\_\_

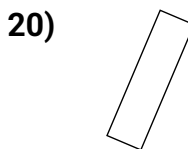
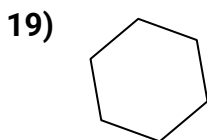
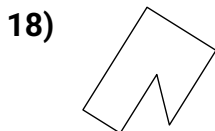
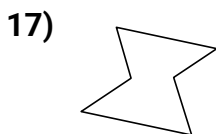
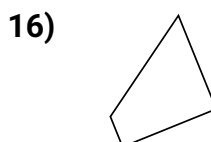
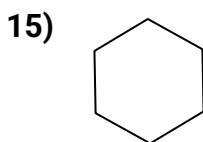
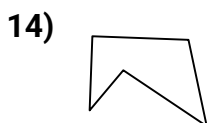
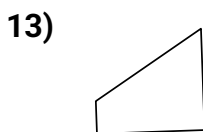
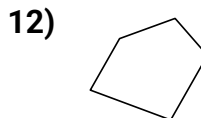
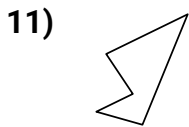
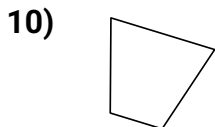
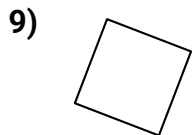
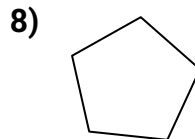
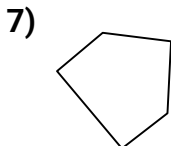
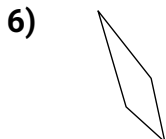
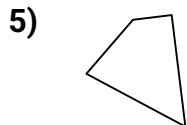
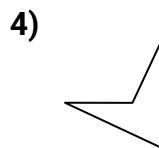
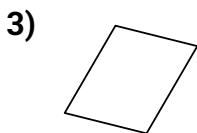
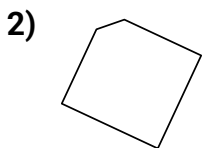



# Identifier des Quadrilatères

Nom: **Clé**

Déterminez si la figure est un quadrilatère (oui ou non).

## Réponses



1. non

2. non

3. oui

4. oui

5. oui

6. oui

7. non

8. non

9. oui

10. oui

11. non

12. non

13. oui

14. non

15. non

16. oui

17. non

18. non

19. non

20. oui