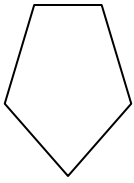




Déterminez quelle lettre représente le MIEUX les formes qui ont été utilisées pour créer la figure illustrée.

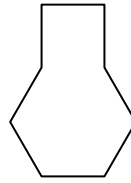
Réponses

1)



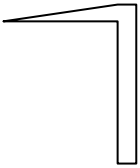
- A. Hexagone & triangle
- B. Quadrilatère & triangle
- C. rectangle & Pentagone
- D. rectangle & Octogone

2)



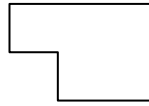
- A. Pentagone & square
- B. square & Heptagone
- C. Hexagone & square
- D. square & triangle

3)




- A. Quadrilatère & triangle
- B. square & Quadrilatère
- C. Heptagone & Octogone
- D. Hexagone & Heptagone

4)



- A. rectangle & square
- B. Hexagone & square
- C. Quadrilatère & Octogone
- D. rectangle & triangle

5)



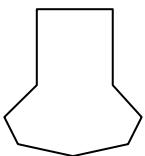
- A. triangle & triangle
- B. rectangle & Hexagone
- C. Pentagone & Quadrilatère
- D. rectangle & Quadrilatère

6)



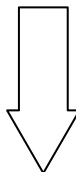
- A. Quadrilatère & Hexagone
- B. Quadrilatère & Heptagone
- C. Hexagone & Quadrilatère
- D. Quadrilatère & triangle

7)



- A. Heptagone & rectangle
- B. square & rectangle
- C. Heptagone & Quadrilatère
- D. Pentagone & Octogone

8)



- A. Hexagone & Octogone
- B. Octogone & square
- C. triangle & Pentagone
- D. rectangle & triangle

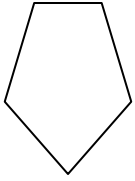
- 1. _____
- 2. _____
- 3. _____
- 4. _____
- 5. _____
- 6. _____
- 7. _____
- 8. _____



Déterminez quelle lettre représente le MIEUX les formes qui ont été utilisées pour créer la figure illustrée.

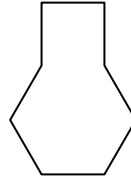
Réponses

1)



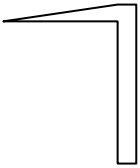
- A. Hexagone & triangle
- B. Quadrilatère & triangle
- C. rectangle & Pentagone
- D. rectangle & Octogone

2)



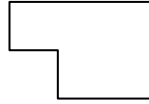
- A. Pentagone & square
- B. square & Heptagone
- C. Hexagone & square
- D. square & triangle

3)




- A. Quadrilatère & triangle
- B. square & Quadrilatère
- C. Heptagone & Octogone
- D. Hexagone & Heptagone

4)



- A. rectangle & square
- B. Hexagone & square
- C. Quadrilatère & Octogone
- D. rectangle & triangle

5)



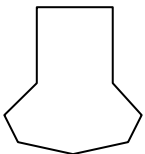
- A. triangle & triangle
- B. rectangle & Hexagone
- C. Pentagone & Quadrilatère
- D. rectangle & Quadrilatère

6)



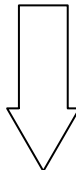
- A. Quadrilatère & Hexagone
- B. Quadrilatère & Heptagone
- C. Hexagone & Quadrilatère
- D. Quadrilatère & triangle

7)



- A. Heptagone & rectangle
- B. square & rectangle
- C. Heptagone & Quadrilatère
- D. Pentagone & Octogone

8)



- A. Hexagone & Octogone
- B. Octogone & square
- C. triangle & Pentagone
- D. rectangle & triangle

- 1. **B**
- 2. **C**
- 3. **A**
- 4. **A**
- 5. **A**
- 6. **C**
- 7. **C**
- 8. **D**