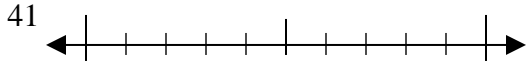




Utilisez la droite numérique associée pour arrondir à la dizaine.

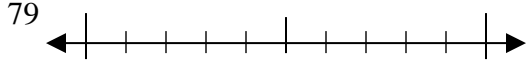
Réponses

Ex)



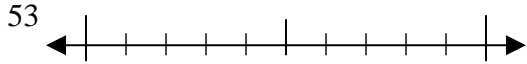
Ex. 40

1)



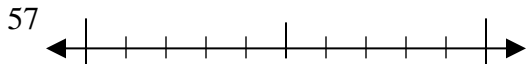
1. _____

2)



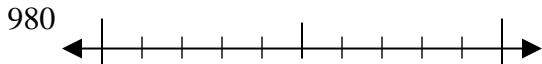
2. _____

3)



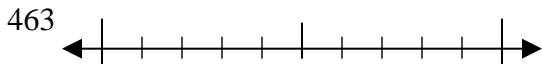
3. _____

4)



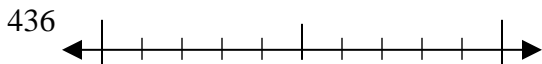
4. _____

5)



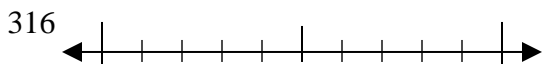
5. _____

6)



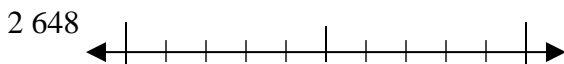
6. _____

7)



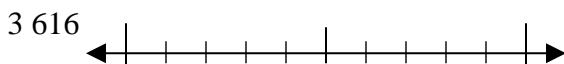
7. _____

8)



8. _____

9)

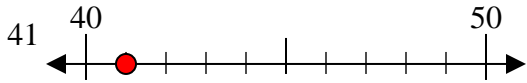


9. _____

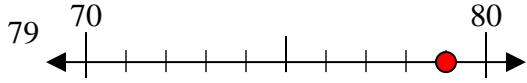


Utilisez la droite numérique associée pour arrondir à la dizaine.

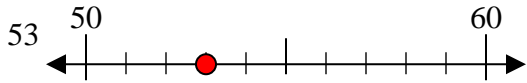
Ex)



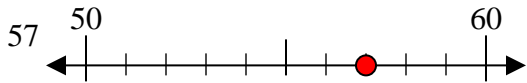
1)



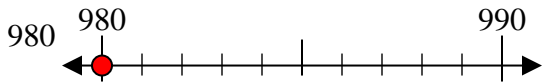
2)



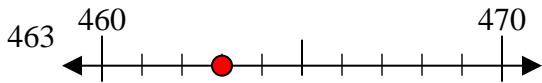
3)



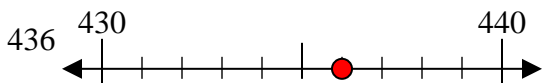
4)



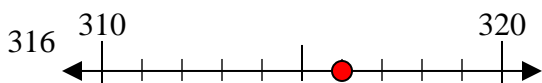
5)



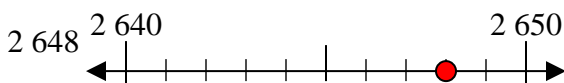
6)



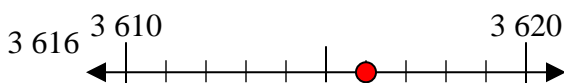
7)



8)



9)



Réponses

Ex. 40

1. 80

2. 50

3. 60

4. 980

5. 460

6. 440

7. 320

8. 2650

9. 3620