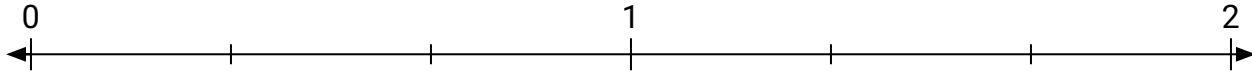


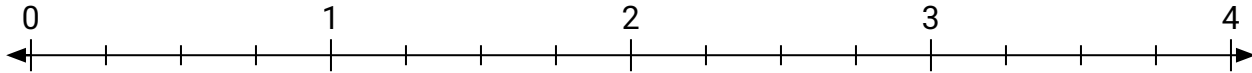


**Résoudre chaque problème.**


- 1) Marque l'emplacement de  $\frac{4}{3}$



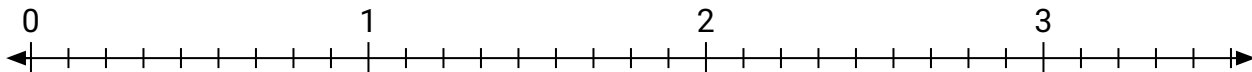
- 2) Marque l'emplacement de  $\frac{11}{4}$



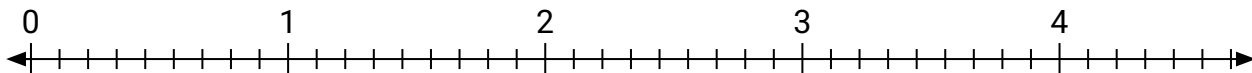
- 3) Marque l'emplacement de  $\frac{7}{4}$



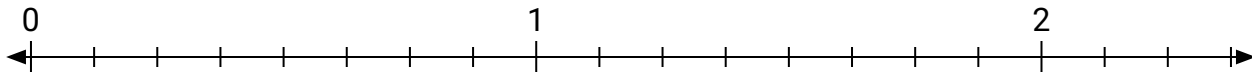
- 4) Marque l'emplacement de  $\frac{15}{9}$



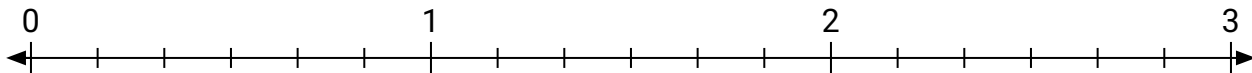
- 5) Marque l'emplacement de  $\frac{26}{9}$



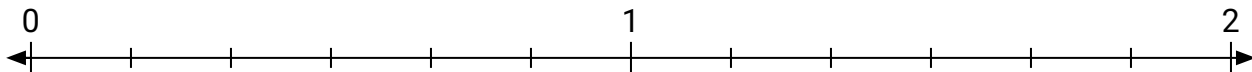
- 6) Marque l'emplacement de  $\frac{18}{8}$



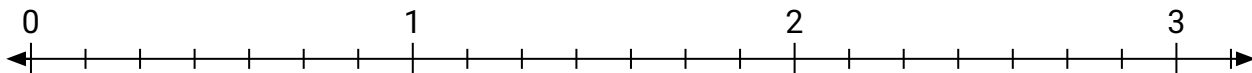
- 7) Marque l'emplacement de  $\frac{12}{6}$



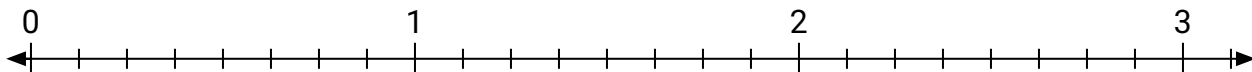
- 8) Marque l'emplacement de  $\frac{10}{6}$



- 9) Marque l'emplacement de  $\frac{13}{7}$



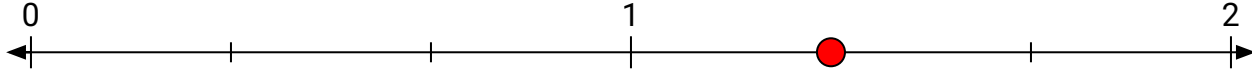
- 10) Marque l'emplacement de  $\frac{17}{8}$



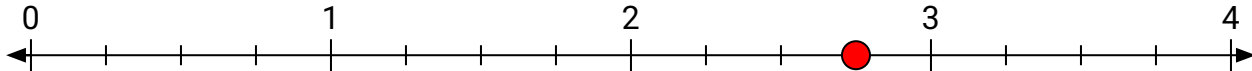


## Résoudre chaque problème.


- 1) Marque l'emplacement de
- $\frac{4}{3}$



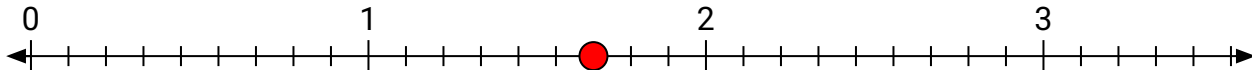
- 2) Marque l'emplacement de
- $\frac{11}{4}$



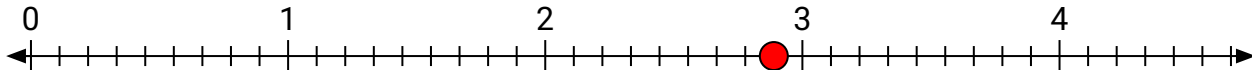
- 3) Marque l'emplacement de
- $\frac{7}{4}$



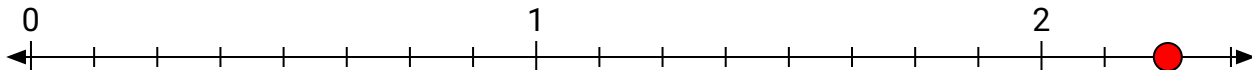
- 4) Marque l'emplacement de
- $\frac{15}{9}$



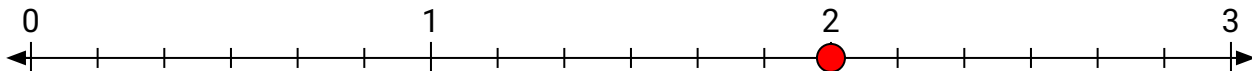
- 5) Marque l'emplacement de
- $\frac{26}{9}$



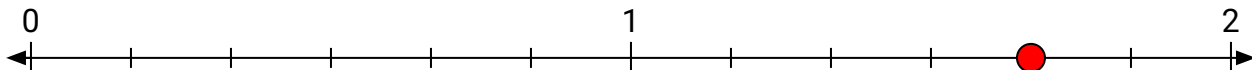
- 6) Marque l'emplacement de
- $\frac{18}{8}$



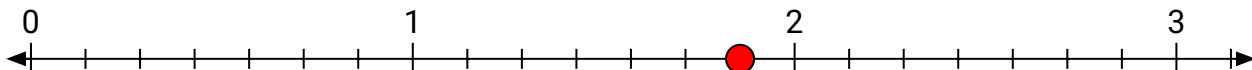
- 7) Marque l'emplacement de
- $\frac{12}{6}$



- 8) Marque l'emplacement de
- $\frac{10}{6}$



- 9) Marque l'emplacement de
- $\frac{13}{7}$



- 10) Marque l'emplacement de
- $\frac{17}{8}$

