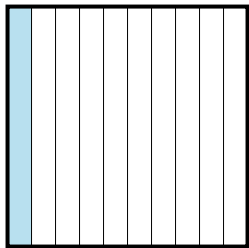




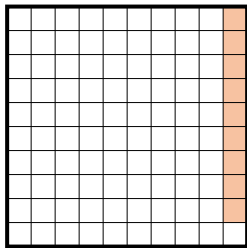
Exprimez la valeur en fraction , décimal & pourcentage.

Ex)




fraction $\frac{1}{10}$
décimal 0,1
pourcentage 10

1)



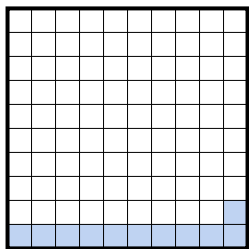
fraction _____
décimal _____
pourcentage _____

2)




fraction _____
décimal _____
pourcentage _____

3)




fraction _____
décimal _____
pourcentage _____

4)



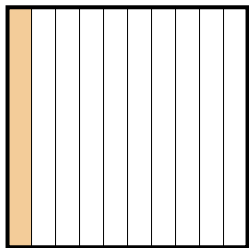
fraction _____
décimal _____
pourcentage _____

5)



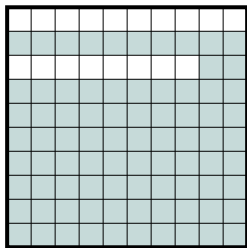
fraction _____
décimal _____
pourcentage _____

6)



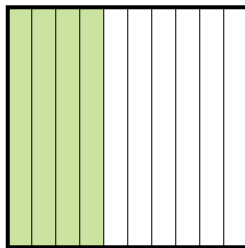
fraction _____
décimal _____
pourcentage _____

7)



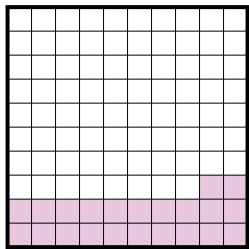
fraction _____
décimal _____
pourcentage _____

8)




fraction _____
décimal _____
pourcentage _____

9)



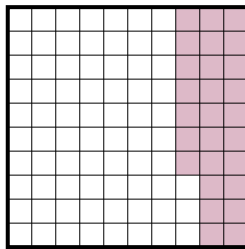
fraction _____
décimal _____
pourcentage _____

10)



fraction _____
décimal _____
pourcentage _____

11)



fraction _____
décimal _____
pourcentage _____

RéponsesEx. $\frac{1}{10}$ **0,1** **10%**

1. _____

2. _____

3. _____

4. _____

5. _____

6. _____

7. _____

8. _____

9. _____

10. _____

11. _____

