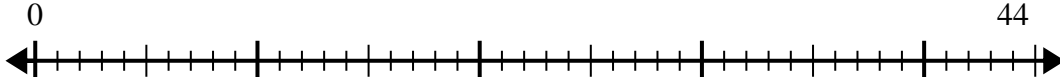




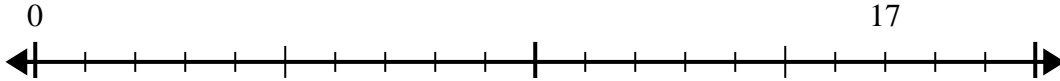
Utilisez la droite numérique pour résoudre le problème de division.

Réponses

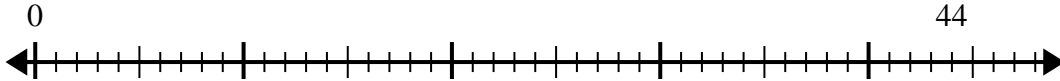
1) $44 \div 5 =$
0



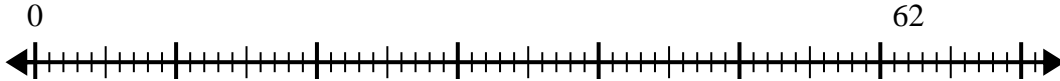
2) $17 \div 5 =$
0



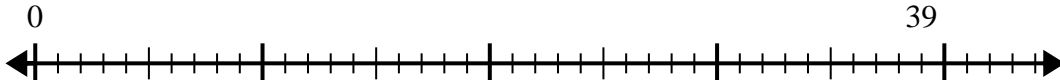
3) $44 \div 8 =$
0



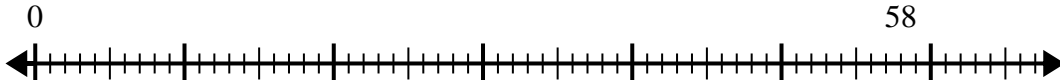
4) $62 \div 8 =$
0



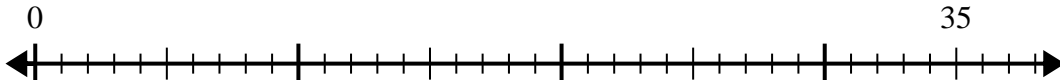
5) $39 \div 7 =$
0



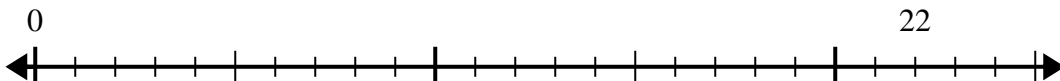
6) $58 \div 7 =$
0



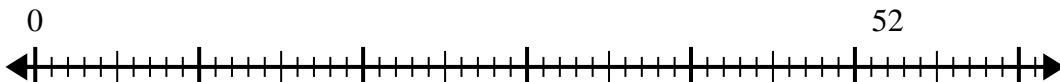
7) $35 \div 6 =$
0



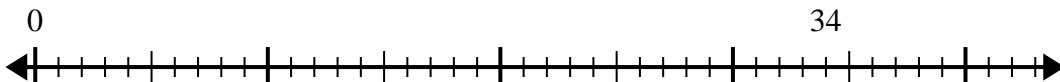
8) $22 \div 4 =$
0



9) $52 \div 8 =$
0



10) $34 \div 5 =$
0

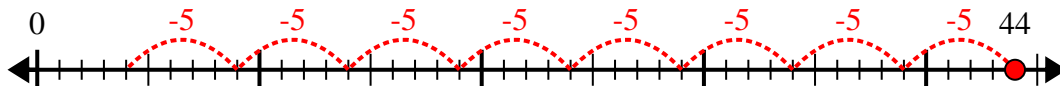


- 1. _____
- 2. _____
- 3. _____
- 4. _____
- 5. _____
- 6. _____
- 7. _____
- 8. _____
- 9. _____
- 10. _____

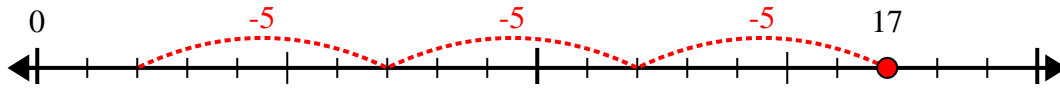


Utilisez la droite numérique pour résoudre le problème de division.

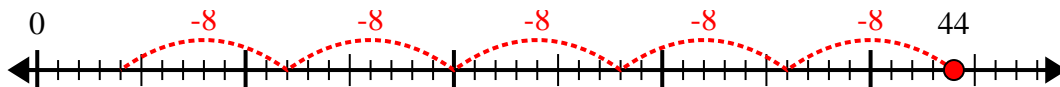
1) $44 \div 5 =$



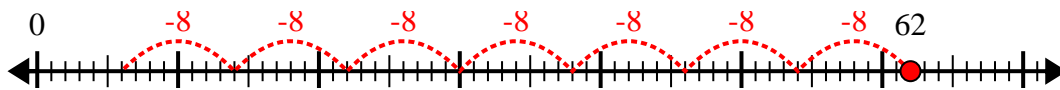
2) $17 \div 5 =$



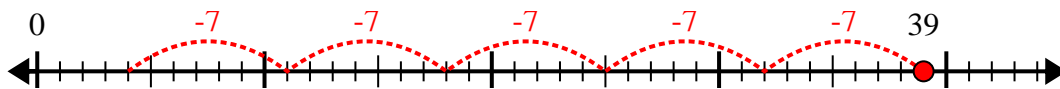
3) $44 \div 8 =$



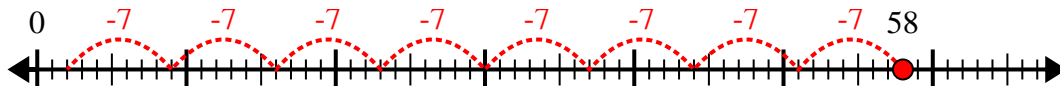
4) $62 \div 8 =$



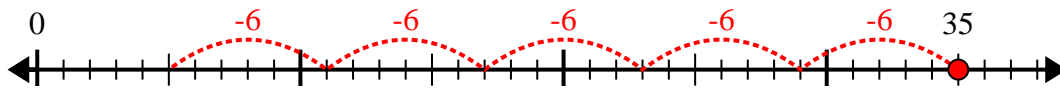
5) $39 \div 7 =$



6) $58 \div 7 =$



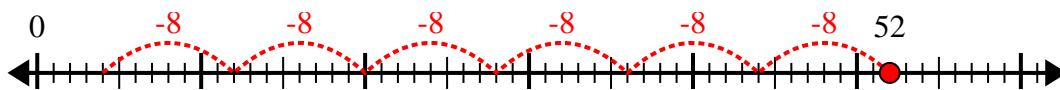
7) $35 \div 6 =$



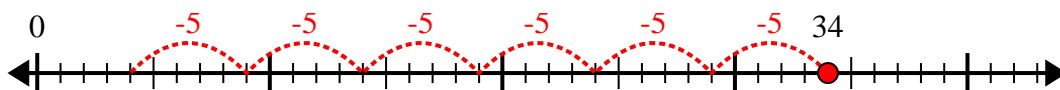
8) $22 \div 4 =$



9) $52 \div 8 =$



10) $34 \div 5 =$



Réponses

1. 8r4

2. 3r2

3. 5r4

4. 7r6

5. 5r4

6. 8r2

7. 5r5

8. 5r2

9. 6r4

10. 6r4