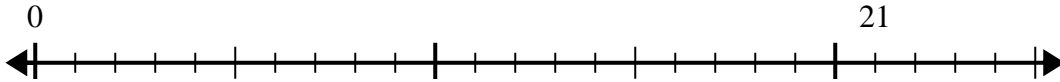




Utilisez la droite numérique pour résoudre le problème de division.

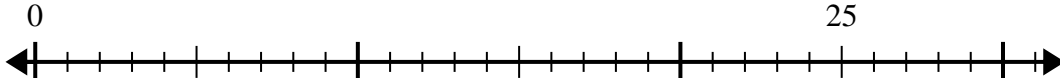
Réponses

1) $21 \div 5 =$
0



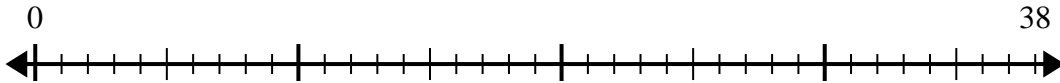
1. _____

2) $25 \div 6 =$
0



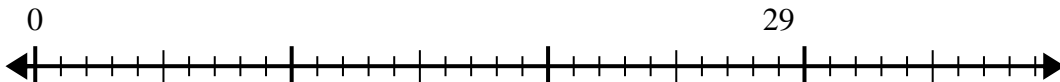
2. _____

3) $38 \div 8 =$
0



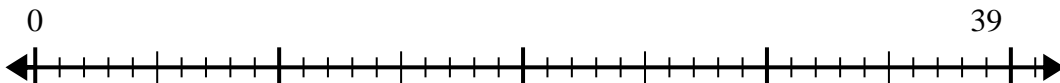
3. _____

4) $29 \div 7 =$
0



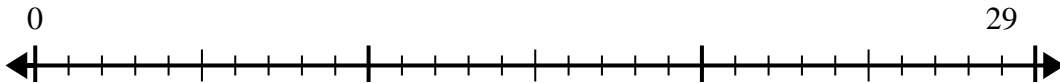
4. _____

5) $39 \div 5 =$
0



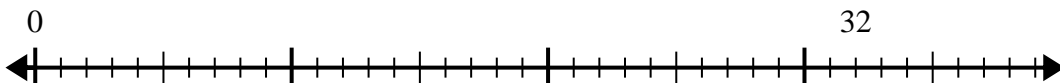
5. _____

6) $29 \div 4 =$
0



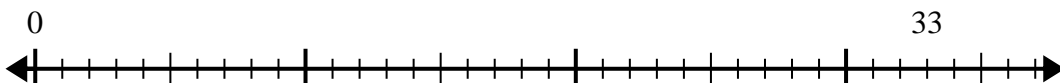
6. _____

7) $32 \div 6 =$
0



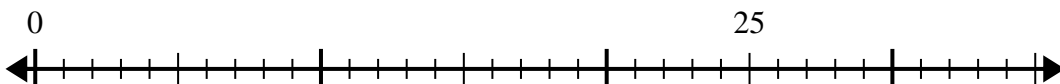
7. _____

8) $33 \div 4 =$
0



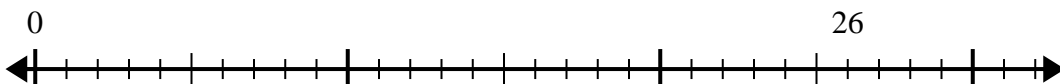
8. _____

9) $25 \div 4 =$
0



9. _____

10) $26 \div 7 =$
0

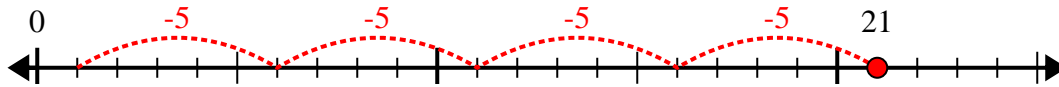


10. _____

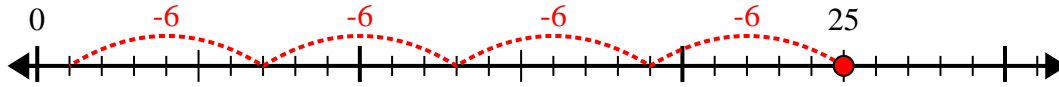


Utilisez la droite numérique pour résoudre le problème de division.

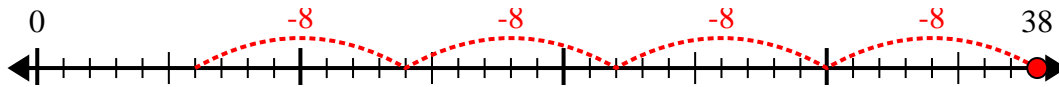
1) $21 \div 5 =$



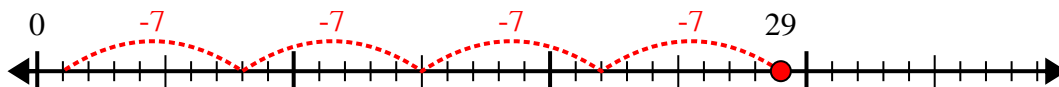
2) $25 \div 6 =$



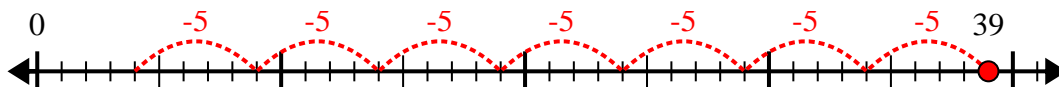
3) $38 \div 8 =$



4) $29 \div 7 =$



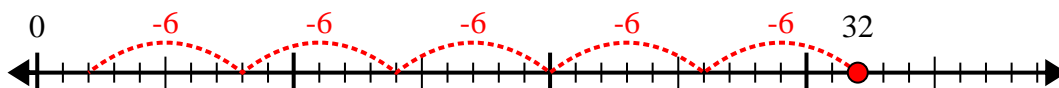
5) $39 \div 5 =$



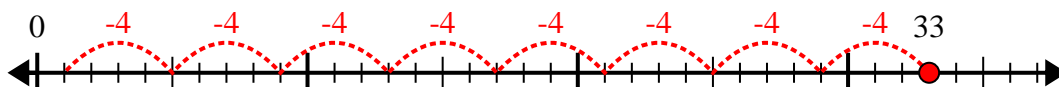
6) $29 \div 4 =$



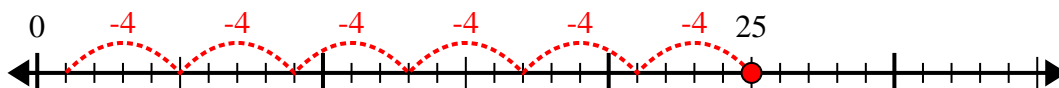
7) $32 \div 6 =$



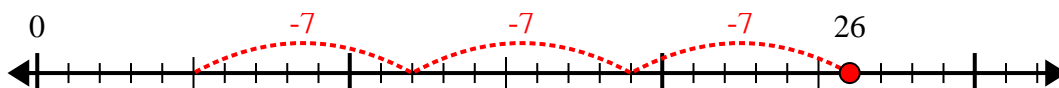
8) $33 \div 4 =$



9) $25 \div 4 =$



10) $26 \div 7 =$



Réponses

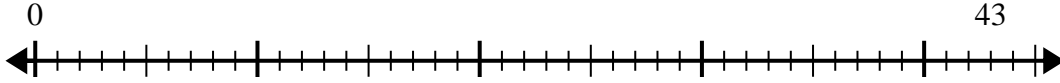
1. 4r1
2. 4r1
3. 4r6
4. 4r1
5. 7r4
6. 7r1
7. 5r2
8. 8r1
9. 6r1
10. 3r5



Utilisez la droite numérique pour résoudre le problème de division.

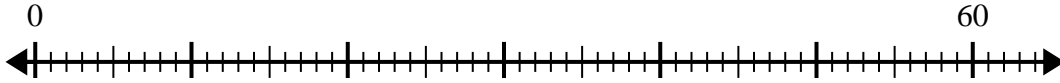
Réponses

1) $43 \div 5 =$
0



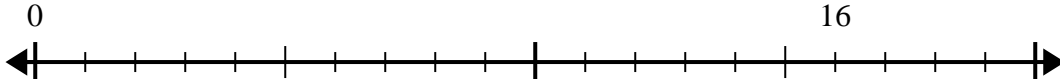
1. _____

2) $60 \div 7 =$
0



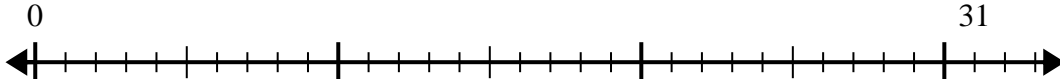
2. _____

3) $16 \div 5 =$
0



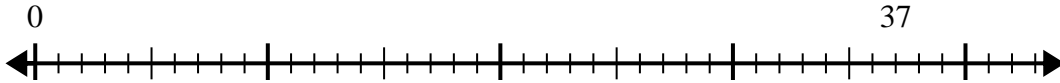
3. _____

4) $31 \div 4 =$
0



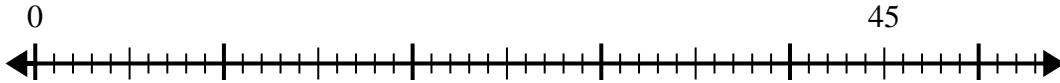
4. _____

5) $37 \div 7 =$
0



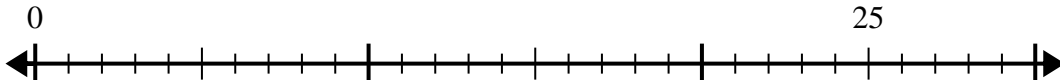
5. _____

6) $45 \div 8 =$
0



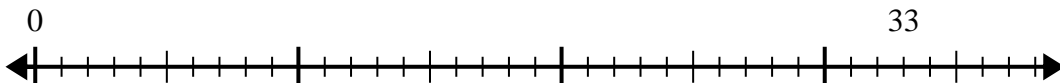
6. _____

7) $25 \div 4 =$
0



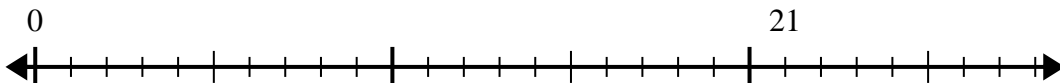
7. _____

8) $33 \div 5 =$
0



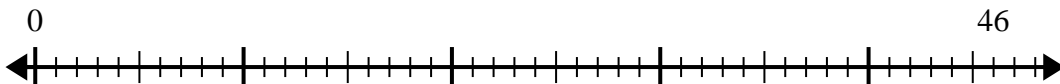
8. _____

9) $21 \div 4 =$
0



9. _____

10) $46 \div 6 =$
0

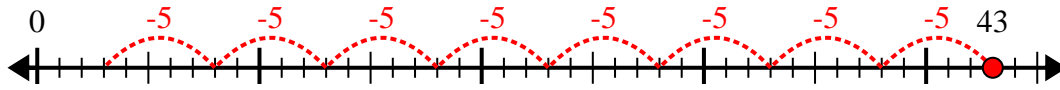


10. _____

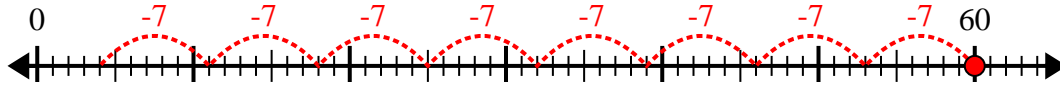


Utilisez la droite numérique pour résoudre le problème de division.

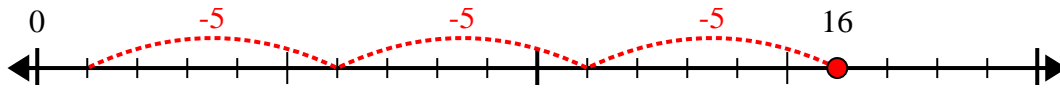
1) $43 \div 5 =$



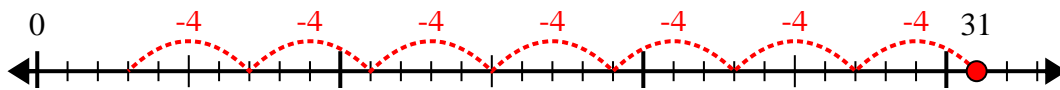
2) $60 \div 7 =$



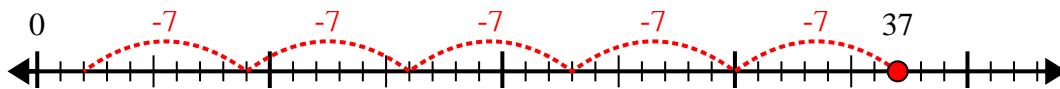
3) $16 \div 5 =$



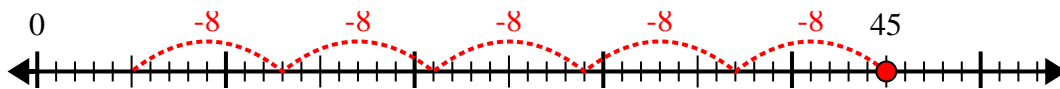
4) $31 \div 4 =$



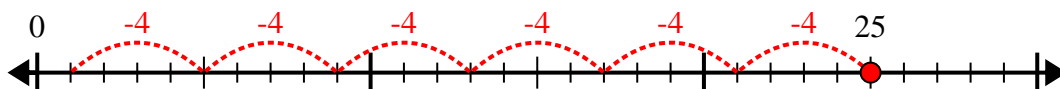
5) $37 \div 7 =$



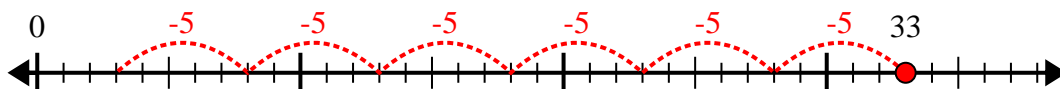
6) $45 \div 8 =$



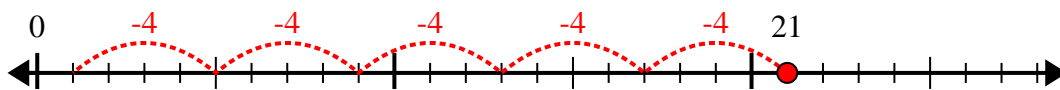
7) $25 \div 4 =$



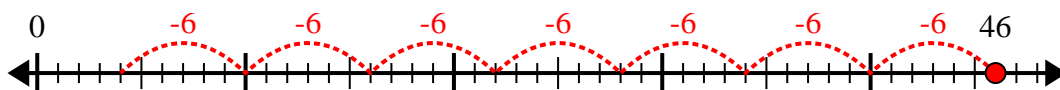
8) $33 \div 5 =$



9) $21 \div 4 =$



10) $46 \div 6 =$



Réponses

1. 8r3

2. 8r4

3. 3r1

4. 7r3

5. 5r2

6. 5r5

7. 6r1

8. 6r3

9. 5r1

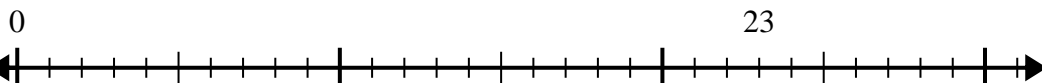
10. 7r4



Utilisez la droite numérique pour résoudre le problème de division.

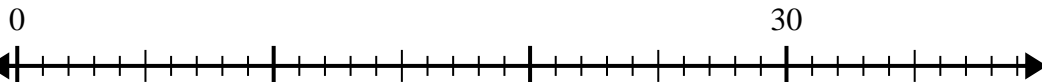
Réponses

1) $23 \div 5 =$



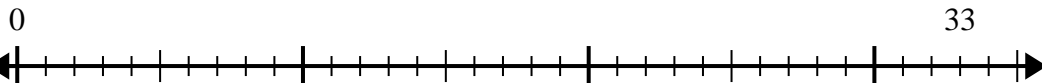
1. _____

2) $30 \div 4 =$



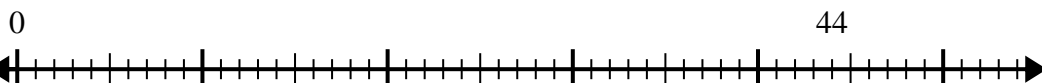
2. _____

3) $33 \div 6 =$



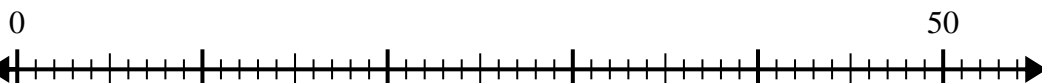
3. _____

4) $44 \div 6 =$



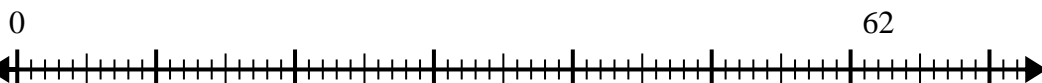
4. _____

5) $50 \div 6 =$



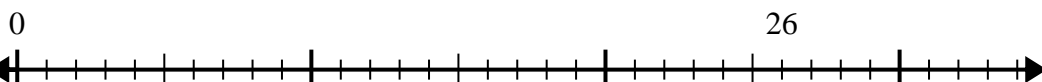
5. _____

6) $62 \div 8 =$



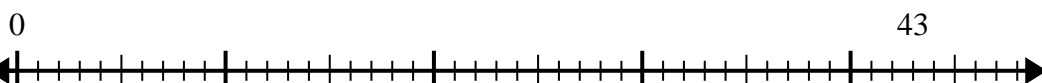
6. _____

7) $26 \div 6 =$



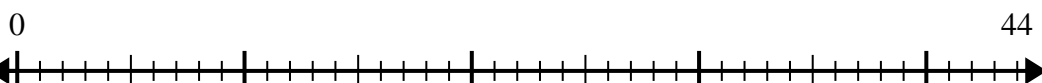
7. _____

8) $43 \div 8 =$



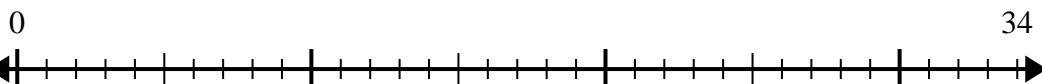
8. _____

9) $44 \div 7 =$



9. _____

10) $34 \div 4 =$



10. _____



Utilisez la droite numérique pour résoudre le problème de division.

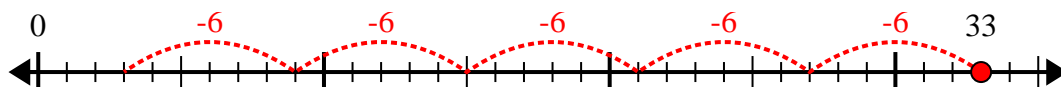
1) $23 \div 5 =$



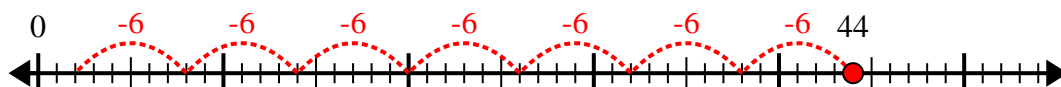
2) $30 \div 4 =$



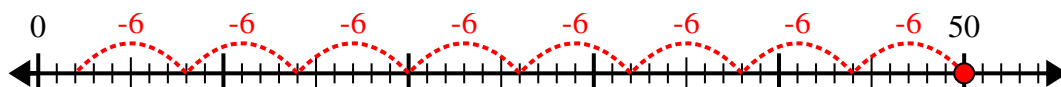
3) $33 \div 6 =$



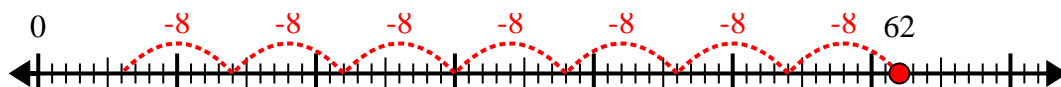
4) $44 \div 6 =$



5) $50 \div 6 =$



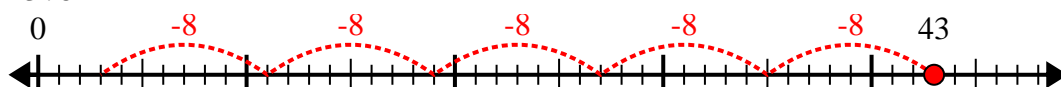
6) $62 \div 8 =$



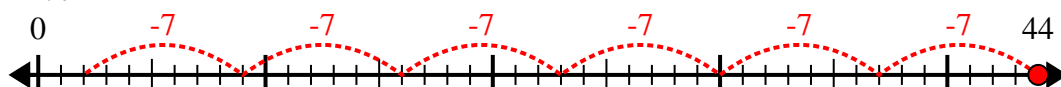
7) $26 \div 6 =$



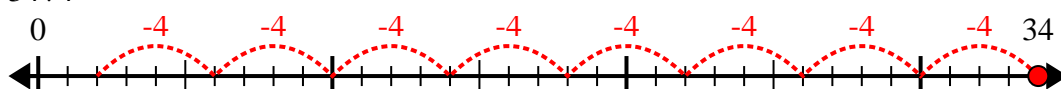
8) $43 \div 8 =$



9) $44 \div 7 =$



10) $34 \div 4 =$



Réponses

1. 4r3

2. 7r2

3. 5r3

4. 7r2

5. 8r2

6. 7r6

7. 4r2

8. 5r3

9. 6r2

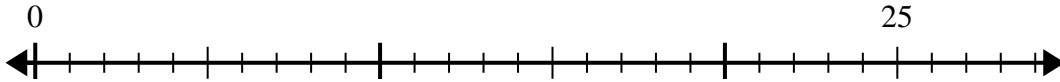
10. 8r2



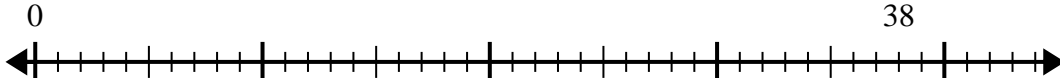
Utilisez la droite numérique pour résoudre le problème de division.

Réponses

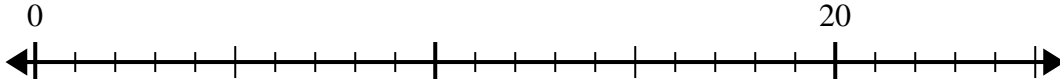
1) $25 \div 6 =$
0



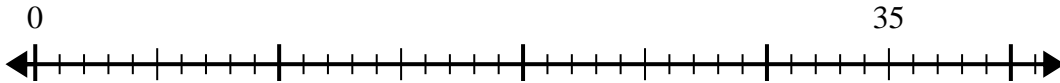
2) $38 \div 7 =$
0



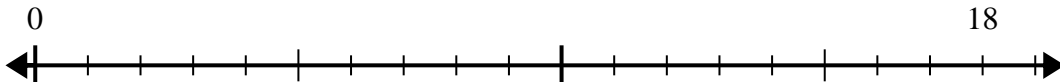
3) $20 \div 6 =$
0



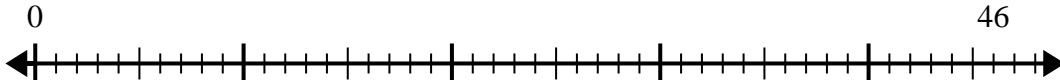
4) $35 \div 6 =$
0



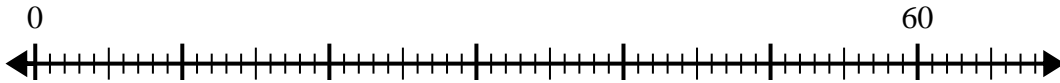
5) $18 \div 5 =$
0



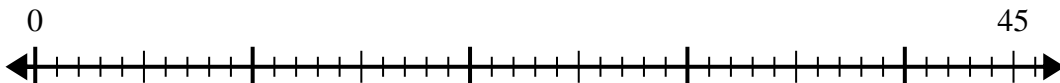
6) $46 \div 6 =$
0



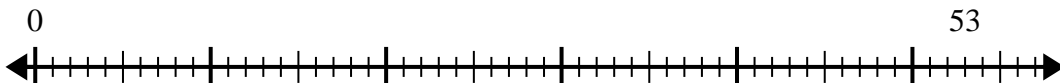
7) $60 \div 8 =$
0



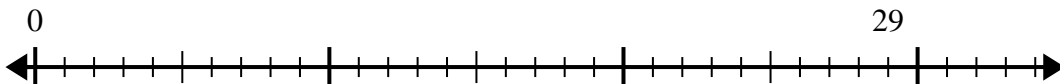
8) $45 \div 7 =$
0



9) $53 \div 8 =$
0



10) $29 \div 4 =$
0

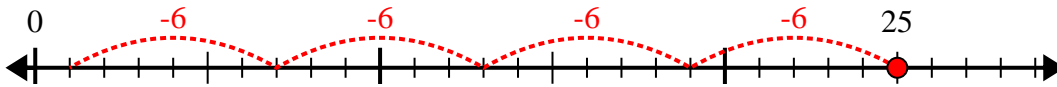


- 1. _____
- 2. _____
- 3. _____
- 4. _____
- 5. _____
- 6. _____
- 7. _____
- 8. _____
- 9. _____
- 10. _____

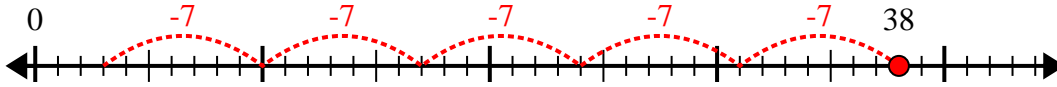


Utilisez la droite numérique pour résoudre le problème de division.

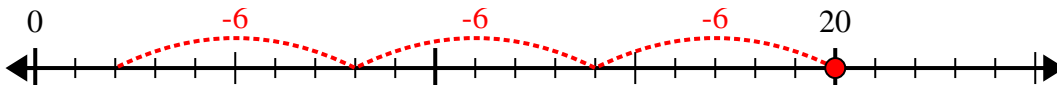
1) $25 \div 6 =$



2) $38 \div 7 =$



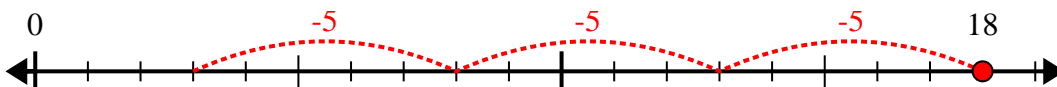
3) $20 \div 6 =$



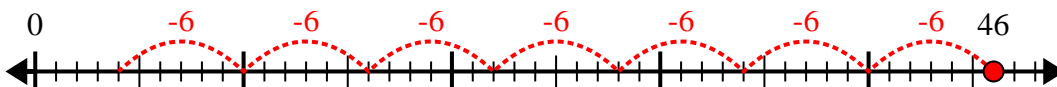
4) $35 \div 6 =$



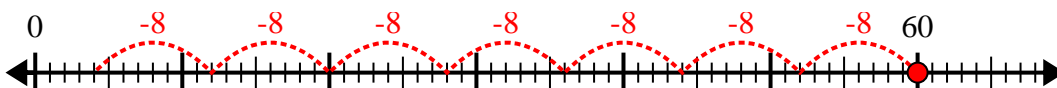
5) $18 \div 5 =$



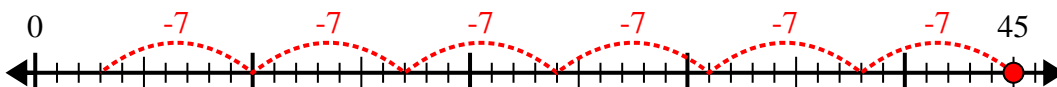
6) $46 \div 6 =$



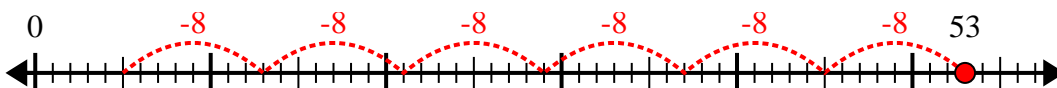
7) $60 \div 8 =$



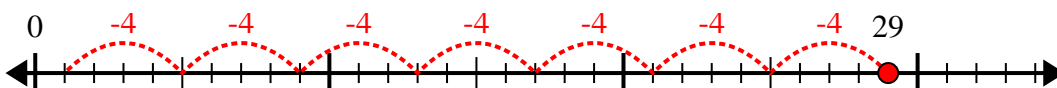
8) $45 \div 7 =$



9) $53 \div 8 =$



10) $29 \div 4 =$



Réponses

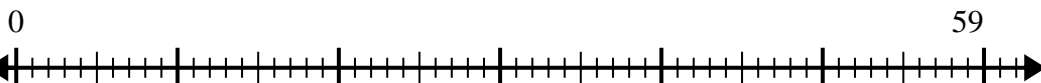
1. 4r1
2. 5r3
3. 3r2
4. 5r5
5. 3r3
6. 7r4
7. 7r4
8. 6r3
9. 6r5
10. 7r1



Utilisez la droite numérique pour résoudre le problème de division.

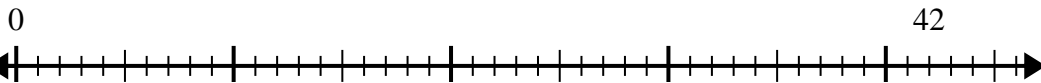
Réponses

1) $59 \div 7 =$



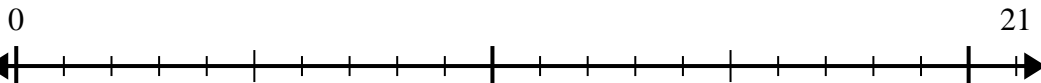
1. _____

2) $42 \div 5 =$



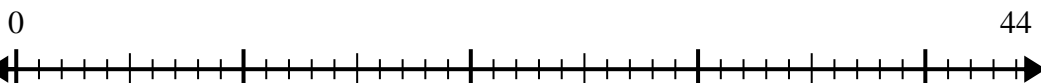
2. _____

3) $21 \div 4 =$



3. _____

4) $44 \div 7 =$



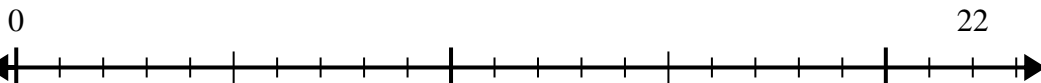
4. _____

5) $60 \div 8 =$



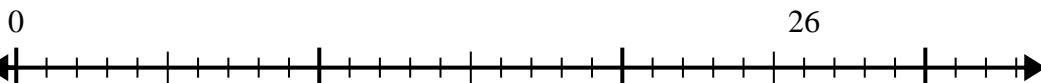
5. _____

6) $22 \div 5 =$



6. _____

7) $26 \div 4 =$



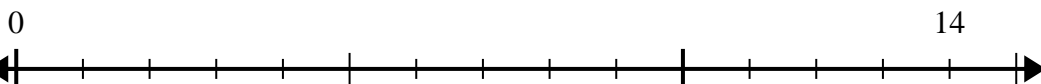
7. _____

8) $54 \div 8 =$



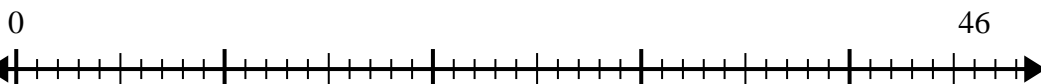
8. _____

9) $14 \div 4 =$



9. _____

10) $46 \div 6 =$

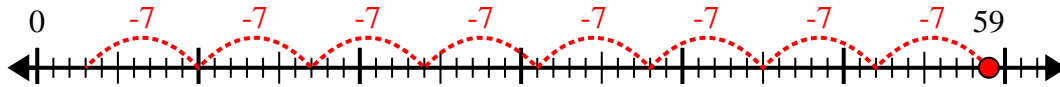


10. _____

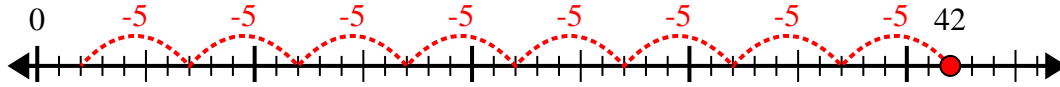


Utilisez la droite numérique pour résoudre le problème de division.

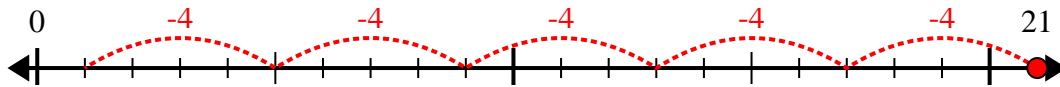
1) $59 \div 7 =$



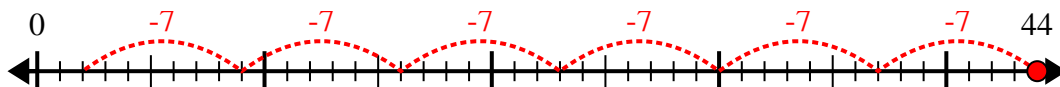
2) $42 \div 5 =$



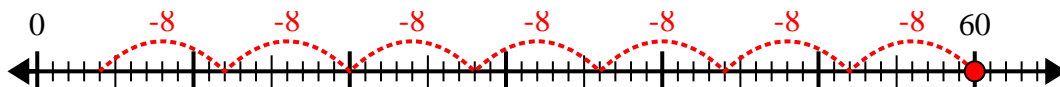
3) $21 \div 4 =$



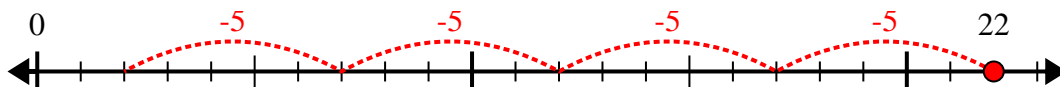
4) $44 \div 7 =$



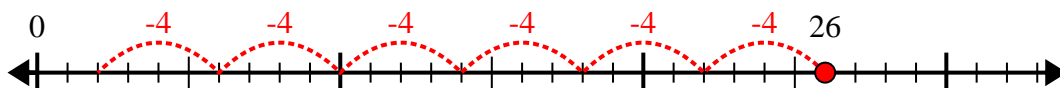
5) $60 \div 8 =$



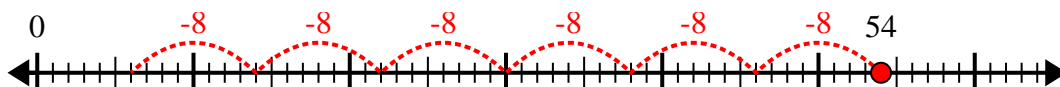
6) $22 \div 5 =$



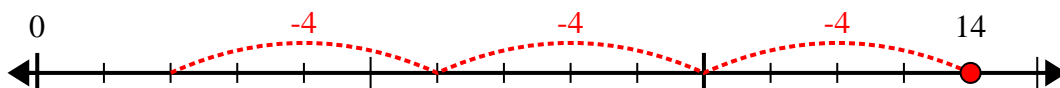
7) $26 \div 4 =$



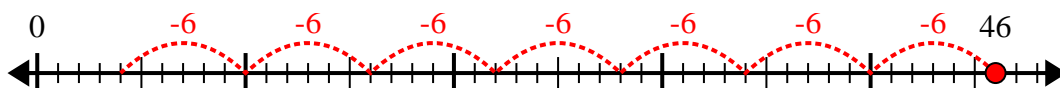
8) $54 \div 8 =$



9) $14 \div 4 =$



10) $46 \div 6 =$



Réponses

1. 8r3

2. 8r2

3. 5r1

4. 6r2

5. 7r4

6. 4r2

7. 6r2

8. 6r6

9. 3r2

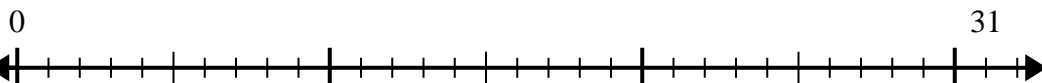
10. 7r4



Utilisez la droite numérique pour résoudre le problème de division.

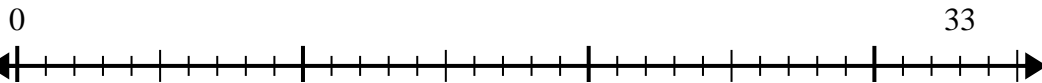
Réponses

1) $31 \div 6 =$



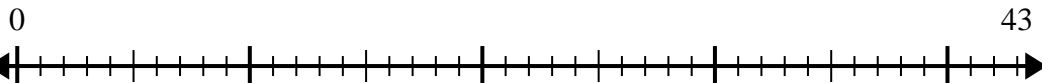
1. _____

2) $33 \div 4 =$



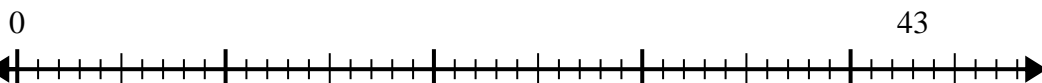
2. _____

3) $43 \div 7 =$



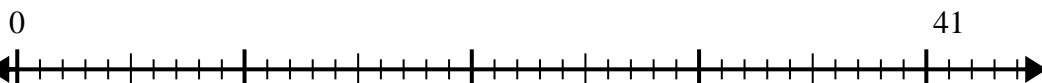
3. _____

4) $43 \div 5 =$



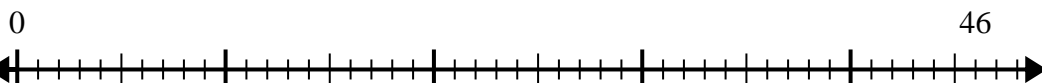
4. _____

5) $41 \div 8 =$



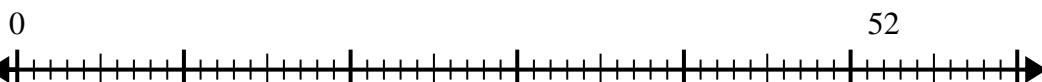
5. _____

6) $46 \div 6 =$



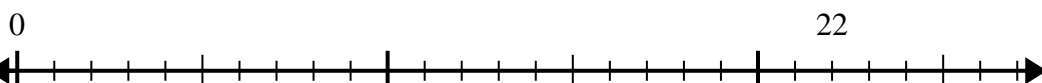
6. _____

7) $52 \div 6 =$



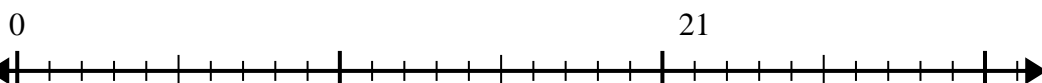
7. _____

8) $22 \div 4 =$



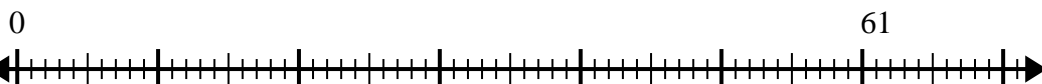
8. _____

9) $21 \div 5 =$



9. _____

10) $61 \div 8 =$

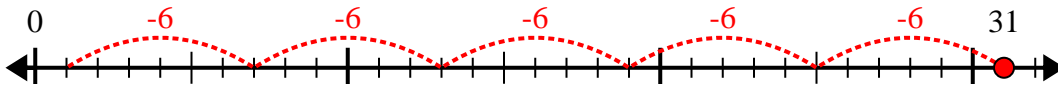


10. _____

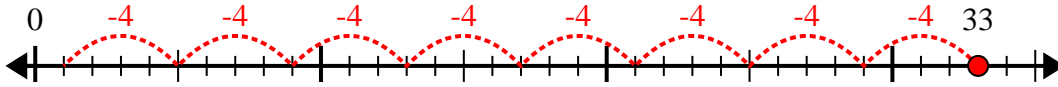


Utilisez la droite numérique pour résoudre le problème de division.

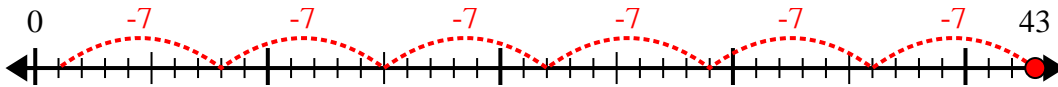
1) $31 \div 6 =$



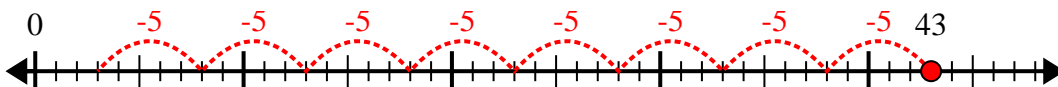
2) $33 \div 4 =$



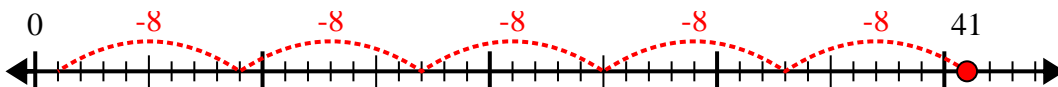
3) $43 \div 7 =$



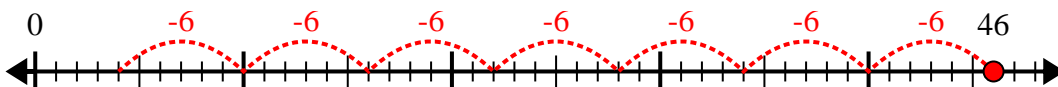
4) $43 \div 5 =$



5) $41 \div 8 =$



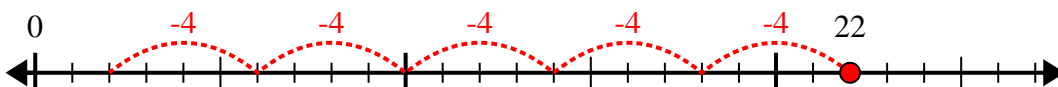
6) $46 \div 6 =$



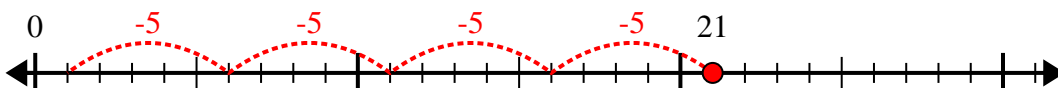
7) $52 \div 6 =$



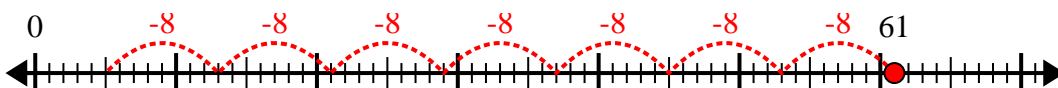
8) $22 \div 4 =$



9) $21 \div 5 =$



10) $61 \div 8 =$



Réponses

1. 5r1

2. 8r1

3. 6r1

4. 8r3

5. 5r1

6. 7r4

7. 8r4

8. 5r2

9. 4r1

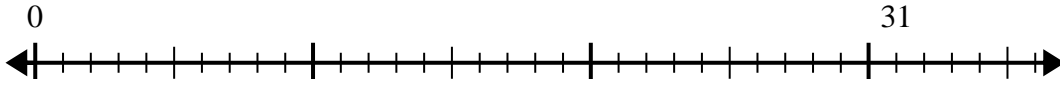
10. 7r5



Utilisez la droite numérique pour résoudre le problème de division.

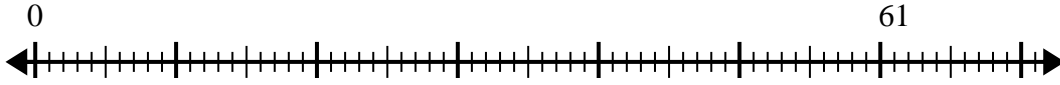
Réponses

1) $31 \div 8 =$
0



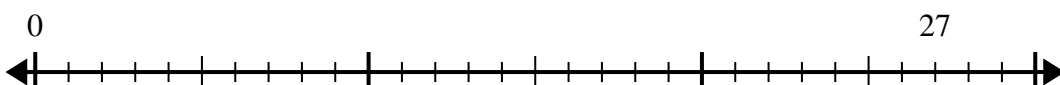
1. _____

2) $61 \div 8 =$
0



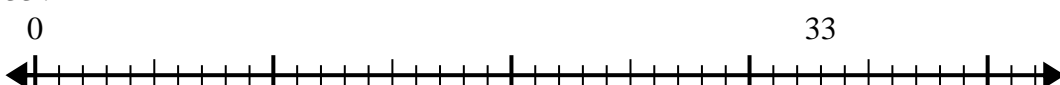
2. _____

3) $27 \div 4 =$
0



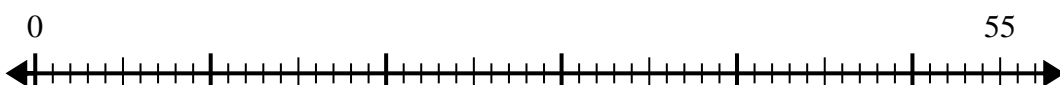
3. _____

4) $33 \div 4 =$
0



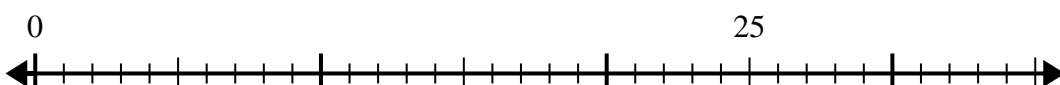
4. _____

5) $55 \div 8 =$
0



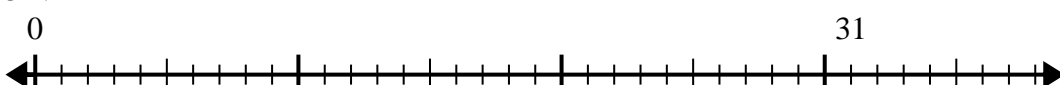
5. _____

6) $25 \div 6 =$
0



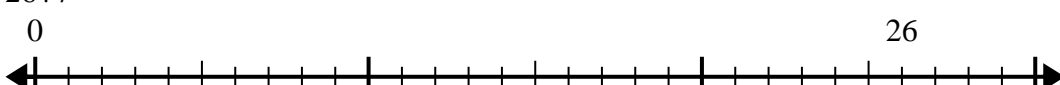
6. _____

7) $31 \div 4 =$
0



7. _____

8) $26 \div 7 =$
0



8. _____

9) $33 \div 7 =$
0



9. _____

10) $41 \div 5 =$
0

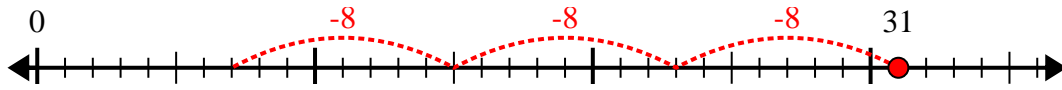


10. _____

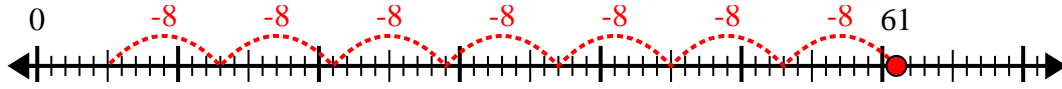


Utilisez la droite numérique pour résoudre le problème de division.

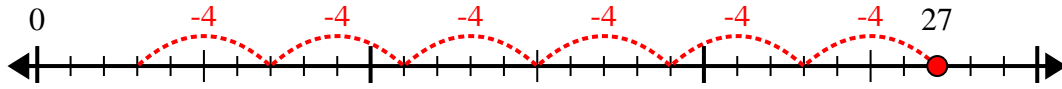
1) $31 \div 8 =$



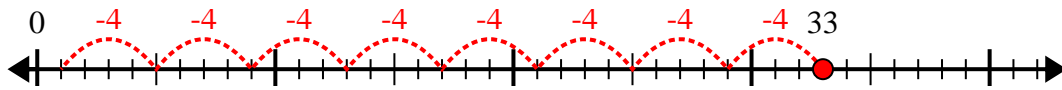
2) $61 \div 8 =$



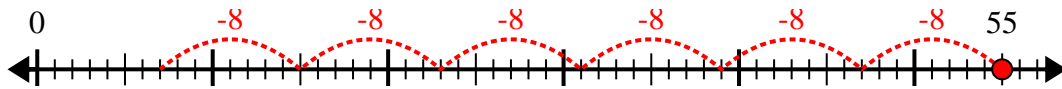
3) $27 \div 4 =$



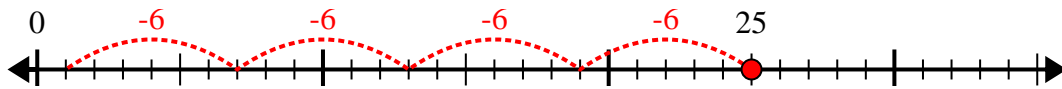
4) $33 \div 4 =$



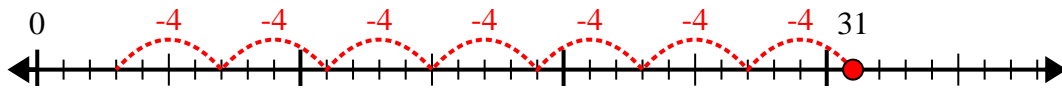
5) $55 \div 8 =$



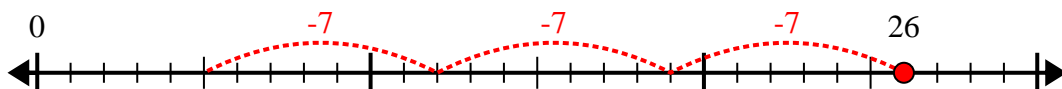
6) $25 \div 6 =$



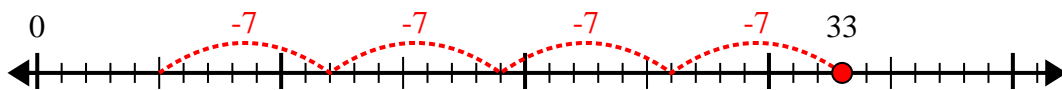
7) $31 \div 4 =$



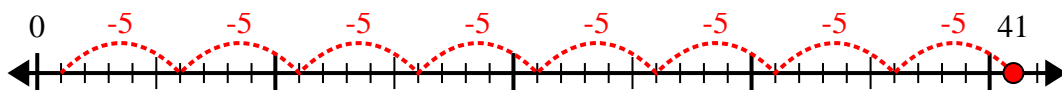
8) $26 \div 7 =$



9) $33 \div 7 =$



10) $41 \div 5 =$



Réponses

1. 3r7

2. 7r5

3. 6r3

4. 8r1

5. 6r7

6. 4r1

7. 7r3

8. 3r5

9. 4r5

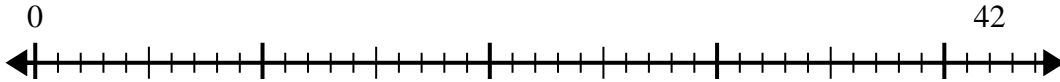
10. 8r1



Utilisez la droite numérique pour résoudre le problème de division.

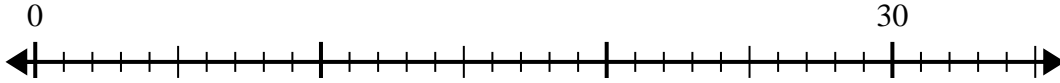
Réponses

1) $42 \div 5 =$



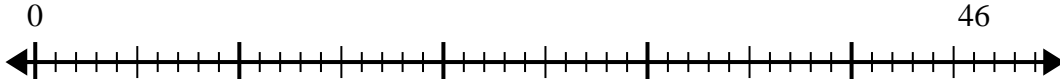
1. _____

2) $30 \div 4 =$



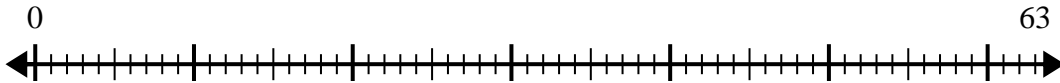
2. _____

3) $46 \div 6 =$



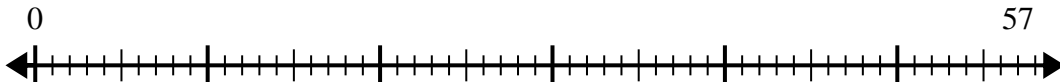
3. _____

4) $63 \div 8 =$



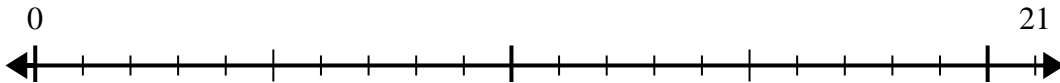
4. _____

5) $57 \div 7 =$



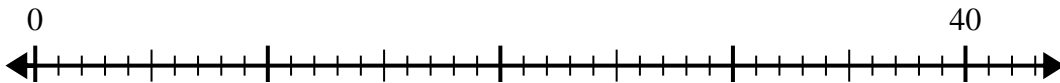
5. _____

6) $21 \div 5 =$



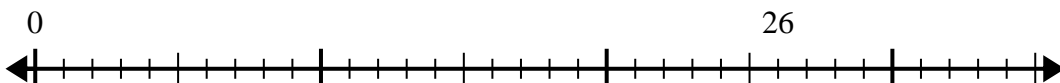
6. _____

7) $40 \div 7 =$



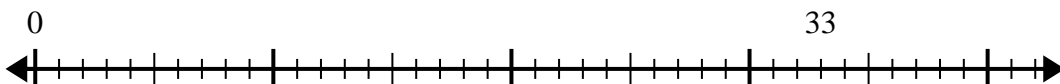
7. _____

8) $26 \div 8 =$



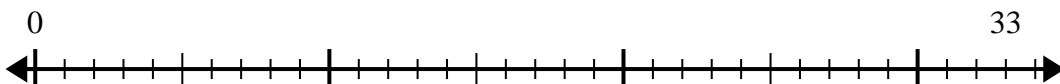
8. _____

9) $33 \div 5 =$



9. _____

10) $33 \div 4 =$

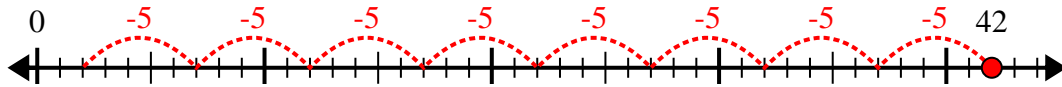


10. _____

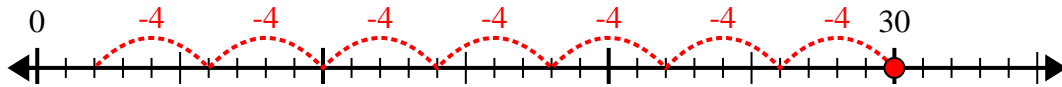


Utilisez la droite numérique pour résoudre le problème de division.

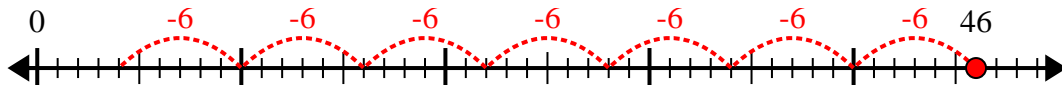
1) $42 \div 5 =$



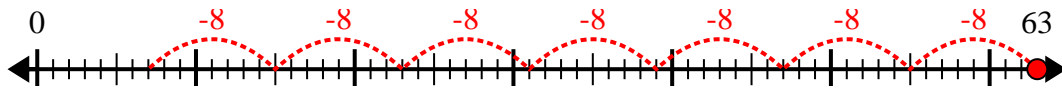
2) $30 \div 4 =$



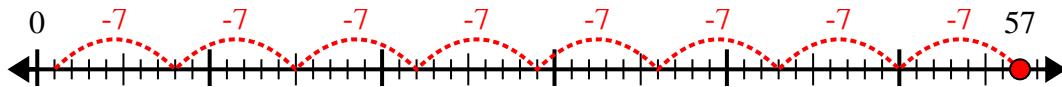
3) $46 \div 6 =$



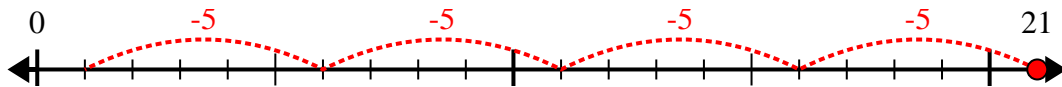
4) $63 \div 8 =$



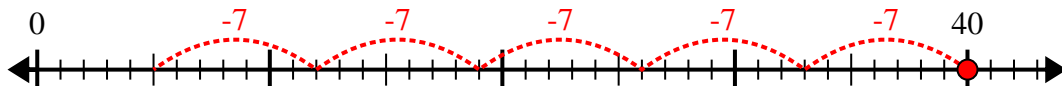
5) $57 \div 7 =$



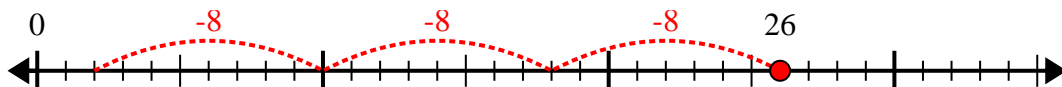
6) $21 \div 5 =$



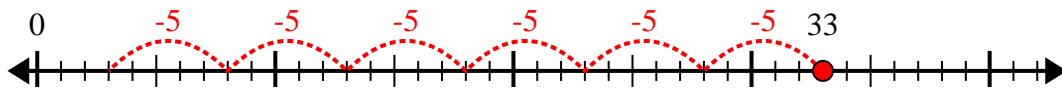
7) $40 \div 7 =$



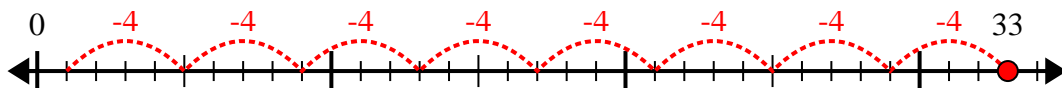
8) $26 \div 8 =$



9) $33 \div 5 =$



10) $33 \div 4 =$



Réponses

1. 8r2

2. 7r2

3. 7r4

4. 7r7

5. 8r1

6. 4r1

7. 5r5

8. 3r2

9. 6r3

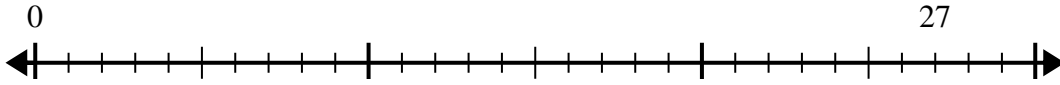
10. 8r1



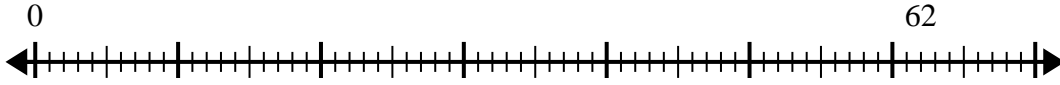
Utilisez la droite numérique pour résoudre le problème de division.

Réponses

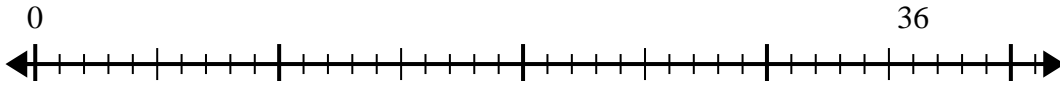
1) $27 \div 4 =$
0



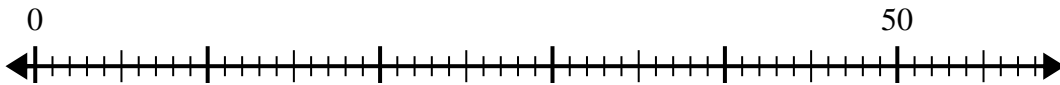
2) $62 \div 8 =$
0



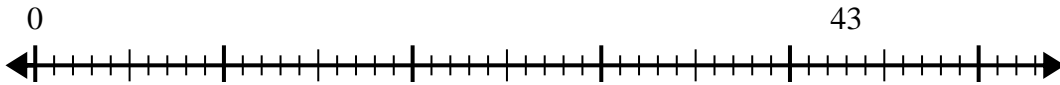
3) $36 \div 5 =$
0



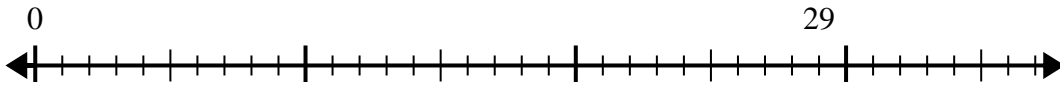
4) $50 \div 8 =$
0



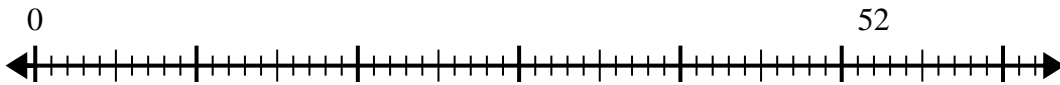
5) $43 \div 6 =$
0



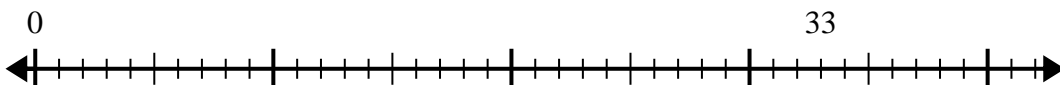
6) $29 \div 6 =$
0



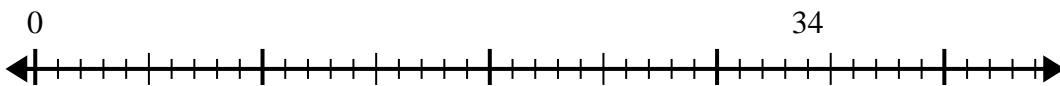
7) $52 \div 6 =$
0



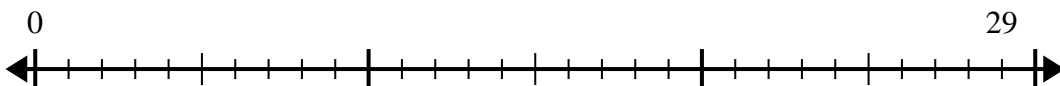
8) $33 \div 5 =$
0



9) $34 \div 7 =$
0



10) $29 \div 4 =$
0

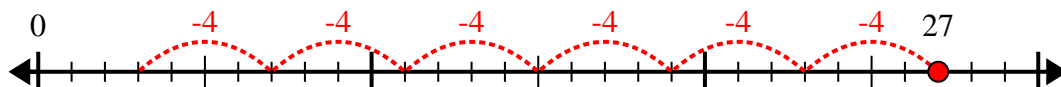


1. _____
2. _____
3. _____
4. _____
5. _____
6. _____
7. _____
8. _____
9. _____
10. _____

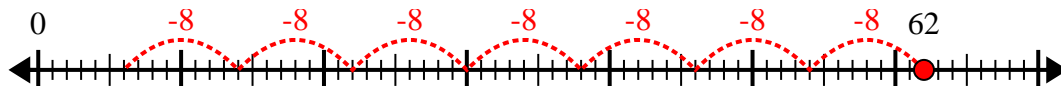


Utilisez la droite numérique pour résoudre le problème de division.

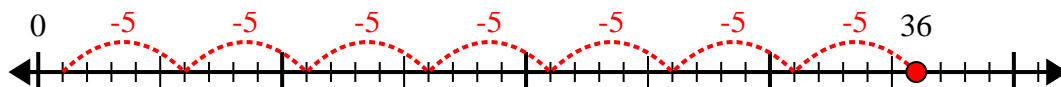
1) $27 \div 4 =$



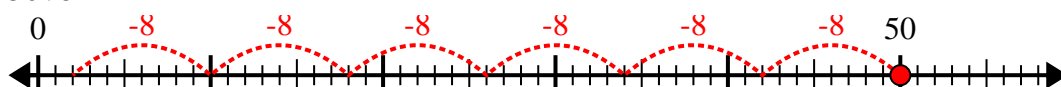
2) $62 \div 8 =$



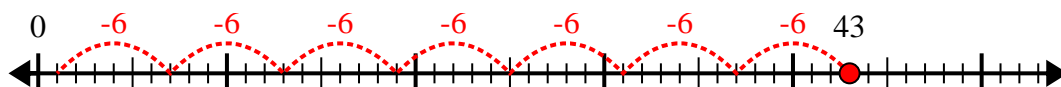
3) $36 \div 5 =$



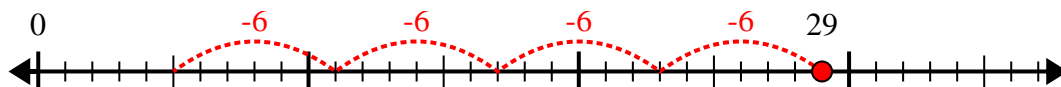
4) $50 \div 8 =$



5) $43 \div 6 =$



6) $29 \div 6 =$



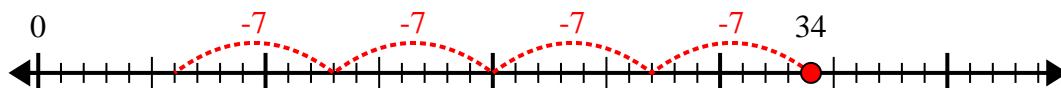
7) $52 \div 6 =$



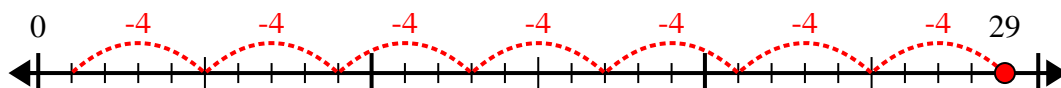
8) $33 \div 5 =$



9) $34 \div 7 =$



10) $29 \div 4 =$



Réponses

1. 6r3

2. 7r6

3. 7r1

4. 6r2

5. 7r1

6. 4r5

7. 8r4

8. 6r3

9. 4r6

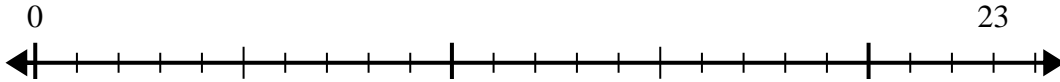
10. 7r1



Utilisez la droite numérique pour résoudre le problème de division.

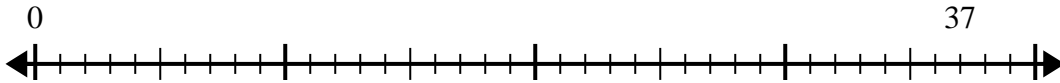
Réponses

1) $23 \div 4 =$
0



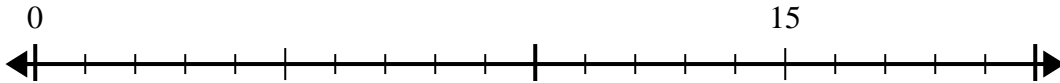
1. _____

2) $37 \div 8 =$
0



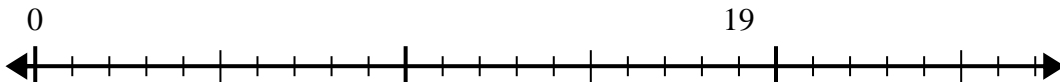
2. _____

3) $15 \div 4 =$
0



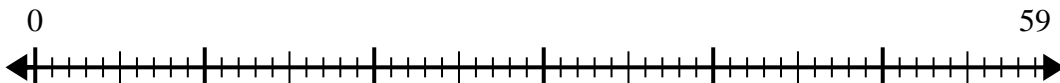
3. _____

4) $19 \div 6 =$
0



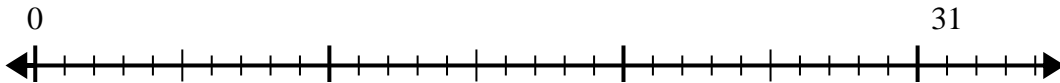
4. _____

5) $59 \div 8 =$
0



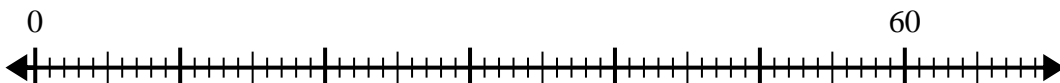
5. _____

6) $31 \div 8 =$
0



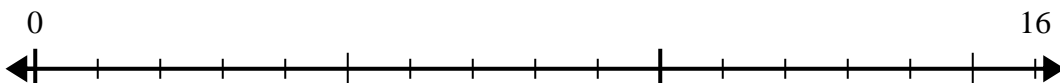
6. _____

7) $60 \div 7 =$
0



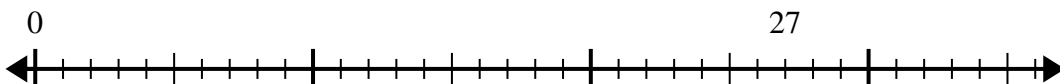
7. _____

8) $16 \div 5 =$
0



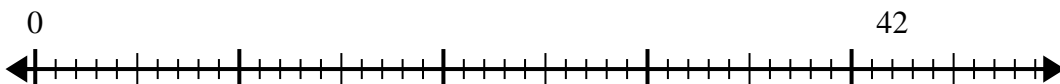
8. _____

9) $27 \div 4 =$
0



9. _____

10) $42 \div 5 =$
0

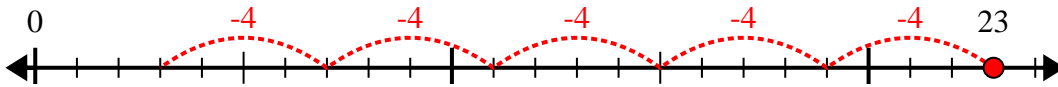


10. _____

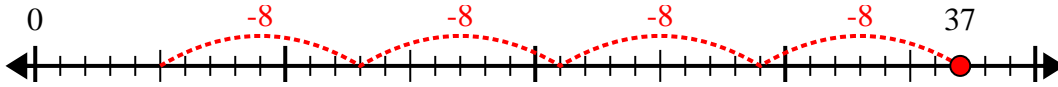


Utilisez la droite numérique pour résoudre le problème de division.

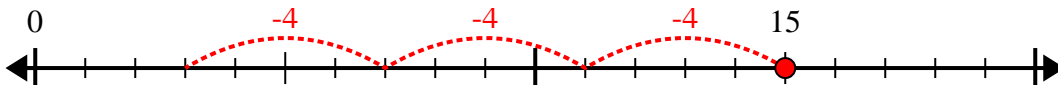
1) $23 \div 4 =$



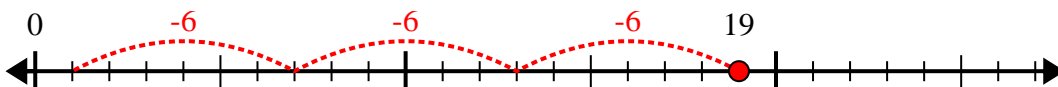
2) $37 \div 8 =$



3) $15 \div 4 =$



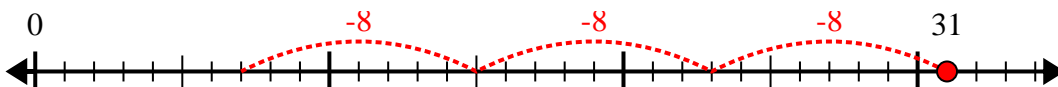
4) $19 \div 6 =$



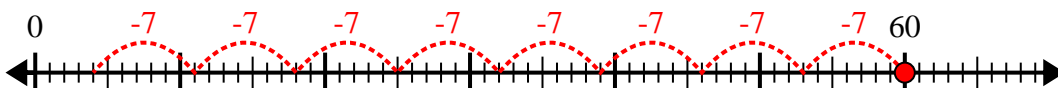
5) $59 \div 8 =$



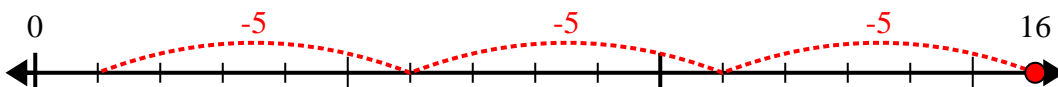
6) $31 \div 8 =$



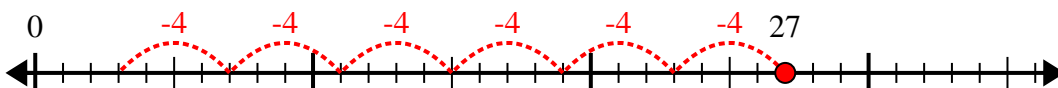
7) $60 \div 7 =$



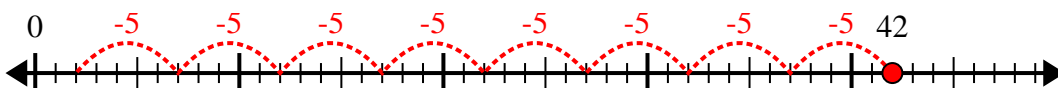
8) $16 \div 5 =$



9) $27 \div 4 =$



10) $42 \div 5 =$



Réponses

1. 5r3

2. 4r5

3. 3r3

4. 3r1

5. 7r3

6. 3r7

7. 8r4

8. 3r1

9. 6r3

10. 8r2