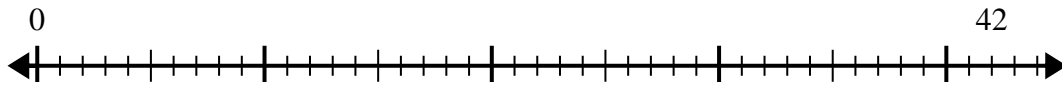




Utilisez la droite numérique pour résoudre le problème de division.

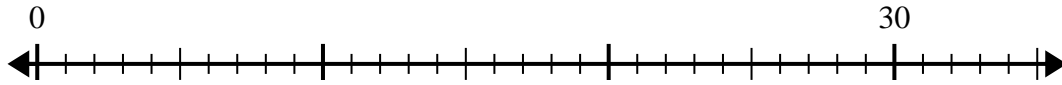
Réponses

1) $42 \div 5 =$



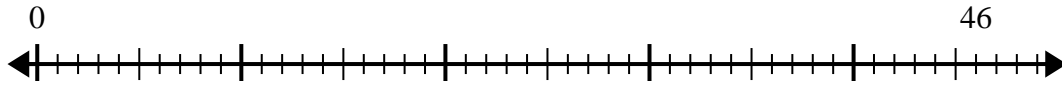
1. _____

2) $30 \div 4 =$



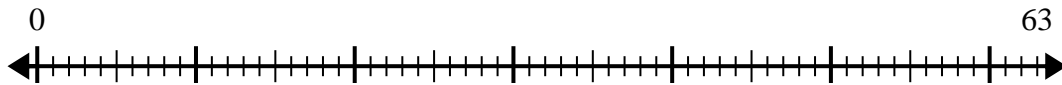
2. _____

3) $46 \div 6 =$



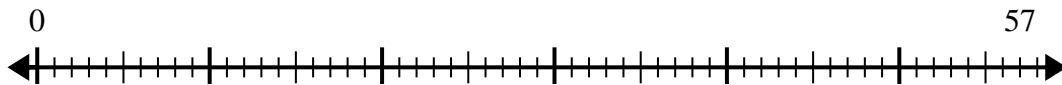
3. _____

4) $63 \div 8 =$



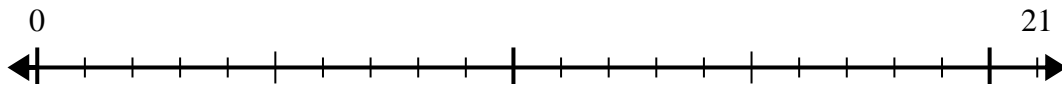
4. _____

5) $57 \div 7 =$



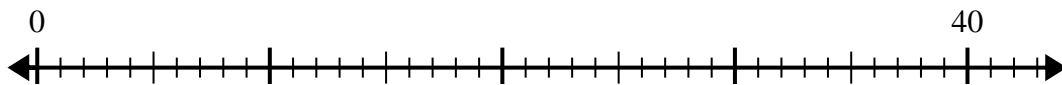
5. _____

6) $21 \div 5 =$



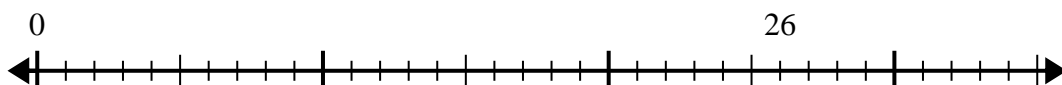
6. _____

7) $40 \div 7 =$



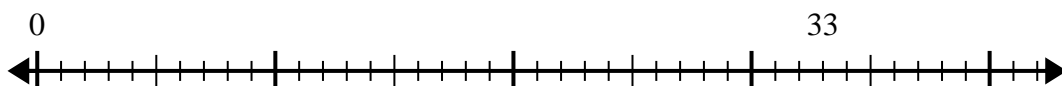
7. _____

8) $26 \div 8 =$



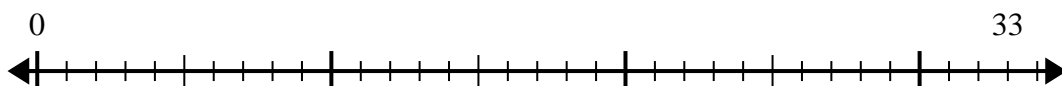
8. _____

9) $33 \div 5 =$



9. _____

10) $33 \div 4 =$

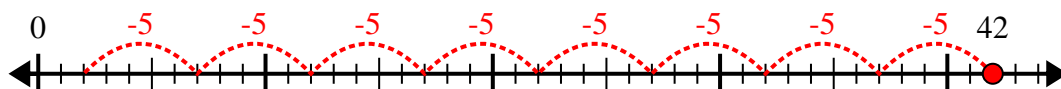


10. _____

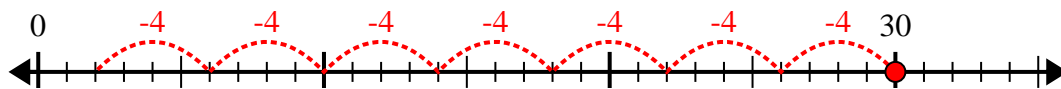


Utilisez la droite numérique pour résoudre le problème de division.

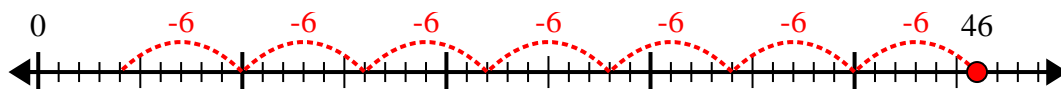
1) $42 \div 5 =$



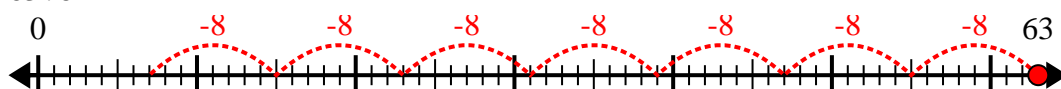
2) $30 \div 4 =$



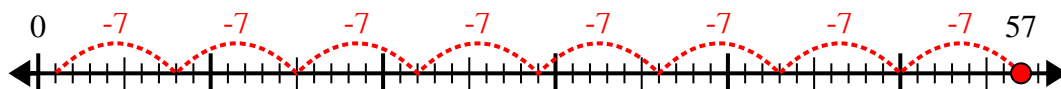
3) $46 \div 6 =$



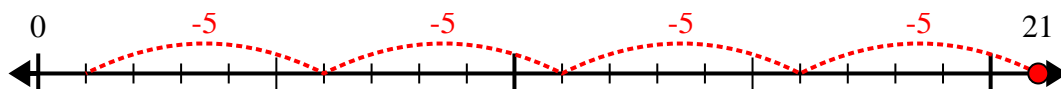
4) $63 \div 8 =$



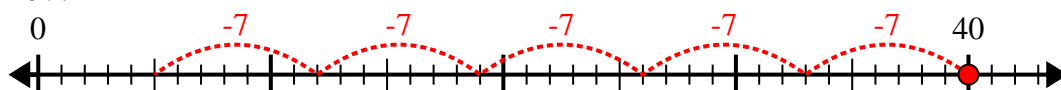
5) $57 \div 7 =$



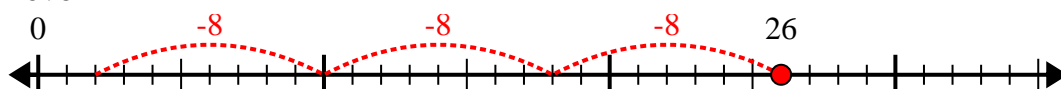
6) $21 \div 5 =$



7) $40 \div 7 =$



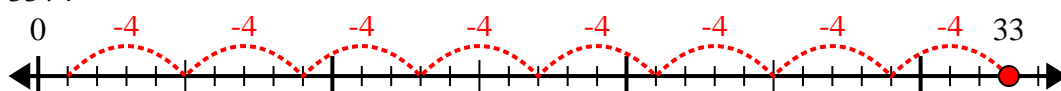
8) $26 \div 8 =$



9) $33 \div 5 =$



10) $33 \div 4 =$



Réponses

1. 8r2

2. 7r2

3. 7r4

4. 7r7

5. 8r1

6. 4r1

7. 5r5

8. 3r2

9. 6r3

10. 8r1