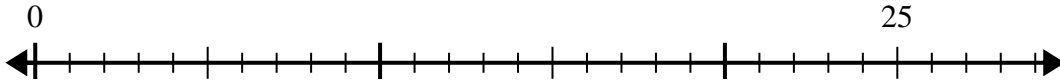




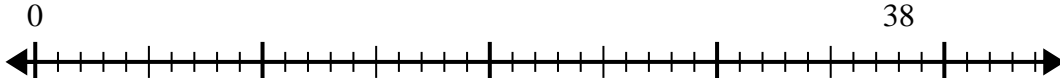
Utilisez la droite numérique pour résoudre le problème de division.

Réponses

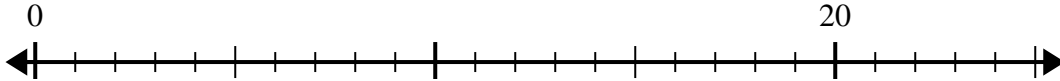
1) $25 \div 6 =$
0



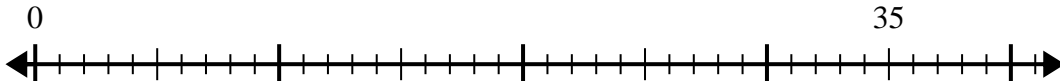
2) $38 \div 7 =$
0



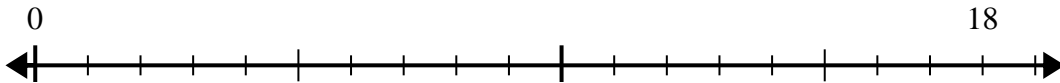
3) $20 \div 6 =$
0



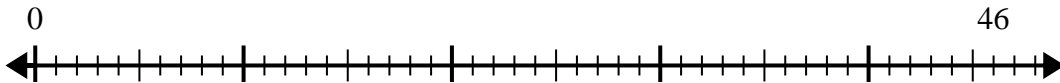
4) $35 \div 6 =$
0



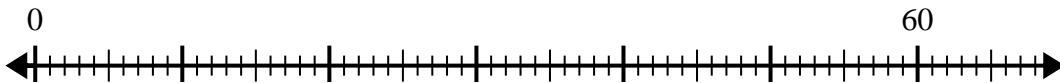
5) $18 \div 5 =$
0



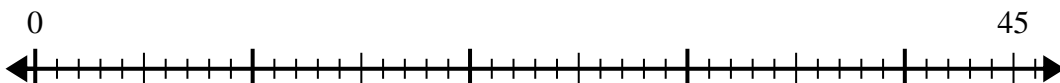
6) $46 \div 6 =$
0



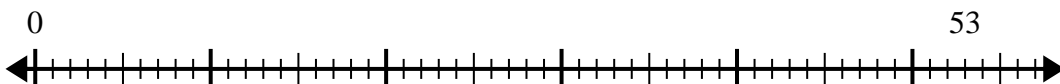
7) $60 \div 8 =$
0



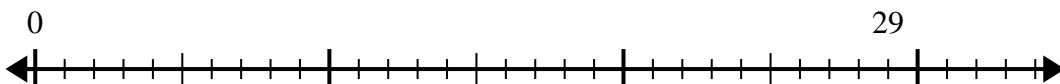
8) $45 \div 7 =$
0



9) $53 \div 8 =$
0



10) $29 \div 4 =$
0

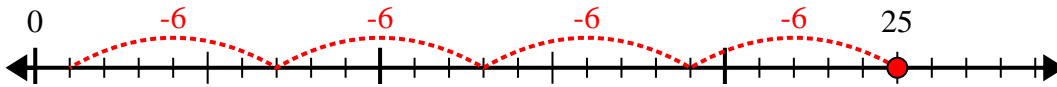


- 1. _____
- 2. _____
- 3. _____
- 4. _____
- 5. _____
- 6. _____
- 7. _____
- 8. _____
- 9. _____
- 10. _____

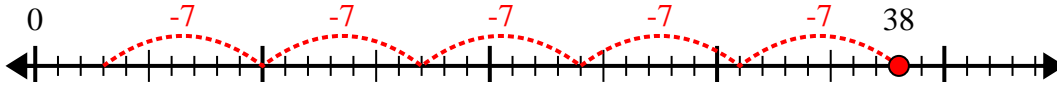


Utilisez la droite numérique pour résoudre le problème de division.

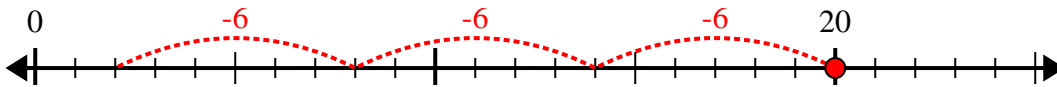
1) $25 \div 6 =$



2) $38 \div 7 =$



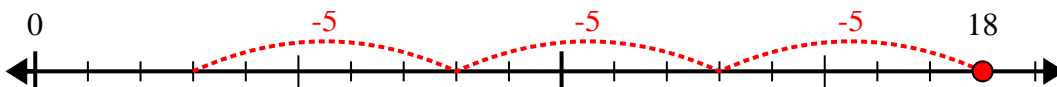
3) $20 \div 6 =$



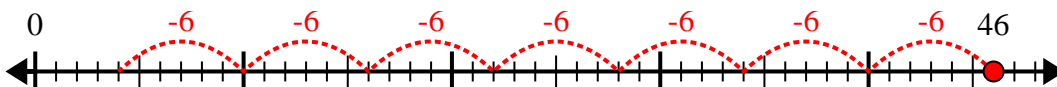
4) $35 \div 6 =$



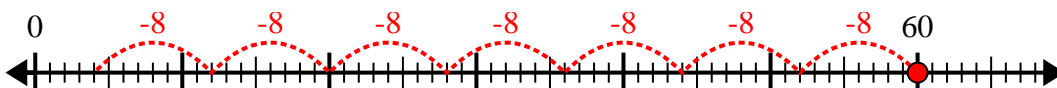
5) $18 \div 5 =$



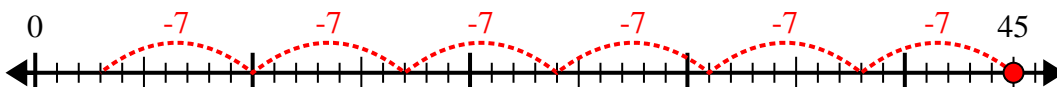
6) $46 \div 6 =$



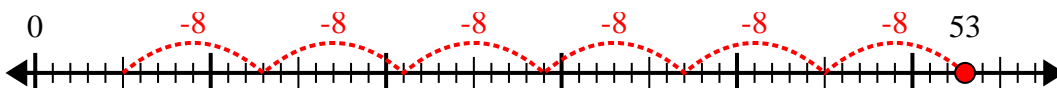
7) $60 \div 8 =$



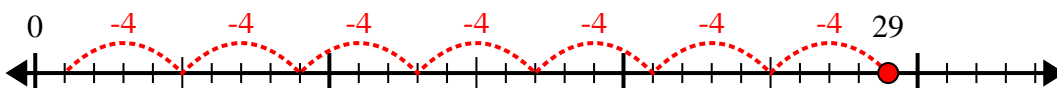
8) $45 \div 7 =$



9) $53 \div 8 =$



10) $29 \div 4 =$



Réponses

1. 4r1
2. 5r3
3. 3r2
4. 5r5
5. 3r3
6. 7r4
7. 7r4
8. 6r3
9. 6r5
10. 7r1