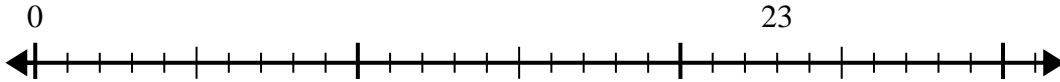




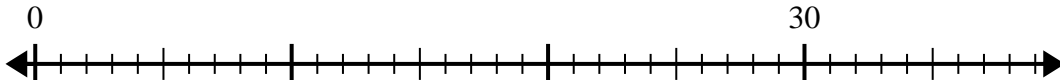
Utilisez la droite numérique pour résoudre le problème de division.

**Réponses**

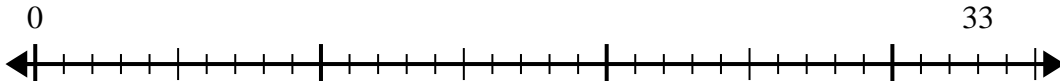
1)  $23 \div 5 =$   
0



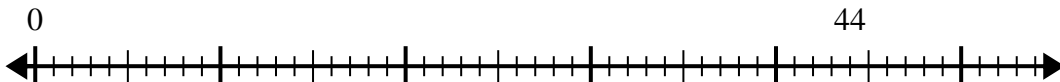
2)  $30 \div 4 =$   
0



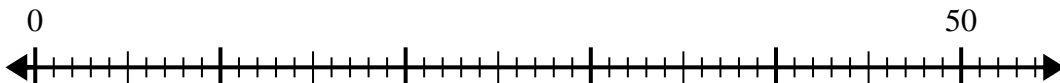
3)  $33 \div 6 =$   
0



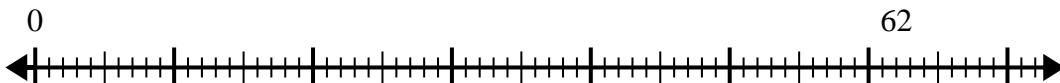
4)  $44 \div 6 =$   
0



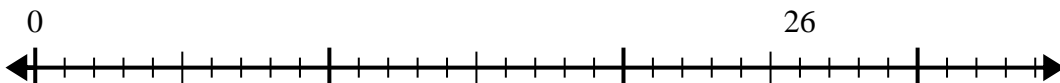
5)  $50 \div 6 =$   
0



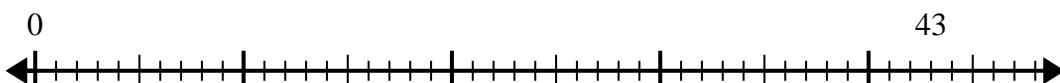
6)  $62 \div 8 =$   
0



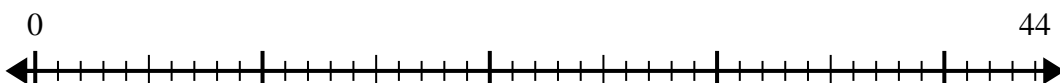
7)  $26 \div 6 =$   
0



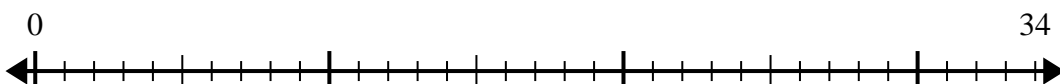
8)  $43 \div 8 =$   
0



9)  $44 \div 7 =$   
0



10)  $34 \div 4 =$   
0



- 1. \_\_\_\_\_
- 2. \_\_\_\_\_
- 3. \_\_\_\_\_
- 4. \_\_\_\_\_
- 5. \_\_\_\_\_
- 6. \_\_\_\_\_
- 7. \_\_\_\_\_
- 8. \_\_\_\_\_
- 9. \_\_\_\_\_
- 10. \_\_\_\_\_



Utilisez la droite numérique pour résoudre le problème de division.

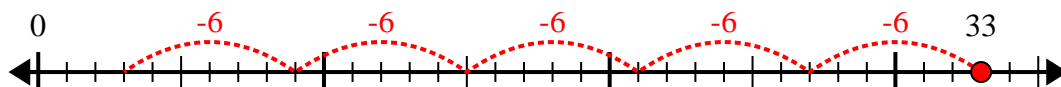
1)  $23 \div 5 =$



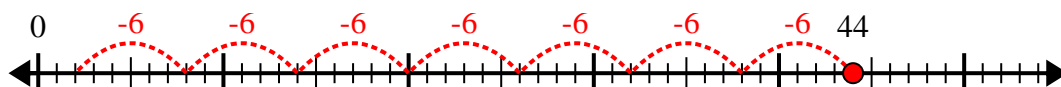
2)  $30 \div 4 =$



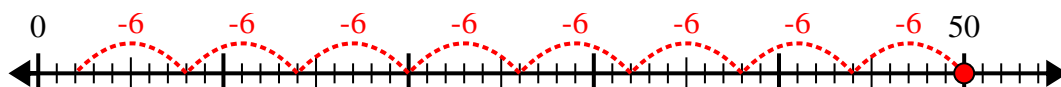
3)  $33 \div 6 =$



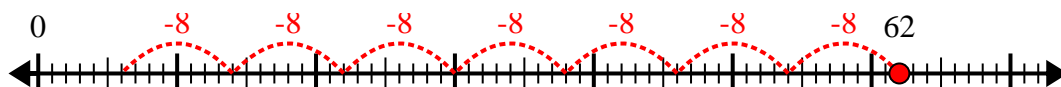
4)  $44 \div 6 =$



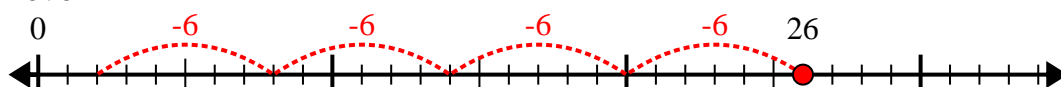
5)  $50 \div 6 =$



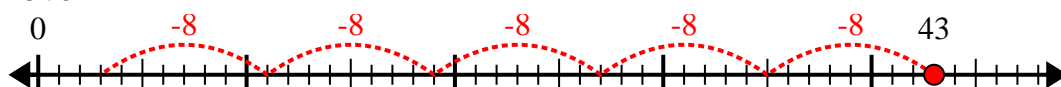
6)  $62 \div 8 =$



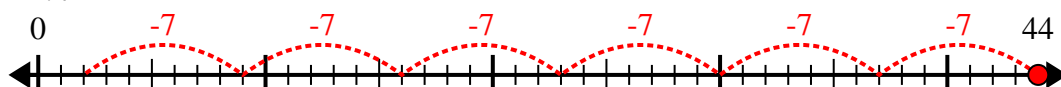
7)  $26 \div 6 =$



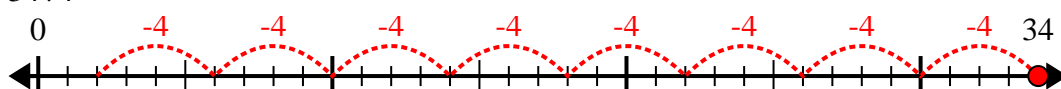
8)  $43 \div 8 =$



9)  $44 \div 7 =$



10)  $34 \div 4 =$



**Réponses**

1. 4r3

2. 7r2

3. 5r3

4. 7r2

5. 8r2

6. 7r6

7. 4r2

8. 5r3

9. 6r2

10. 8r2