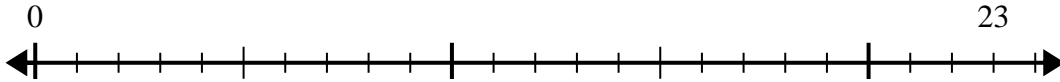




Utilisez la droite numérique pour résoudre le problème de division.

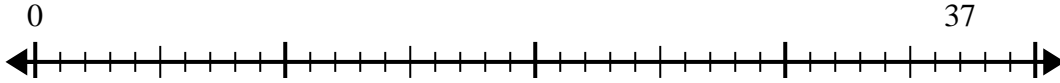
Réponses

1) $23 \div 4 =$
0



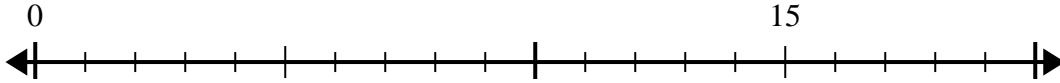
1. _____

2) $37 \div 8 =$
0



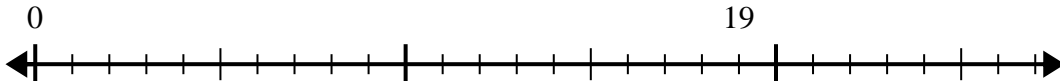
2. _____

3) $15 \div 4 =$
0



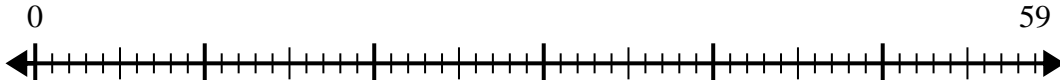
3. _____

4) $19 \div 6 =$
0



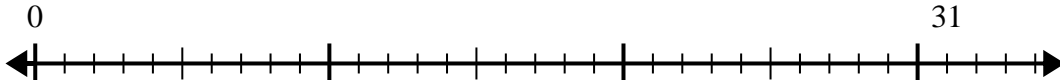
4. _____

5) $59 \div 8 =$
0



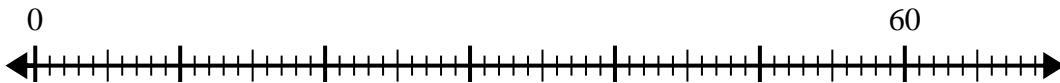
5. _____

6) $31 \div 8 =$
0



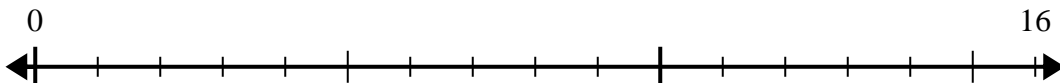
6. _____

7) $60 \div 7 =$
0



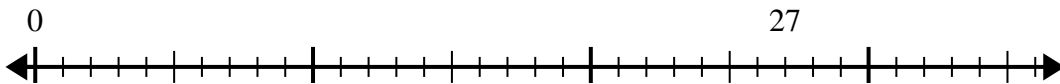
7. _____

8) $16 \div 5 =$
0



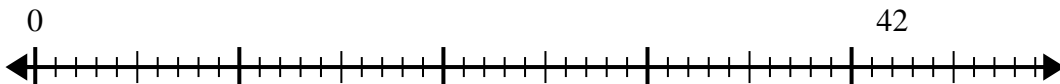
8. _____

9) $27 \div 4 =$
0



9. _____

10) $42 \div 5 =$
0

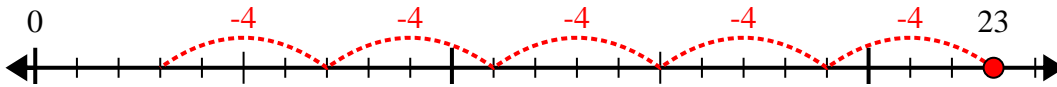


10. _____

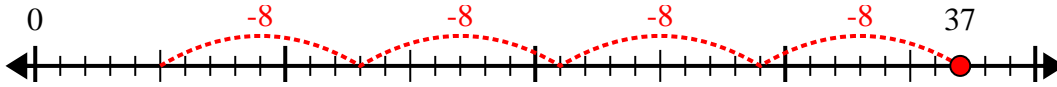


Utilisez la droite numérique pour résoudre le problème de division.

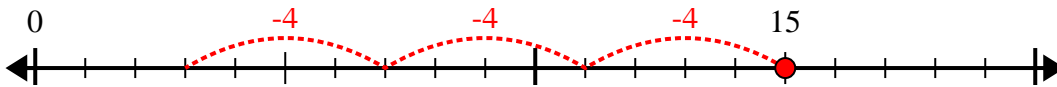
1) $23 \div 4 =$



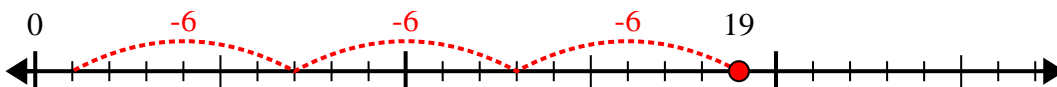
2) $37 \div 8 =$



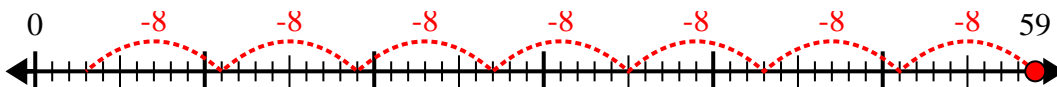
3) $15 \div 4 =$



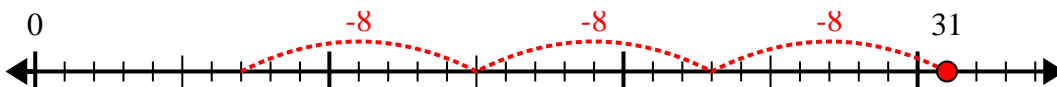
4) $19 \div 6 =$



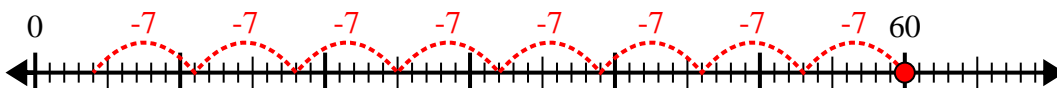
5) $59 \div 8 =$



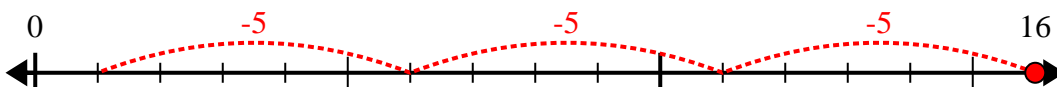
6) $31 \div 8 =$



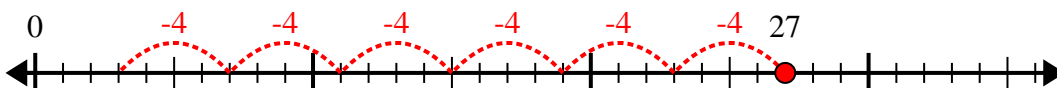
7) $60 \div 7 =$



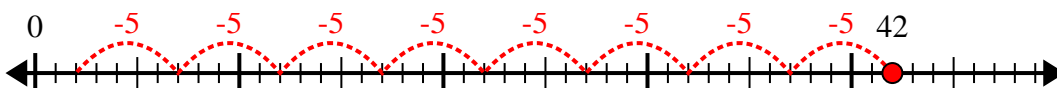
8) $16 \div 5 =$



9) $27 \div 4 =$



10) $42 \div 5 =$



Réponses

1. 5r3

2. 4r5

3. 3r3

4. 3r1

5. 7r3

6. 3r7

7. 8r4

8. 3r1

9. 6r3

10. 8r2