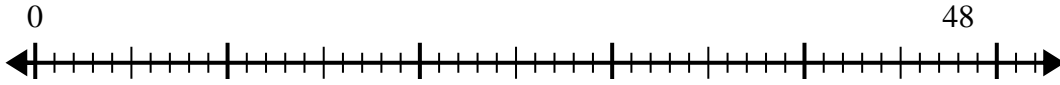




Utilisez la droite numérique pour résoudre le problème de division.

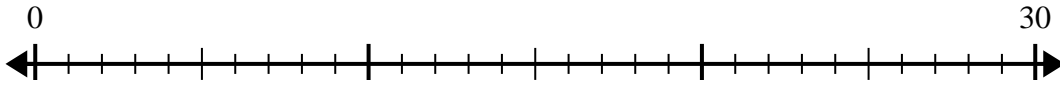
Réponses

1) $48 \div 8 =$



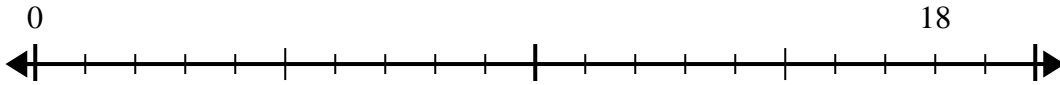
1. _____

2) $30 \div 6 =$



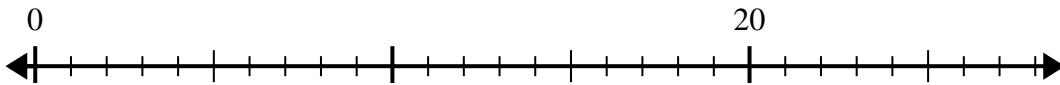
2. _____

3) $18 \div 6 =$



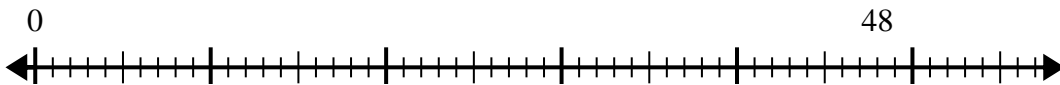
3. _____

4) $20 \div 4 =$



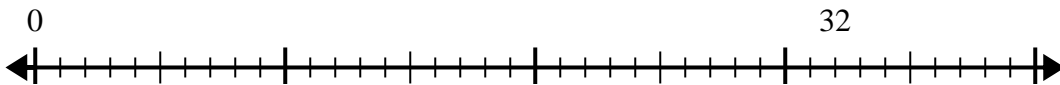
4. _____

5) $48 \div 6 =$



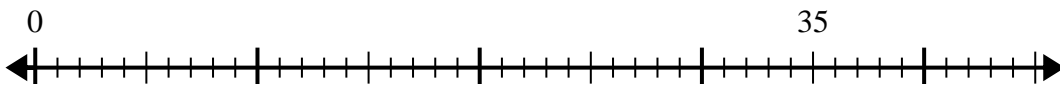
5. _____

6) $32 \div 8 =$



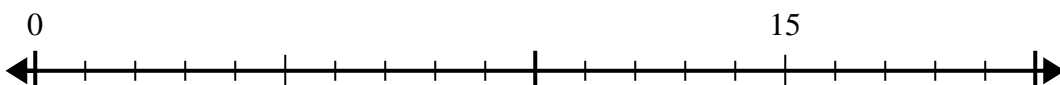
6. _____

7) $35 \div 7 =$



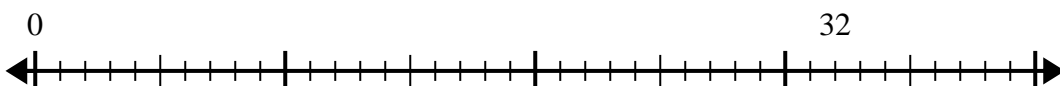
7. _____

8) $15 \div 5 =$



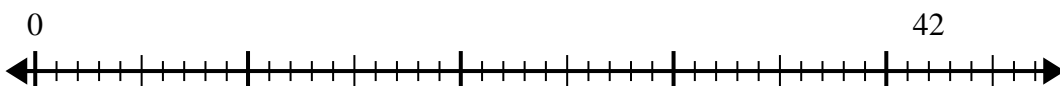
8. _____

9) $32 \div 4 =$



9. _____

10) $42 \div 7 =$



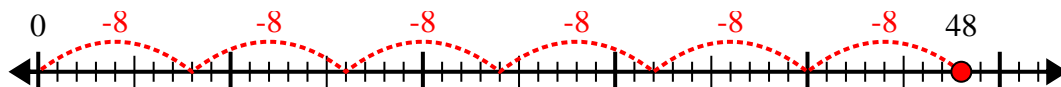
10. _____

10. _____

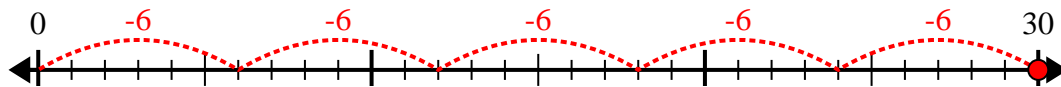


Utilisez la droite numérique pour résoudre le problème de division.

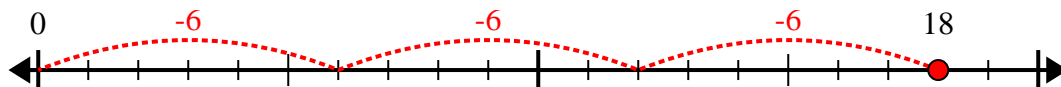
1) $48 \div 8 =$



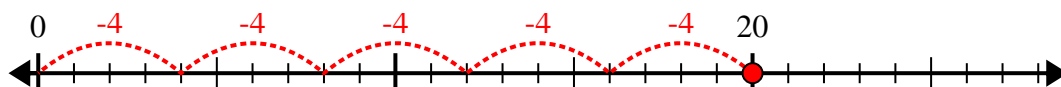
2) $30 \div 6 =$



3) $18 \div 6 =$



4) $20 \div 4 =$



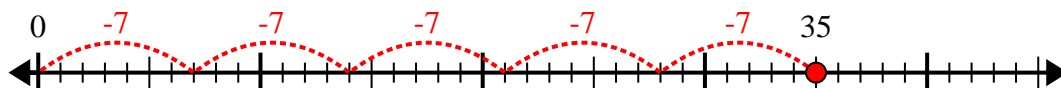
5) $48 \div 6 =$



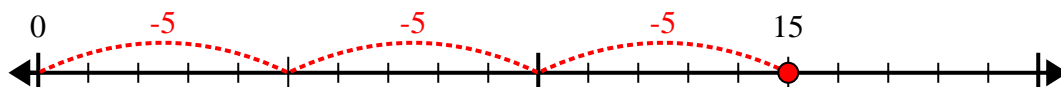
6) $32 \div 8 =$



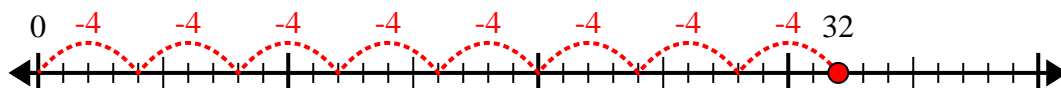
7) $35 \div 7 =$



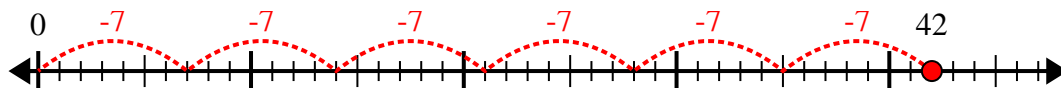
8) $15 \div 5 =$



9) $32 \div 4 =$



10) $42 \div 7 =$



Réponses

1. 6
2. 5
3. 3
4. 5
5. 8
6. 4
7. 5
8. 3
9. 8
10. 6