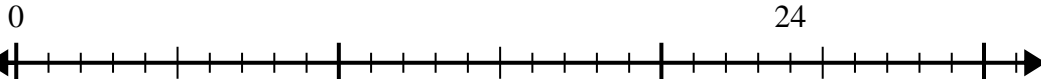




Utilisez la droite numérique pour résoudre le problème de division.

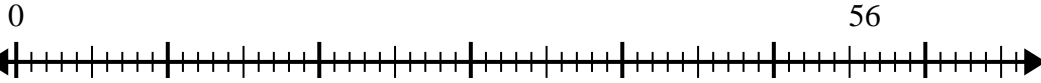
Réponses

1) $24 \div 8 =$



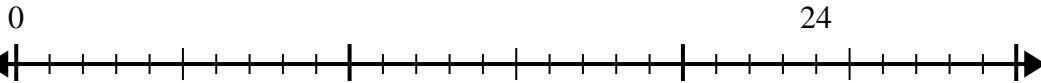
1. _____

2) $56 \div 8 =$



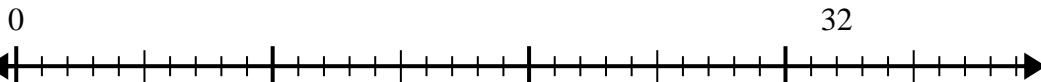
2. _____

3) $24 \div 4 =$



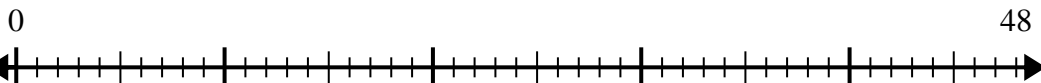
3. _____

4) $32 \div 4 =$



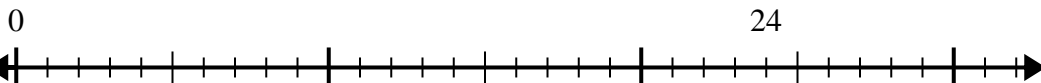
4. _____

5) $48 \div 8 =$



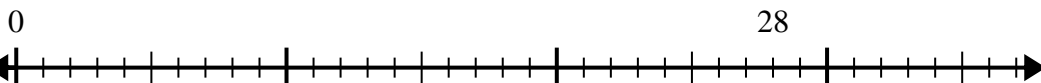
5. _____

6) $24 \div 6 =$



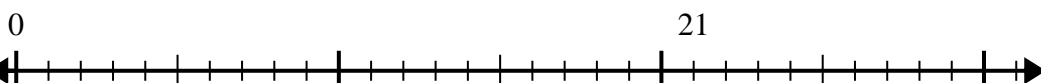
6. _____

7) $28 \div 4 =$



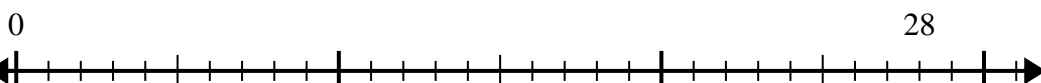
7. _____

8) $21 \div 7 =$



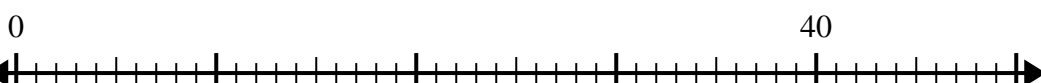
8. _____

9) $28 \div 7 =$



9. _____

10) $40 \div 5 =$

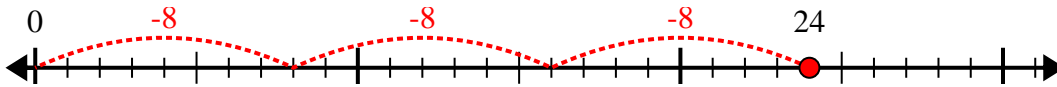


10. _____

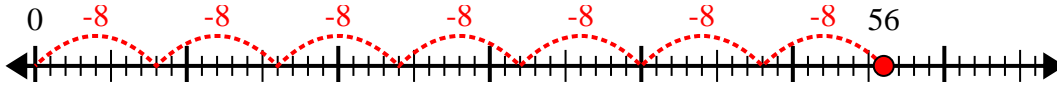


Utilisez la droite numérique pour résoudre le problème de division.

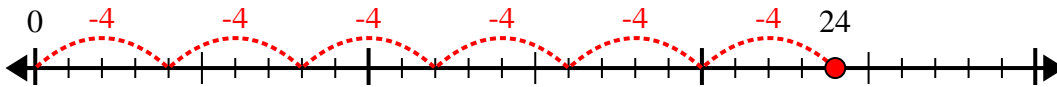
1) $24 \div 8 =$



2) $56 \div 8 =$



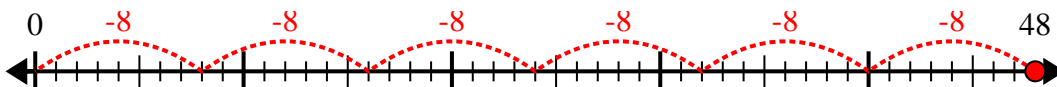
3) $24 \div 4 =$



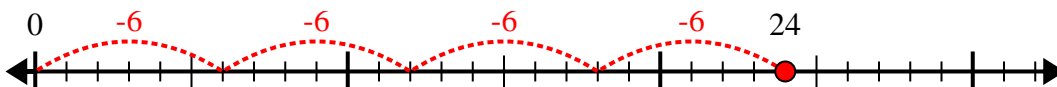
4) $32 \div 4 =$



5) $48 \div 8 =$



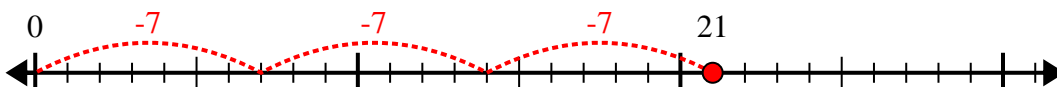
6) $24 \div 6 =$



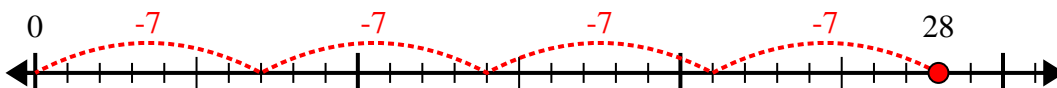
7) $28 \div 4 =$



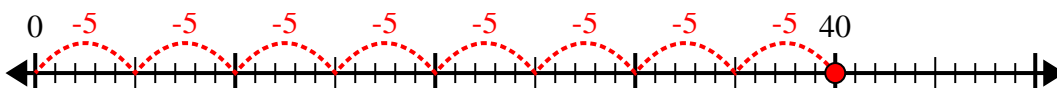
8) $21 \div 7 =$



9) $28 \div 7 =$



10) $40 \div 5 =$



Réponses

1. 3

2. 7

3. 6

4. 8

5. 6

6. 4

7. 7

8. 3

9. 4

10. 8