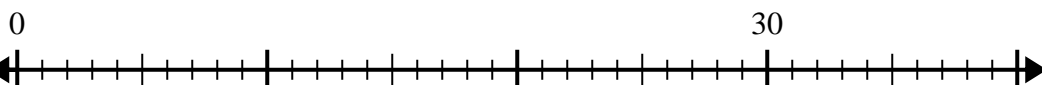




Utilisez la droite numérique pour résoudre le problème de division.

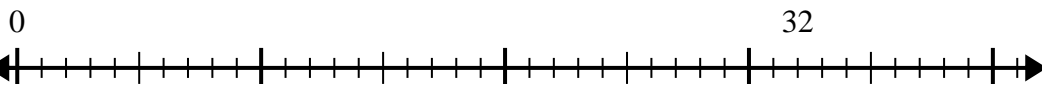
Réponses

1) $30 \div 6 =$



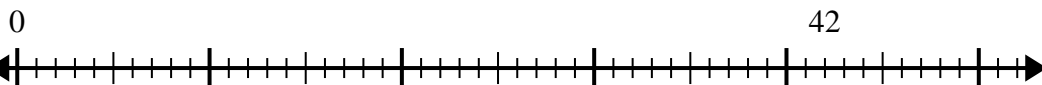
1. _____

2) $32 \div 4 =$



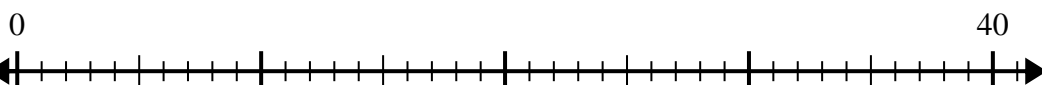
2. _____

3) $42 \div 7 =$



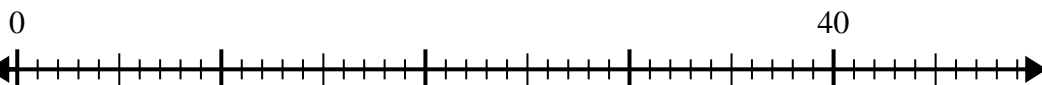
3. _____

4) $40 \div 5 =$



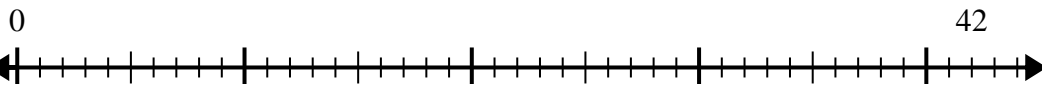
4. _____

5) $40 \div 8 =$



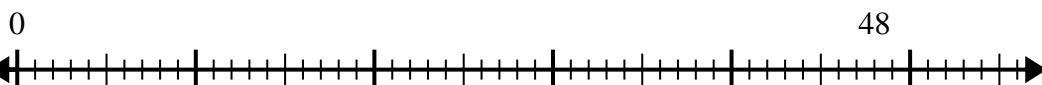
5. _____

6) $42 \div 6 =$



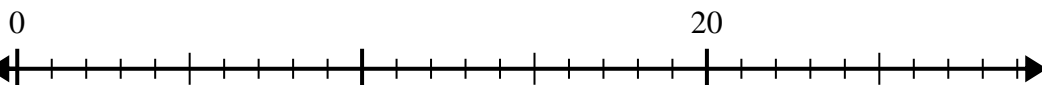
6. _____

7) $48 \div 6 =$



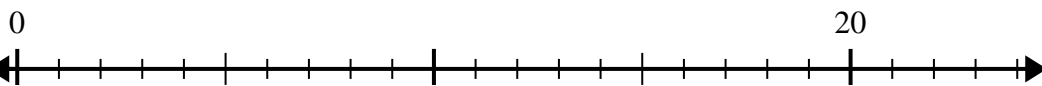
7. _____

8) $20 \div 4 =$



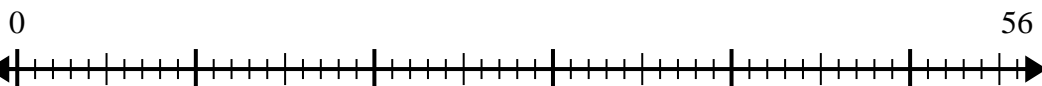
8. _____

9) $20 \div 5 =$



9. _____

10) $56 \div 8 =$

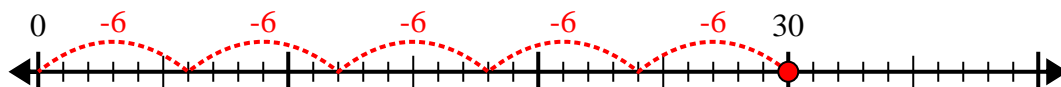


10. _____

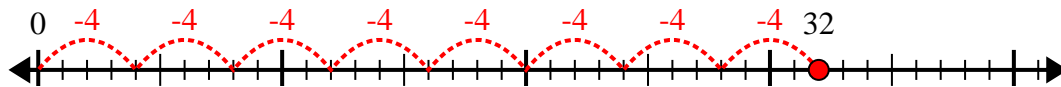


Utilisez la droite numérique pour résoudre le problème de division.

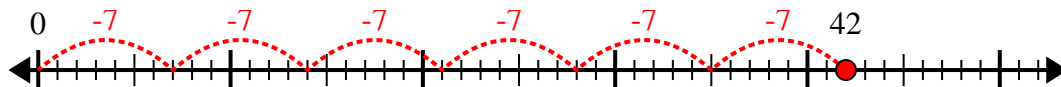
1) $30 \div 6 =$



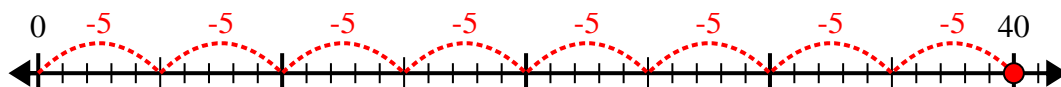
2) $32 \div 4 =$



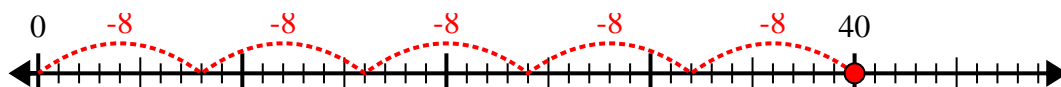
3) $42 \div 7 =$



4) $40 \div 5 =$



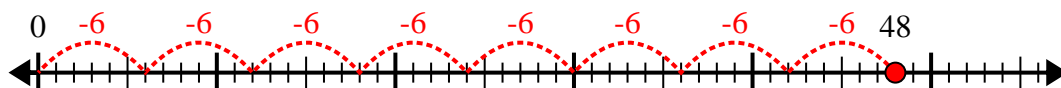
5) $40 \div 8 =$



6) $42 \div 6 =$



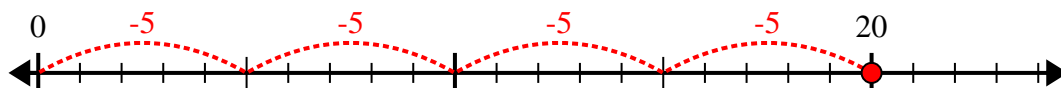
7) $48 \div 6 =$



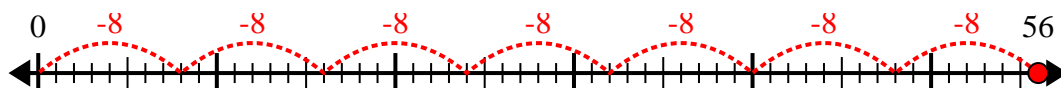
8) $20 \div 4 =$



9) $20 \div 5 =$



10) $56 \div 8 =$



Réponses

1. 5

2. 8

3. 6

4. 8

5. 5

6. 7

7. 8

8. 5

9. 4

10. 7