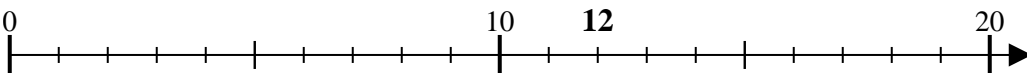




Utilisez la droite numérique pour résoudre chaque problème.

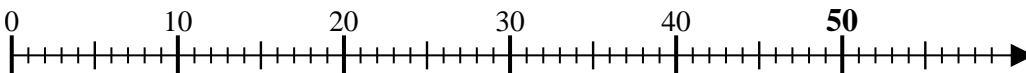
Réponses

1) $12 \div 6 = 0$



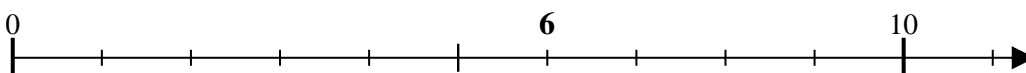
1. _____

2) $50 \div 10 = 0$



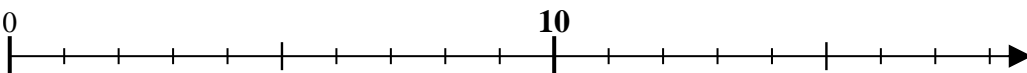
2. _____

3) $6 \div 2 = 0$



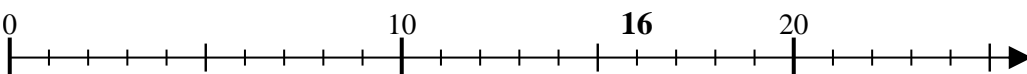
3. _____

4) $10 \div 5 = 0$



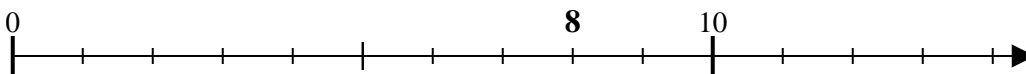
4. _____

5) $16 \div 8 = 0$



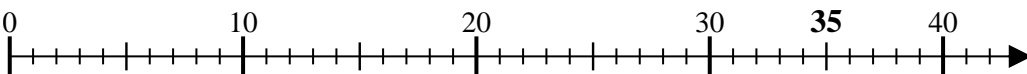
5. _____

6) $8 \div 2 = 0$



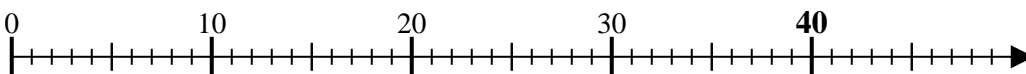
6. _____

7) $35 \div 7 = 0$



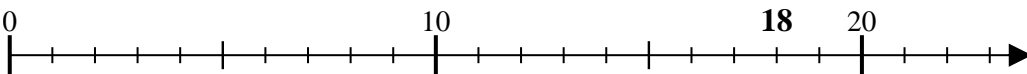
7. _____

8) $40 \div 10 = 0$



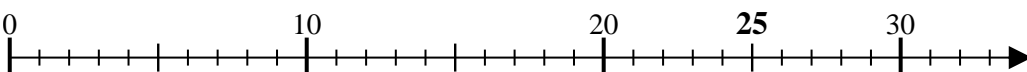
8. _____

9) $18 \div 6 = 0$



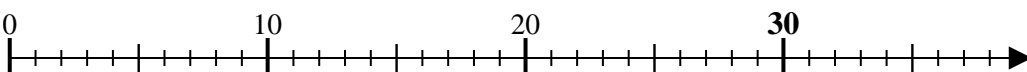
9. _____

10) $25 \div 5 = 0$



10. _____

11) $30 \div 6 = 0$



11. _____

