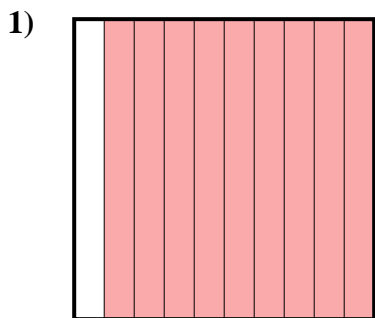


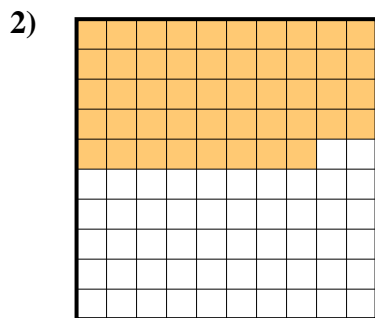


Déterminez quelle lettre représente le mieux la valeur colorée relative à la figure.


Réponses



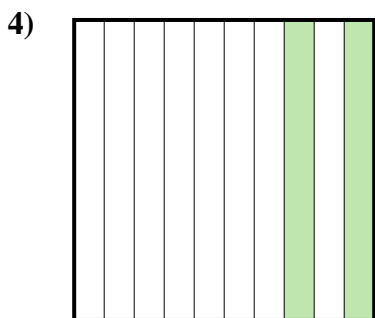
- A. 900,00
- B. 900,0
- C. 90
- D. 0,9



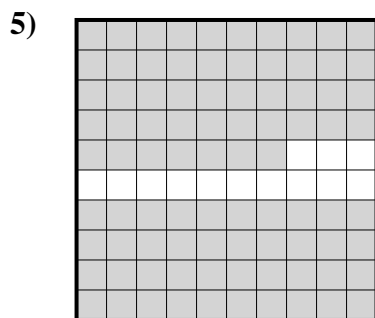
- A. 0,48
- B. 48
- C. 480,00
- D. 4,8



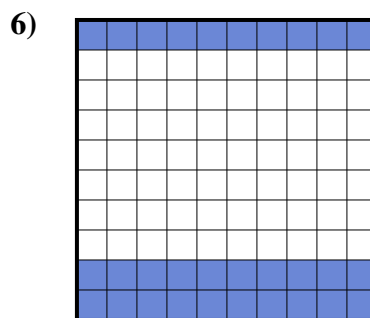
- A. 0,1
- B. 100,00
- C. 10
- D. 1



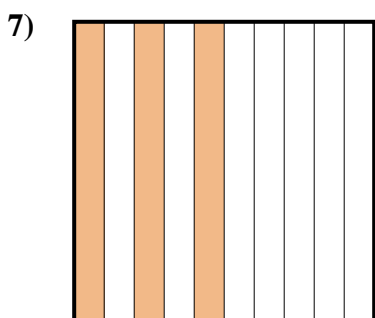
- A. 200,0
- B. 0,2
- C. 20
- D. 200,00



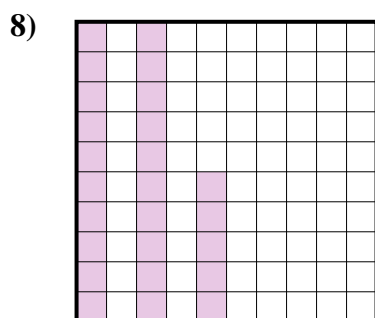
- A. 870,0
- B. 0,087
- C. 0,87
- D. 870,00




- A. 3
- B. 30
- C. 300,00
- D. 0,3



- A. 3
- B. 30
- C. 300,0
- D. 0,3



- A. 2,5
- B. 0,025
- C. 250,0
- D. 0,25



- A. 0,06
- B. 0,6
- C. 600,0
- D. 60

1. _____

2. _____

3. _____

4. _____

5. _____

6. _____

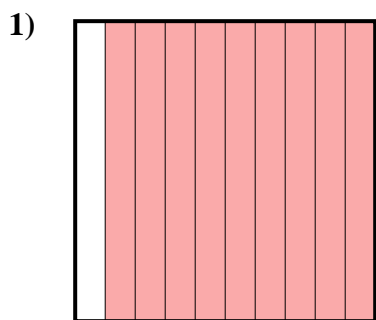
7. _____

8. _____

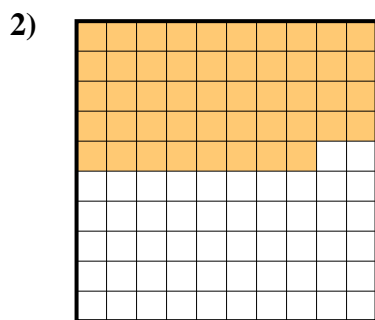
9. _____




Déterminez quelle lettre représente le mieux la valeur colorée relative à la figure.



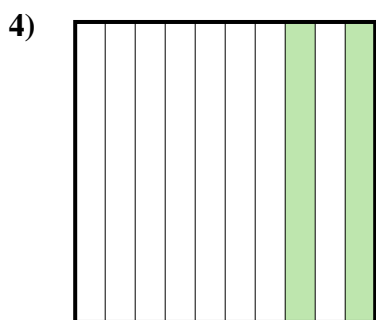
- A. 900,00
B. 900,0
C. 90
D. 0,9



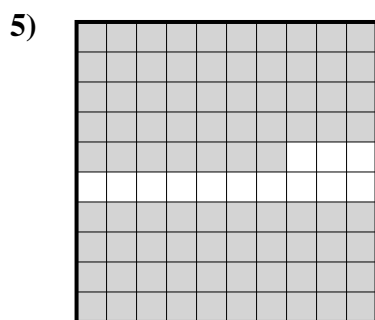
- A. 0,48
B. 48
C. 480,00
D. 4,8



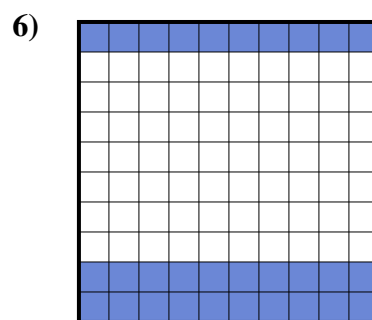
- A. 0,1
B. 100,00
C. 10
D. 1



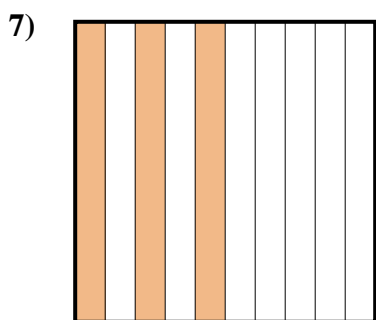
- A. 200,0
B. 0,2
C. 20
D. 200,00



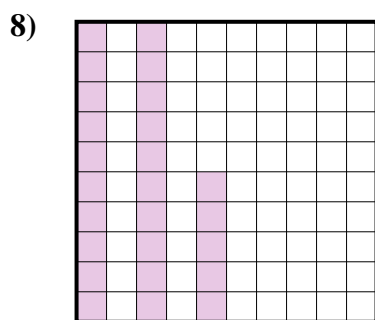
- A. 870,0
B. 0,087
C. 0,87
D. 870,00




- A. 3
B. 30
C. 300,00
D. 0,3



- A. 3
B. 30
C. 300,0
D. 0,3



- A. 2,5
B. 0,025
C. 250,0
D. 0,25



- A. 0,06
B. 0,6
C. 600,0
D. 60

Réponses

1. **D**
2. **A**
3. **A**
4. **B**
5. **C**
6. **D**
7. **D**
8. **D**
9. **B**