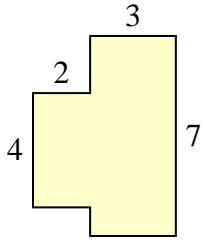


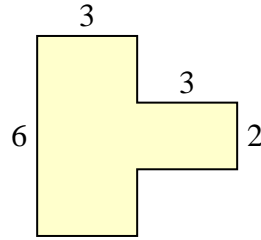


Calculez l'aire totale de chaque figure. Les mesures sont en millimètres (mm).

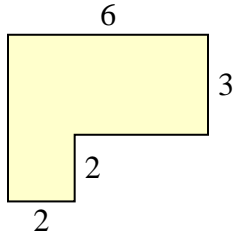
1)



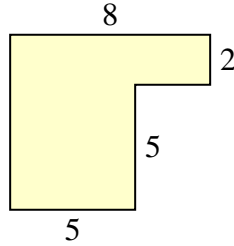
2)



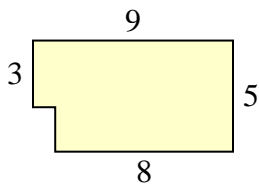
3)



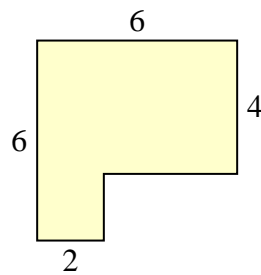
4)



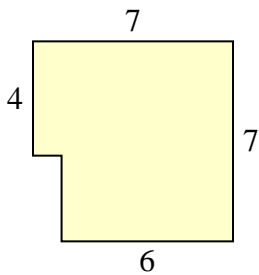
5)



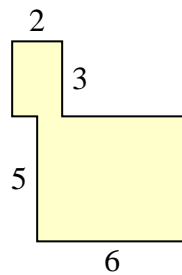
6)



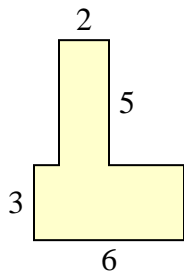
7)



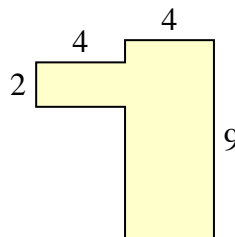
8)



9)



10)

**Réponses**

1. _____

2. _____

3. _____

4. _____

5. _____

6. _____

7. _____

8. _____

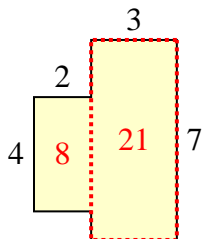
9. _____

10. _____

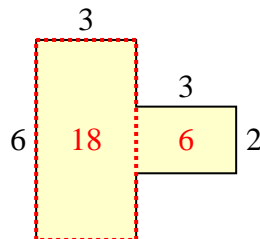


Calculez l'aire totale de chaque figure. Les mesures sont en millimètres (mm).

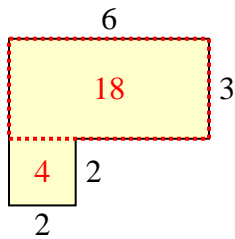
1)



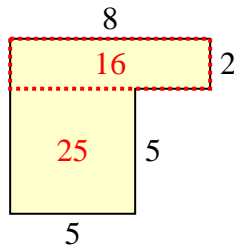
2)



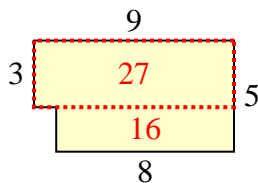
3)



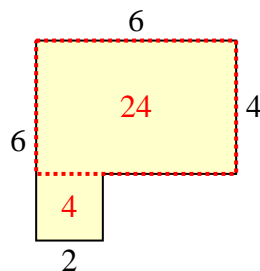
4)



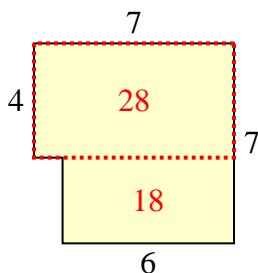
5)



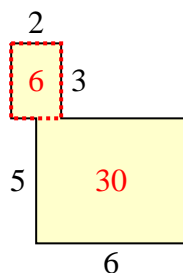
6)



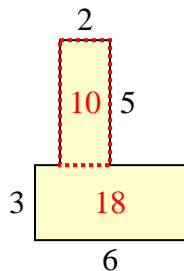
7)



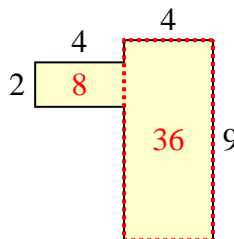
8)



9)



10)

**Réponses**

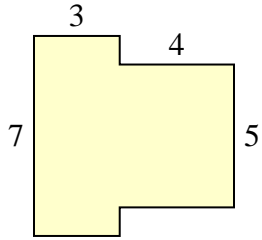
1. 29 mm²
2. 24 mm²
3. 22 mm²
4. 41 mm²
5. 43 mm²
6. 28 mm²
7. 46 mm²
8. 36 mm²
9. 28 mm²
10. 44 mm²



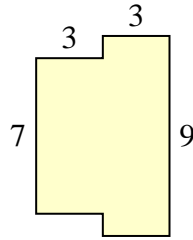
Calculez l'aire totale de chaque figure. Les mesures sont en millimètres (mm).

Réponses

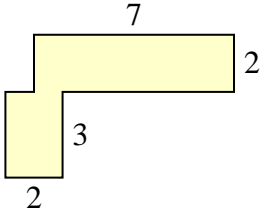
1)



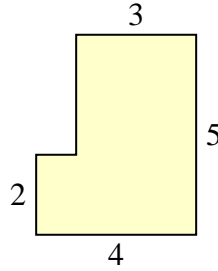
2)



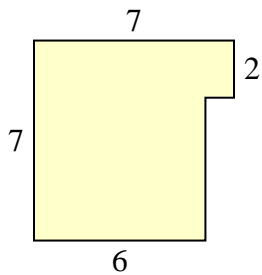
3)



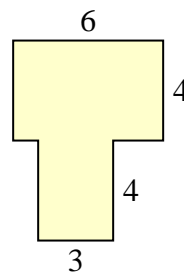
4)



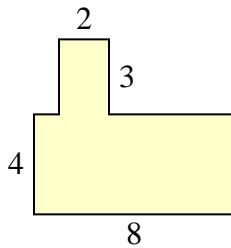
5)



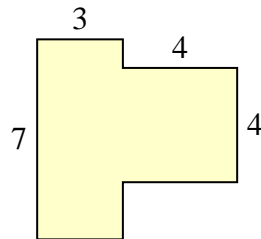
6)



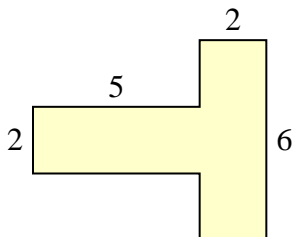
7)



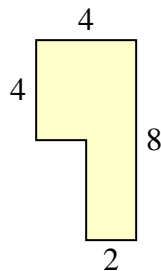
8)



9)



10)

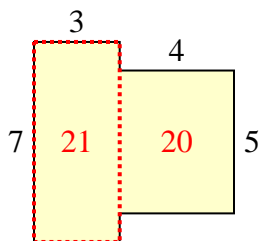


- 1. _____
- 2. _____
- 3. _____
- 4. _____
- 5. _____
- 6. _____
- 7. _____
- 8. _____
- 9. _____
- 10. _____

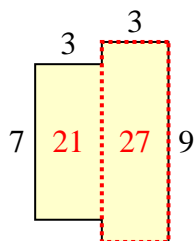


Calculez l'aire totale de chaque figure. Les mesures sont en millimètres (mm).

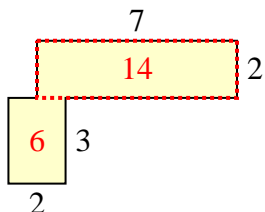
1)



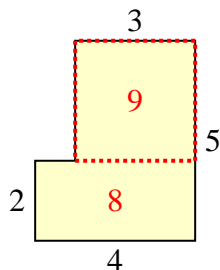
2)



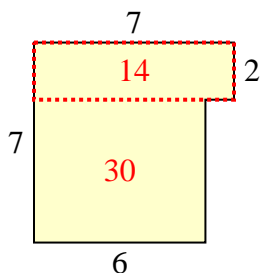
3)



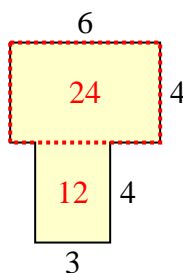
4)



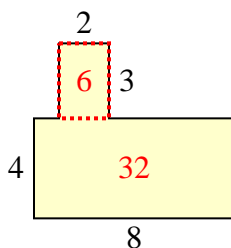
5)



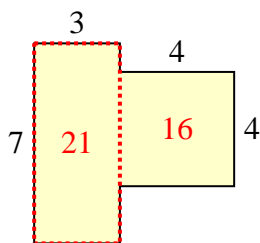
6)



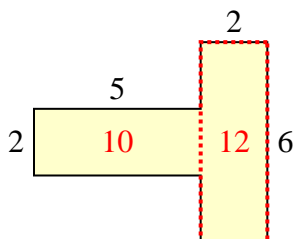
7)



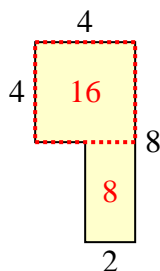
8)



9)



10)

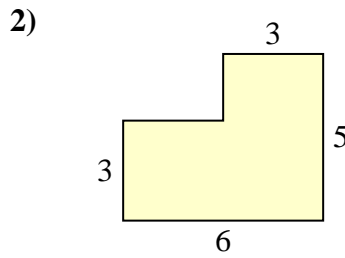
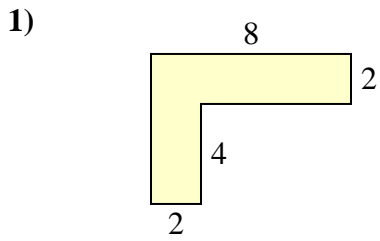
**Réponses**

1. 41 mm²
2. 48 mm²
3. 20 mm²
4. 17 mm²
5. 44 mm²
6. 36 mm²
7. 38 mm²
8. 37 mm²
9. 22 mm²
10. 24 mm²



Calculez l'aire totale de chaque figure. Les mesures sont en millimètres (mm).

Réponses

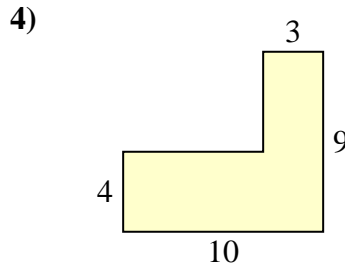
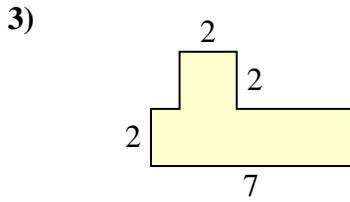


1. _____

2. _____

3. _____

4. _____

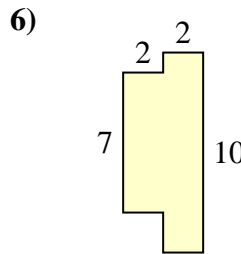
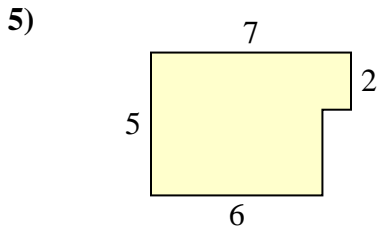


5. _____

6. _____

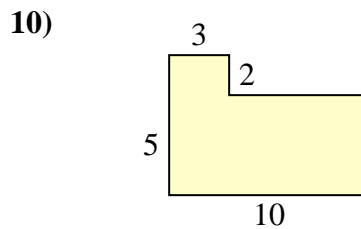
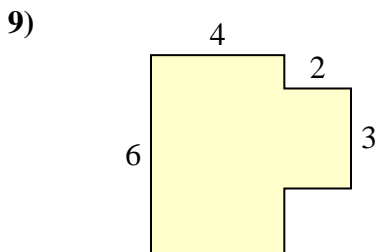
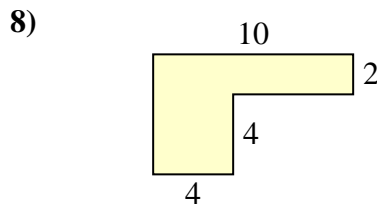
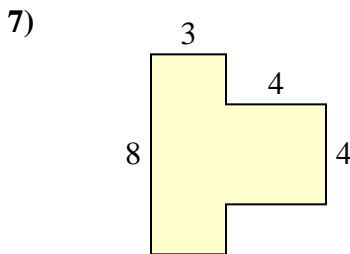
7. _____

8. _____



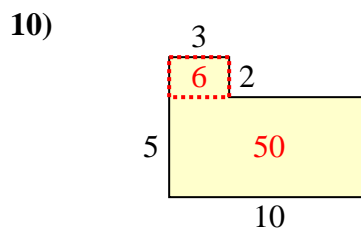
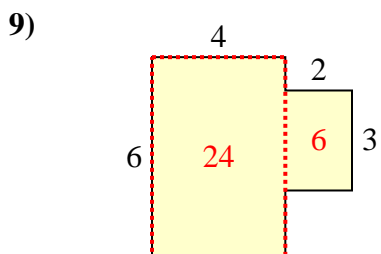
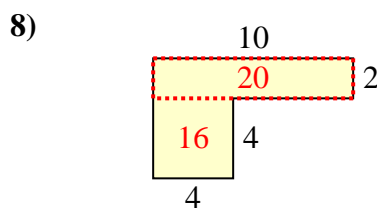
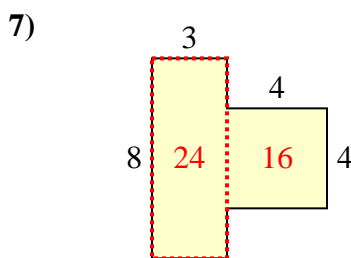
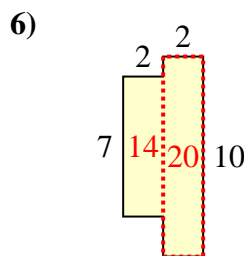
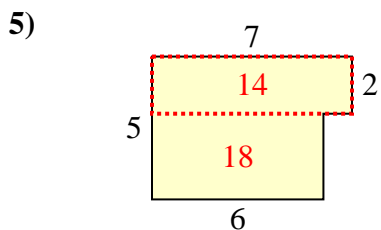
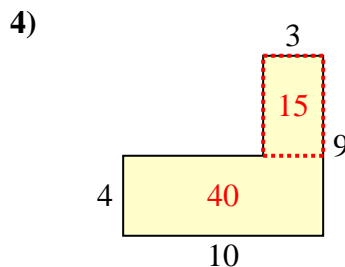
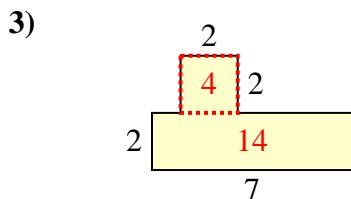
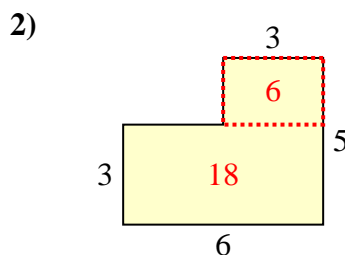
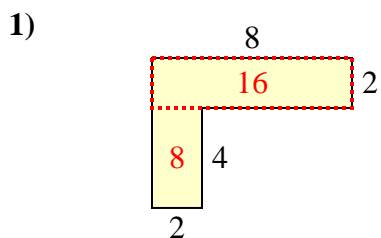
9. _____

10. _____





Calculez l'aire totale de chaque figure. Les mesures sont en millimètres (mm).

**Réponses**

1. 24 mm²

2. 24 mm²

3. 18 mm²

4. 55 mm²

5. 32 mm²

6. 34 mm²

7. 40 mm²

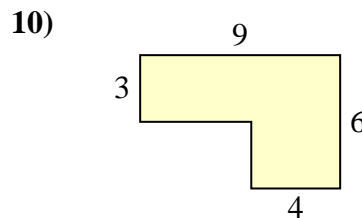
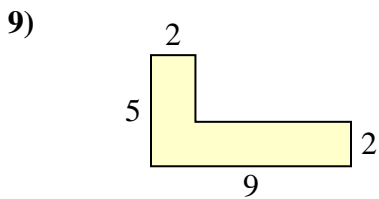
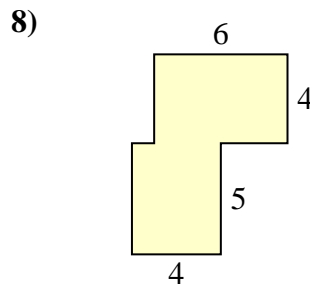
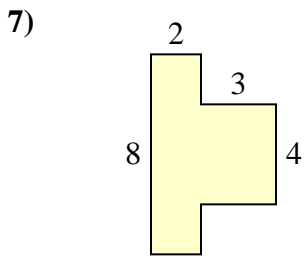
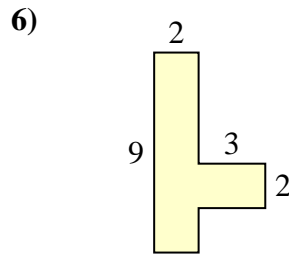
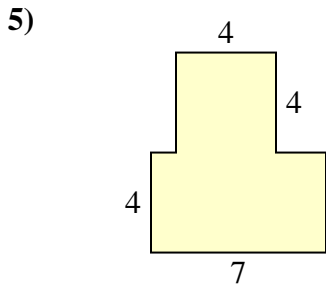
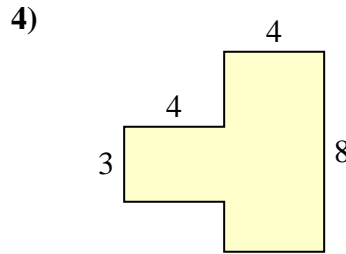
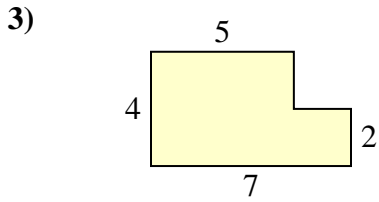
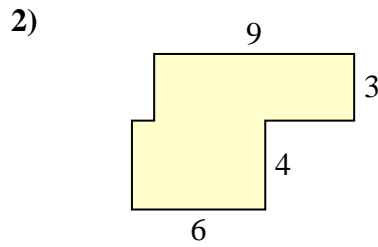
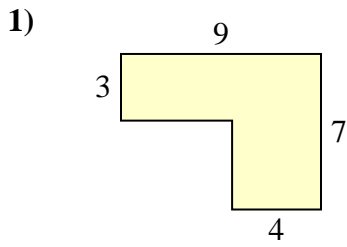
8. 36 mm²

9. 30 mm²

10. 56 mm²



Calculez l'aire totale de chaque figure. Les mesures sont en millimètres (mm).

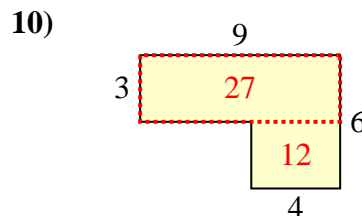
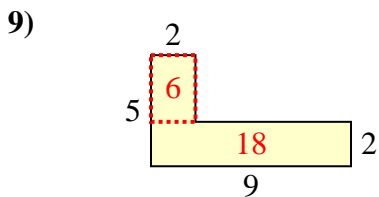
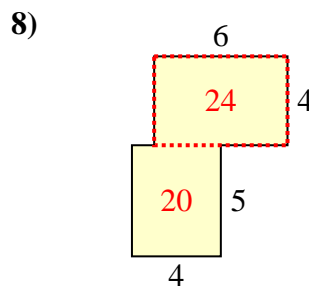
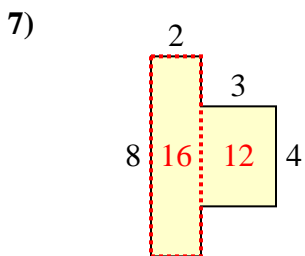
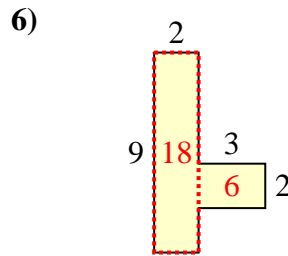
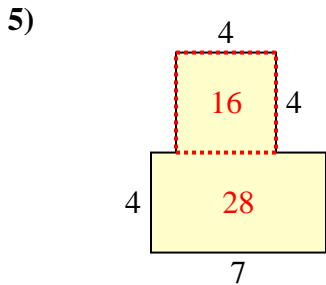
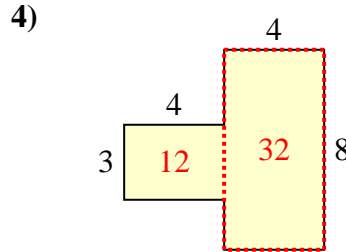
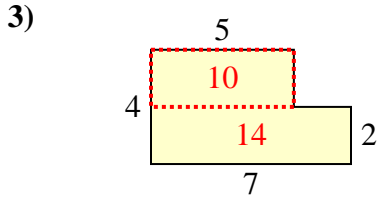
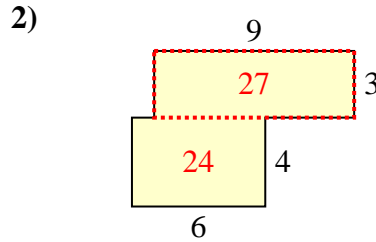
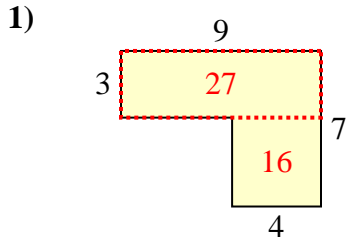


Réponses

1. _____
2. _____
3. _____
4. _____
5. _____
6. _____
7. _____
8. _____
9. _____
10. _____



Calculez l'aire totale de chaque figure. Les mesures sont en millimètres (mm).

**Réponses**

1. 43 mm²

2. 51 mm²

3. 24 mm²

4. 44 mm²

5. 44 mm²

6. 24 mm²

7. 28 mm²

8. 44 mm²

9. 24 mm²

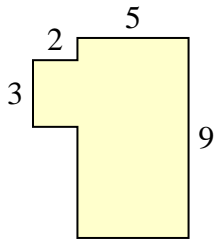
10. 39 mm²



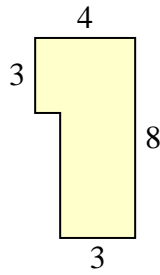
Calculez l'aire totale de chaque figure. Les mesures sont en millimètres (mm).

Réponses

1)



2)



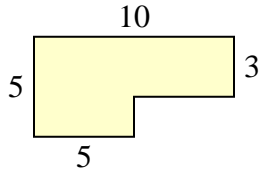
1. _____

2. _____

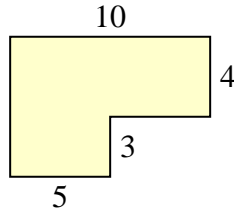
3. _____

4. _____

3)



4)



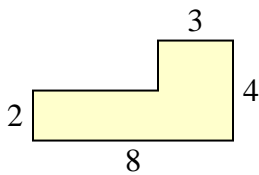
5. _____

6. _____

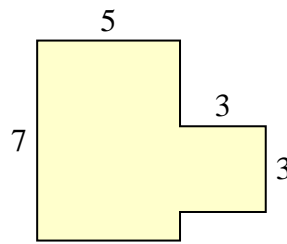
7. _____

8. _____

5)



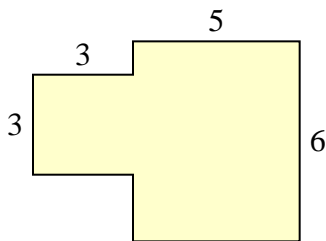
6)



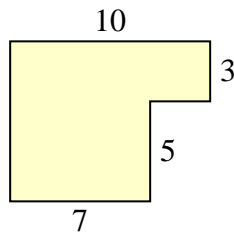
9. _____

10. _____

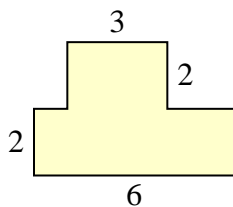
7)



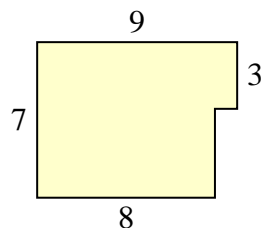
8)



9)



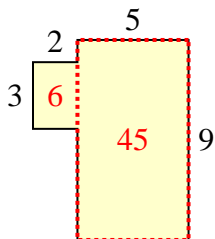
10)



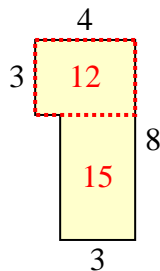


Calculez l'aire totale de chaque figure. Les mesures sont en millimètres (mm).

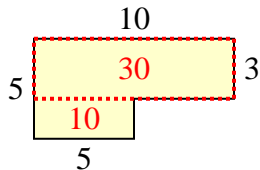
1)



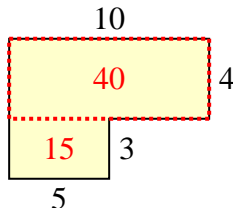
2)



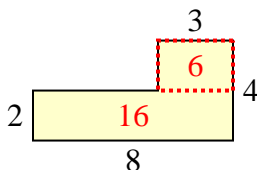
3)



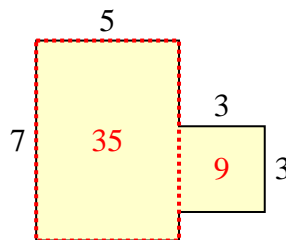
4)



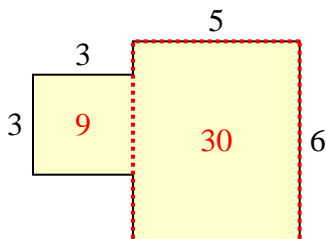
5)



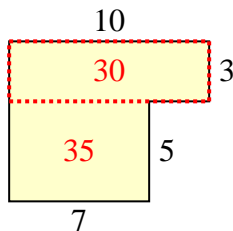
6)



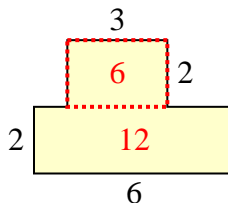
7)



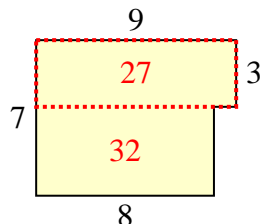
8)



9)



10)

**Réponses**

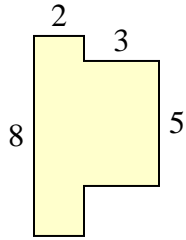
1. 51 mm²
2. 27 mm²
3. 40 mm²
4. 55 mm²
5. 22 mm²
6. 44 mm²
7. 39 mm²
8. 65 mm²
9. 18 mm²
10. 59 mm²



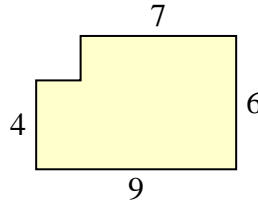
Calculez l'aire totale de chaque figure. Les mesures sont en millimètres (mm).

Réponses

1)



2)



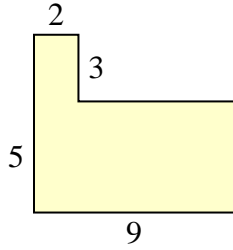
1. _____

2. _____

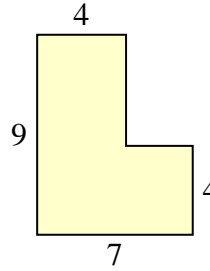
3. _____

4. _____

3)



4)



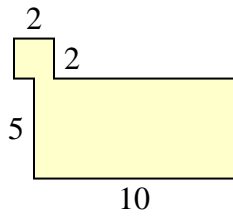
5. _____

6. _____

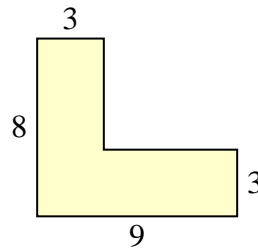
7. _____

8. _____

5)



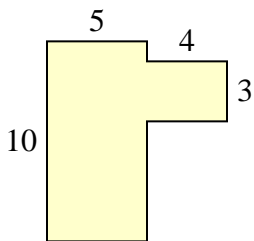
6)



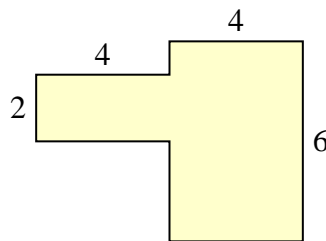
9. _____

10. _____

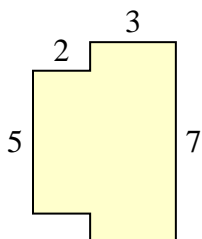
7)



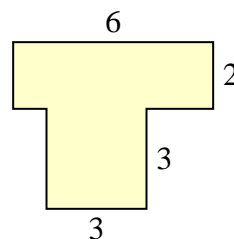
8)



9)



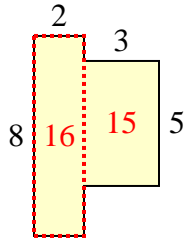
10)



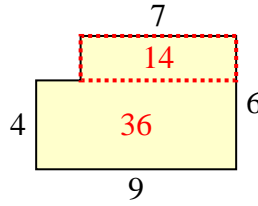


Calculez l'aire totale de chaque figure. Les mesures sont en millimètres (mm).

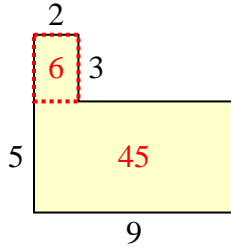
1)



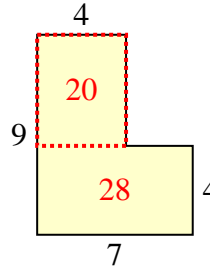
2)



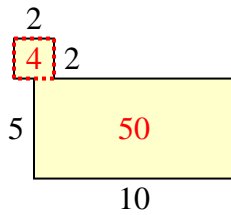
3)



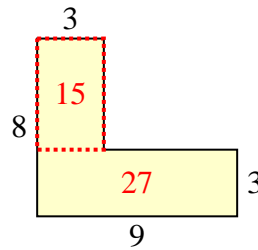
4)



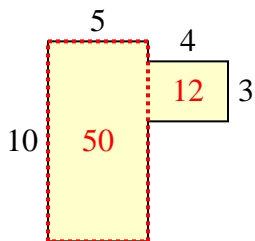
5)



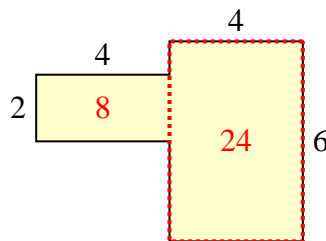
6)



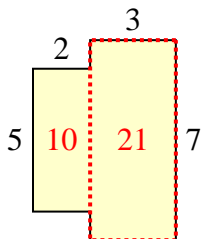
7)



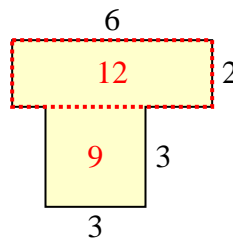
8)



9)



10)

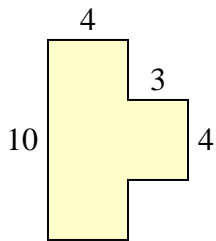
**Réponses**

1. 31 mm²
2. 50 mm²
3. 51 mm²
4. 48 mm²
5. 54 mm²
6. 42 mm²
7. 62 mm²
8. 32 mm²
9. 31 mm²
10. 21 mm²

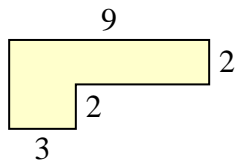


Calculez l'aire totale de chaque figure. Les mesures sont en millimètres (mm).

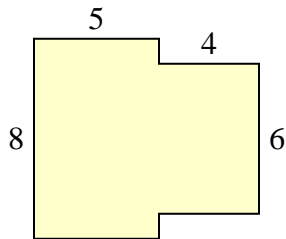
1)



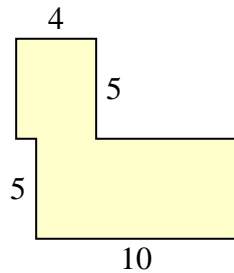
2)



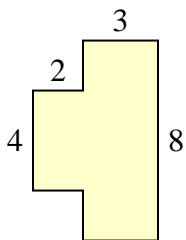
3)



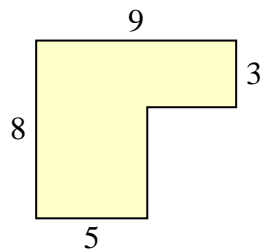
4)



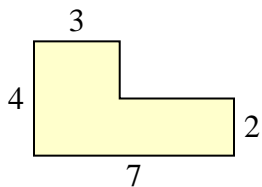
5)



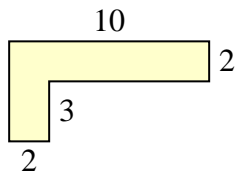
6)



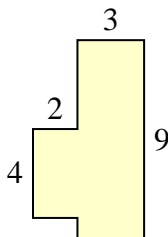
7)



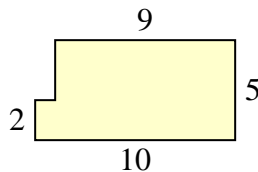
8)



9)



10)



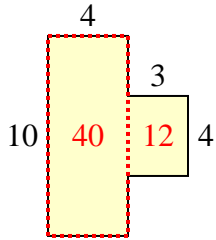
Réponses

- 1. _____
- 2. _____
- 3. _____
- 4. _____
- 5. _____
- 6. _____
- 7. _____
- 8. _____
- 9. _____
- 10. _____

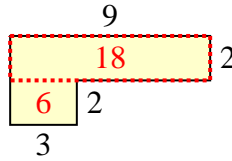


Calculez l'aire totale de chaque figure. Les mesures sont en millimètres (mm).

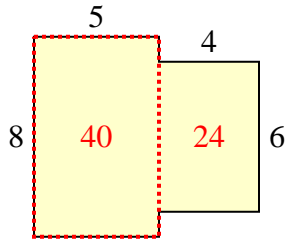
1)



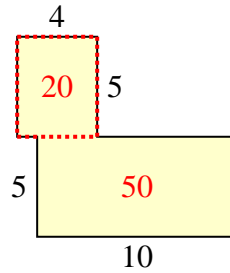
2)



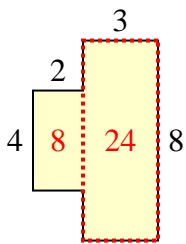
3)



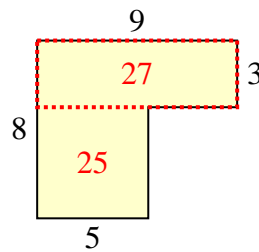
4)



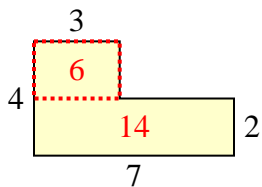
5)



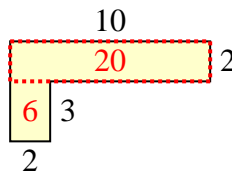
6)



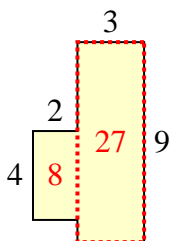
7)



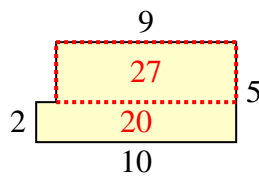
8)



9)



10)

**Réponses**

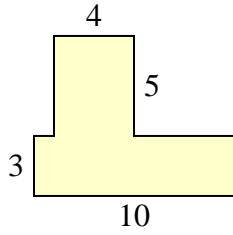
1. 52 mm²
2. 24 mm²
3. 64 mm²
4. 70 mm²
5. 32 mm²
6. 52 mm²
7. 20 mm²
8. 26 mm²
9. 35 mm²
10. 47 mm²



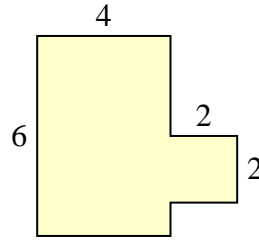
Calculez l'aire totale de chaque figure. Les mesures sont en millimètres (mm).

Réponses

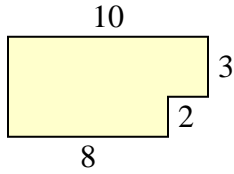
1)



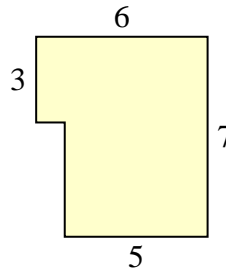
2)



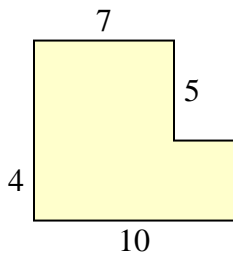
3)



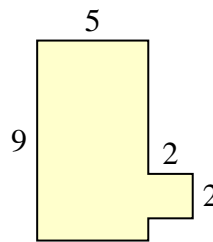
4)



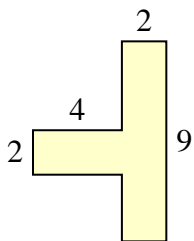
5)



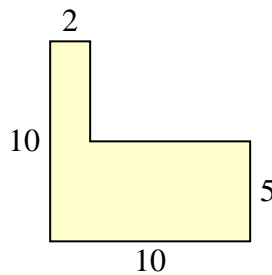
6)



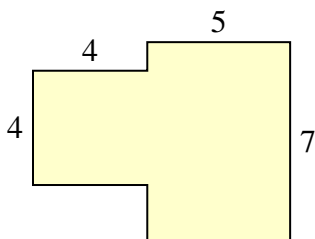
7)



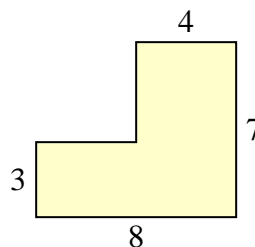
8)



9)



10)

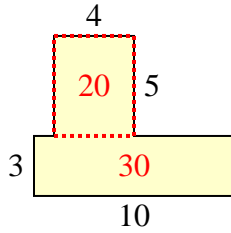


- 1. _____
- 2. _____
- 3. _____
- 4. _____
- 5. _____
- 6. _____
- 7. _____
- 8. _____
- 9. _____
- 10. _____

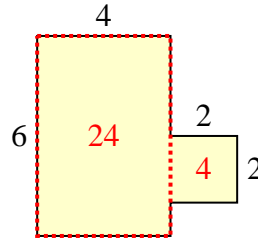


Calculez l'aire totale de chaque figure. Les mesures sont en millimètres (mm).

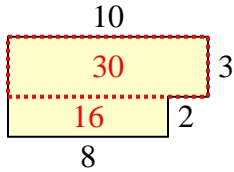
1)



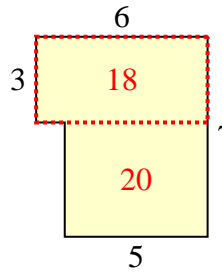
2)



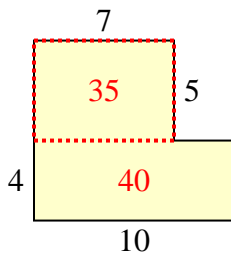
3)



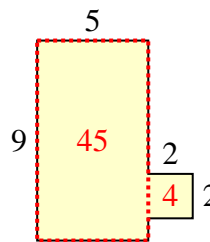
4)



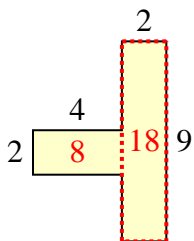
5)



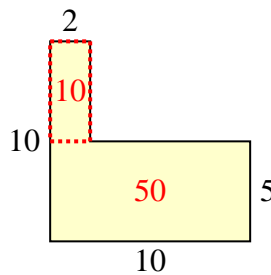
6)



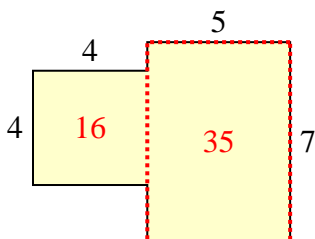
7)



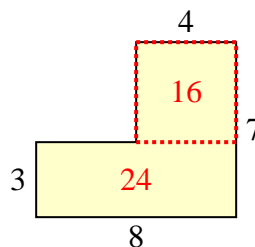
8)



9)



10)

**Réponses**

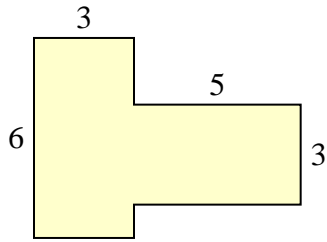
1. 50 mm²
2. 28 mm²
3. 46 mm²
4. 38 mm²
5. 75 mm²
6. 49 mm²
7. 26 mm²
8. 60 mm²
9. 51 mm²
10. 40 mm²



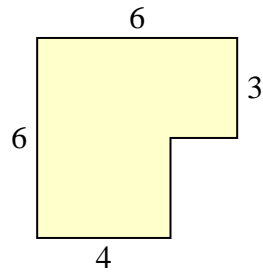
Calculez l'aire totale de chaque figure. Les mesures sont en millimètres (mm).

Réponses

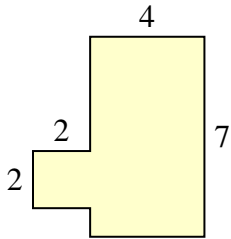
1)



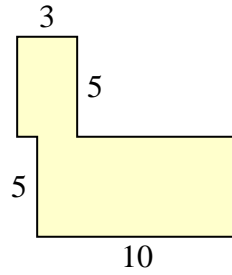
2)



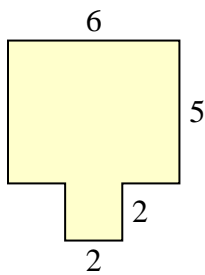
3)



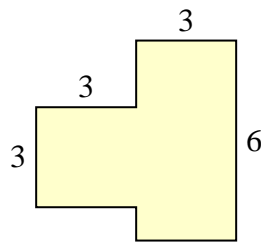
4)



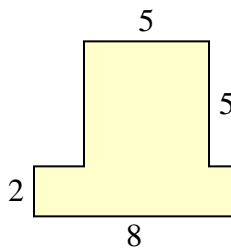
5)



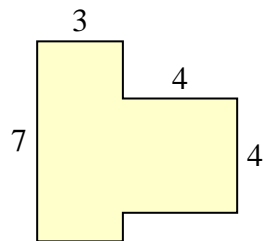
6)



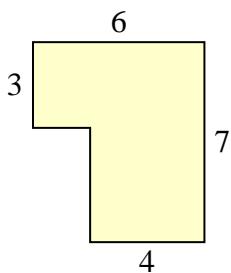
7)



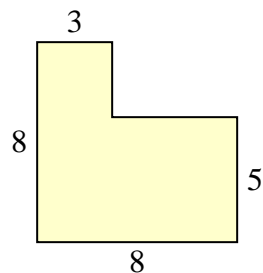
8)



9)



10)

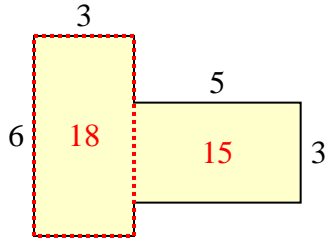


- 1. _____
- 2. _____
- 3. _____
- 4. _____
- 5. _____
- 6. _____
- 7. _____
- 8. _____
- 9. _____
- 10. _____

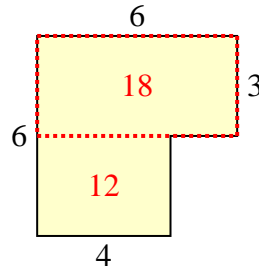


Calculez l'aire totale de chaque figure. Les mesures sont en millimètres (mm).

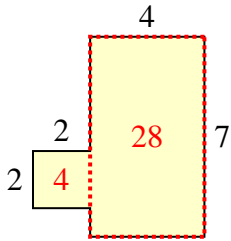
1)



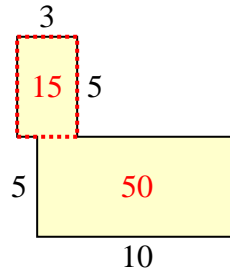
2)



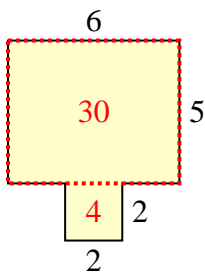
3)



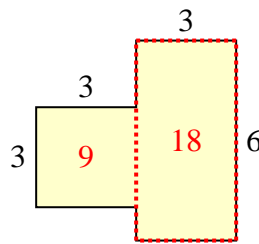
4)



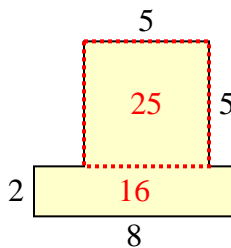
5)



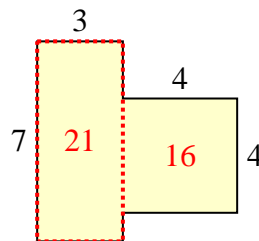
6)



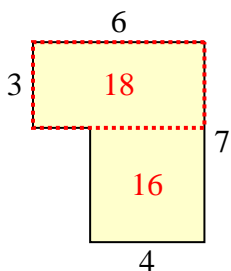
7)



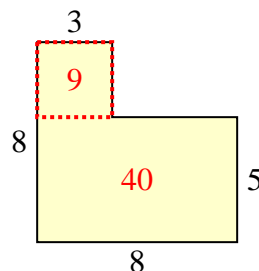
8)



9)



10)

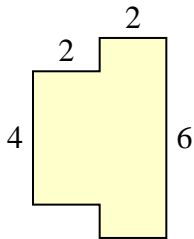
**Réponses**1. 33 mm²2. 30 mm²3. 32 mm²4. 65 mm²5. 34 mm²6. 27 mm²7. 41 mm²8. 37 mm²9. 34 mm²10. 49 mm²



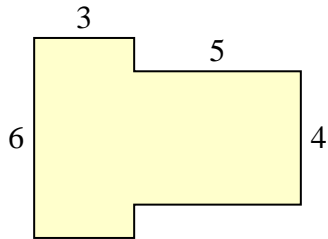
Calculez l'aire totale de chaque figure. Les mesures sont en millimètres (mm).

Réponses

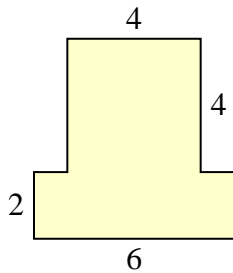
1)



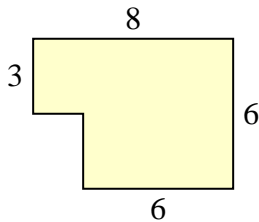
2)



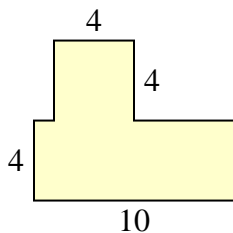
3)



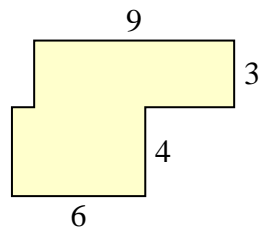
4)



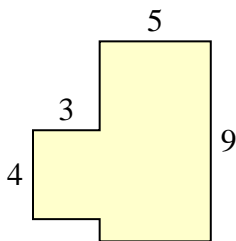
5)



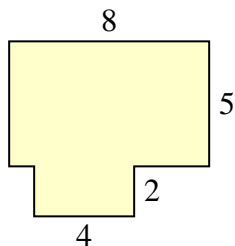
6)



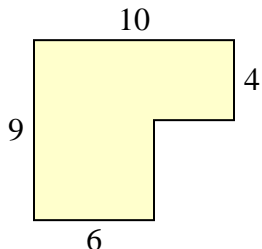
7)



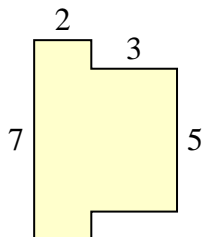
8)



9)



10)

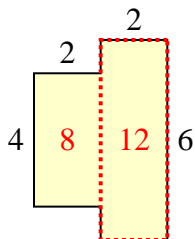


- 1. _____
- 2. _____
- 3. _____
- 4. _____
- 5. _____
- 6. _____
- 7. _____
- 8. _____
- 9. _____
- 10. _____

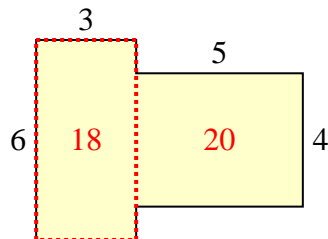


Calculez l'aire totale de chaque figure. Les mesures sont en millimètres (mm).

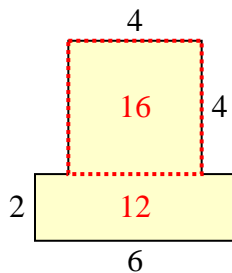
1)



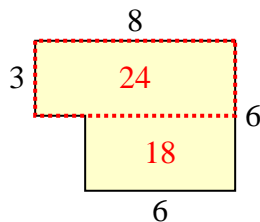
2)



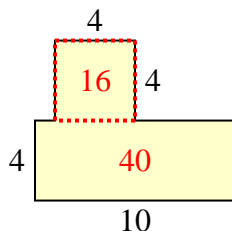
3)



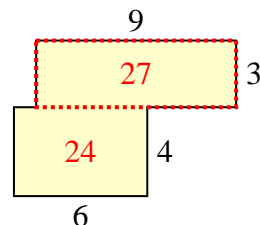
4)



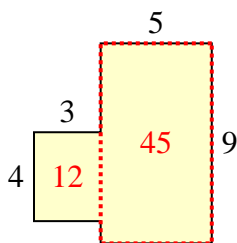
5)



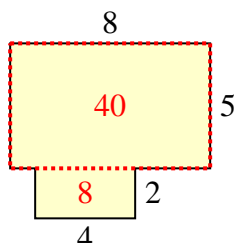
6)



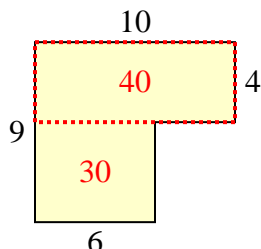
7)



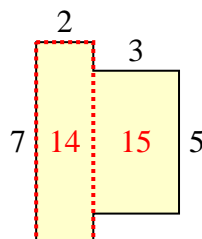
8)



9)



10)

**Réponses**

1. 20 mm²
2. 38 mm²
3. 28 mm²
4. 42 mm²
5. 56 mm²
6. 51 mm²
7. 57 mm²
8. 48 mm²
9. 70 mm²
10. 29 mm²