



**Déterminez la valeur de 'L'. Les données sont en cm.****Réponses**


1) Périmètre = 24




2) Périmètre = 24




3) Périmètre = 24




4) Périmètre = 24




5) Périmètre = 24




6) Périmètre = 24




7) Périmètre = 24




8) Périmètre = 24




9) Périmètre = 24




10) Périmètre = 24




11) Périmètre = 24




12) Périmètre = 24




13) Périmètre = 24



14) Périmètre = 24



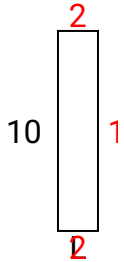
15) Périmètre = 24



1. \_\_\_\_\_
2. \_\_\_\_\_
3. \_\_\_\_\_
4. \_\_\_\_\_
5. \_\_\_\_\_
6. \_\_\_\_\_
7. \_\_\_\_\_
8. \_\_\_\_\_
9. \_\_\_\_\_
10. \_\_\_\_\_
11. \_\_\_\_\_
12. \_\_\_\_\_
13. \_\_\_\_\_
14. \_\_\_\_\_
15. \_\_\_\_\_

**Déterminez la valeur de 'L'. Les données sont en cm.****Réponses**


1) Périmètre = 24



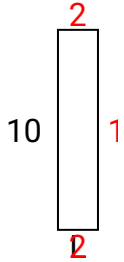
2) Périmètre = 24



3) Périmètre = 24




4) Périmètre = 24



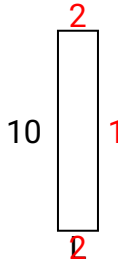
5) Périmètre = 24



6) Périmètre = 24




7) Périmètre = 24



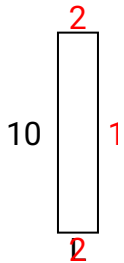
8) Périmètre = 24



9) Périmètre = 24




10) Périmètre = 24



11) Périmètre = 24



12) Périmètre = 24




13) Périmètre = 24



14) Périmètre = 24




15) Périmètre = 24

1. **2 cm**2. **2 cm**3. **2 cm**4. **2 cm**5. **2 cm**6. **2 cm**7. **2 cm**8. **2 cm**9. **2 cm**10. **2 cm**11. **2 cm**12. **2 cm**13. **2 cm**14. **2 cm**15. **2 cm**




Déterminez la valeur de 'L'. Les données sont en cm.


1) Périmètre = 24




2) Périmètre = 24




3) Périmètre = 24




4) Périmètre = 24




5) Périmètre = 24




6) Périmètre = 24



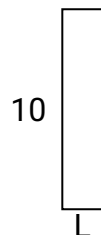
7) Périmètre = 24



8) Périmètre = 24



9) Périmètre = 24



**Réponses**

1. \_\_\_\_\_
2. \_\_\_\_\_
3. \_\_\_\_\_
4. \_\_\_\_\_
5. \_\_\_\_\_
6. \_\_\_\_\_
7. \_\_\_\_\_
8. \_\_\_\_\_
9. \_\_\_\_\_