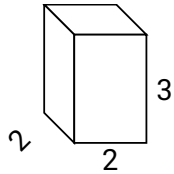




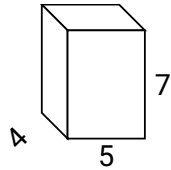
Calculez la surface de chaque figure géométrique. Les unités sont en cm.

Réponses

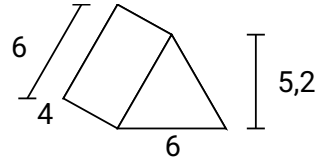
Ex)



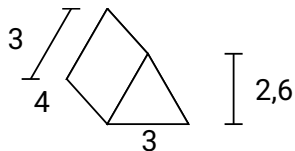
1)



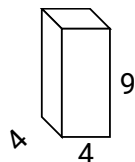
2)



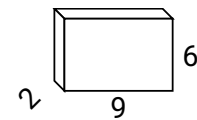
3)



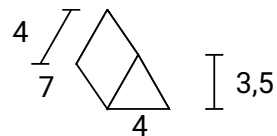
4)



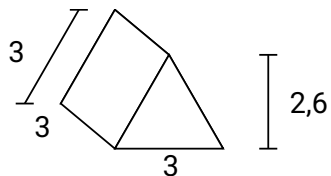
5)



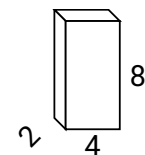
6)



7)



8)



Ex. **32**

1. _____

2. _____

3. _____

4. _____

5. _____

6. _____

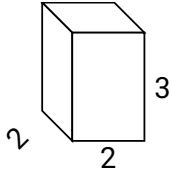
7. _____

8. _____

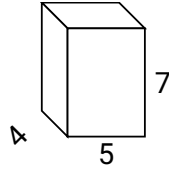


Calculez la surface de chaque figure géométrique. Les unités sont en cm.

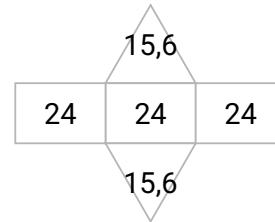
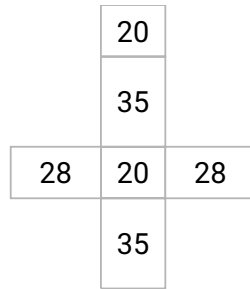
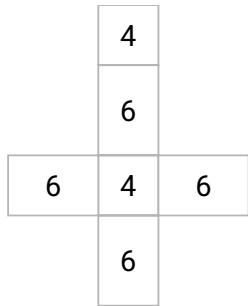
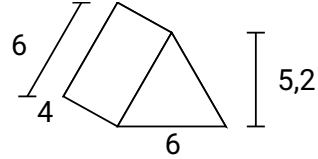
Ex)



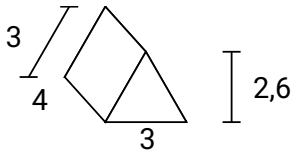
1)



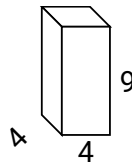
2)



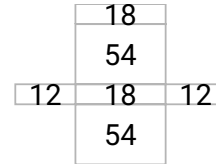
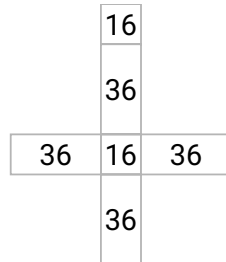
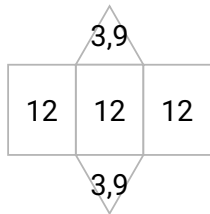
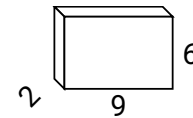
3)



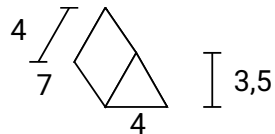
4)



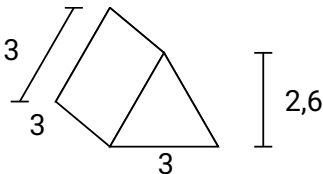
5)



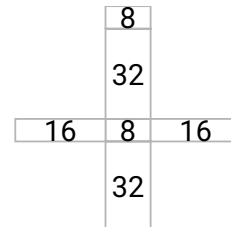
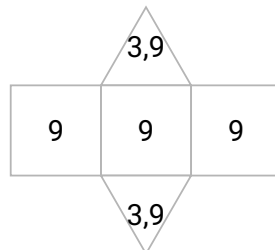
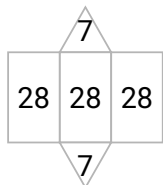
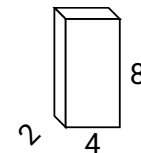
6)



7)



8)

**Réponses**Ex. **32**1. **166**2. **103,2**3. **43,8**4. **176**5. **168**6. **98**7. **34,8**8. **112**