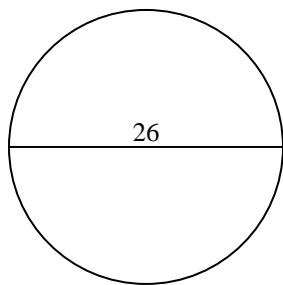




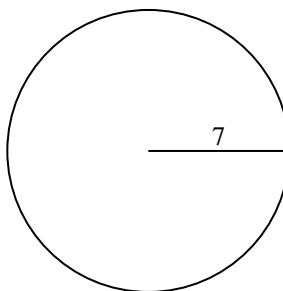
Calculez l'aire et la circonférence de chaque cercle. Les cercles ne sont pas à l'échelle.

Réponses

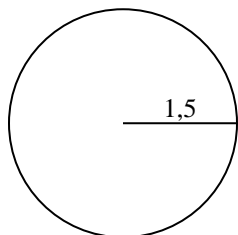
1)



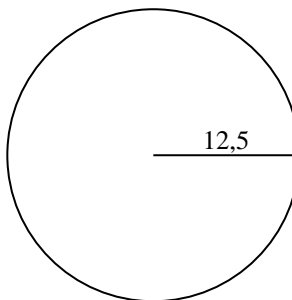
2)



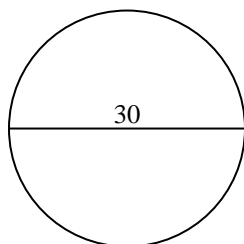
3)



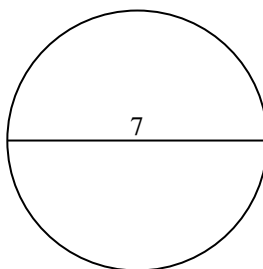
4)



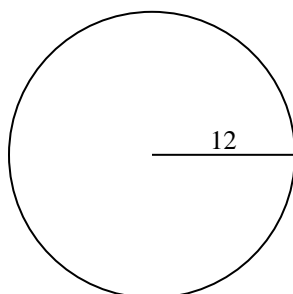
5)



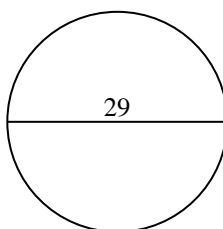
6)



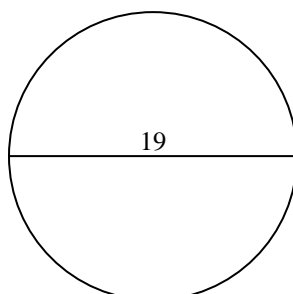
7)



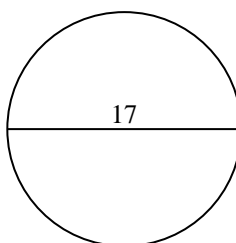
8)



9)



10)

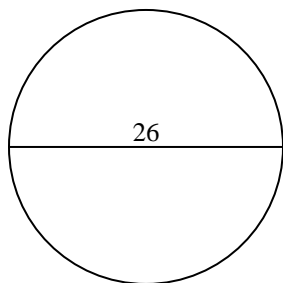


1. _____
2. _____
3. _____
4. _____
5. _____
6. _____
7. _____
8. _____
9. _____
10. _____

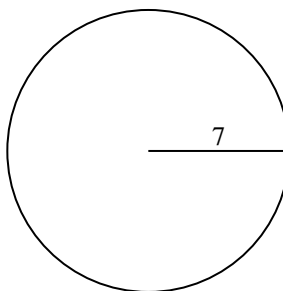


Calculez l'aire et la circonférence de chaque cercle. Les cercles ne sont pas à l'échelle.

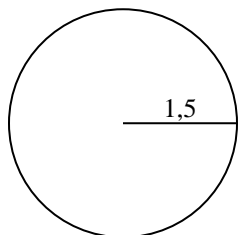
1)



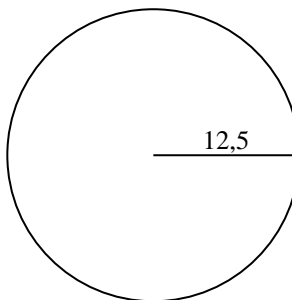
2)



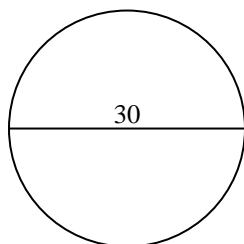
3)



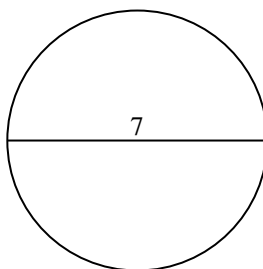
4)



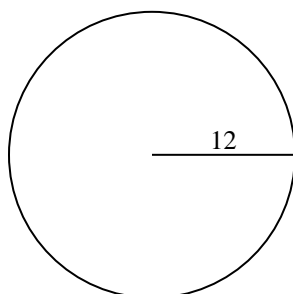
5)



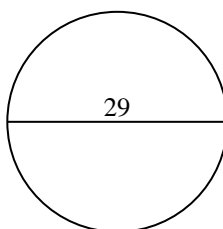
6)



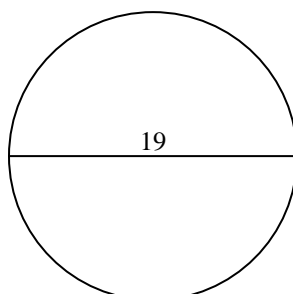
7)



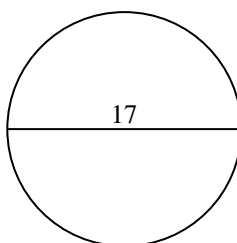
8)



9)



10)

**Réponses**

1.	<u>530,9</u>	<u>81,7</u>
2.	<u>153,9</u>	<u>44</u>
3.	<u>7,1</u>	<u>9,4</u>
4.	<u>490,9</u>	<u>78,5</u>
5.	<u>706,9</u>	<u>94,2</u>
6.	<u>38,5</u>	<u>22</u>
7.	<u>452,4</u>	<u>75,4</u>
8.	<u>660,5</u>	<u>91,1</u>
9.	<u>283,5</u>	<u>59,7</u>
10.	<u>227</u>	<u>53,4</u>

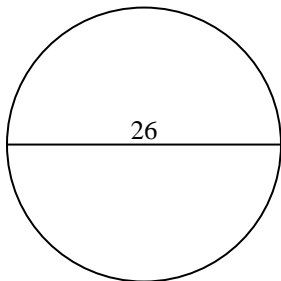


Calculez l'aire et la circonférence de chaque cercle. Les cercles ne sont pas à l'échelle.

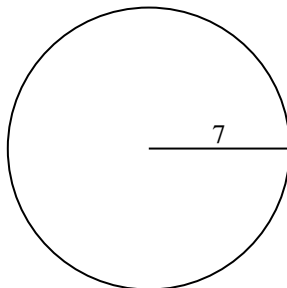
Réponses

7,1	75,4	44	283,5	153,9
706,9	452,4	94,2	81,7	9,4
91,1	78,5	660,5	22	530,9
38,5	59,7	490,9		

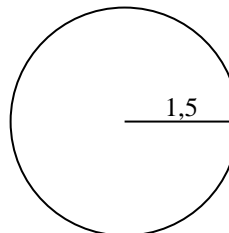
1)



2)



3)



1. _____

2. _____

3. _____

4. _____

5. _____

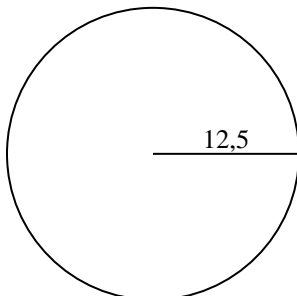
6. _____

7. _____

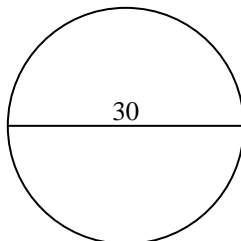
8. _____

9. _____

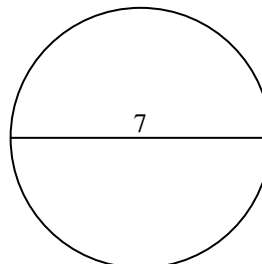
4)



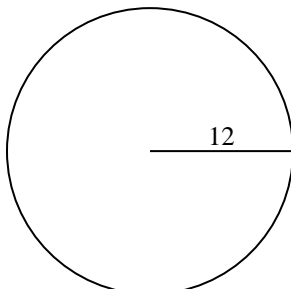
5)



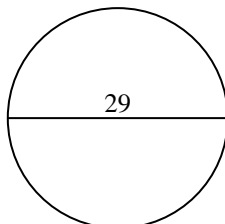
6)



7)



8)



9)

