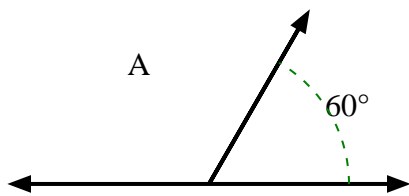




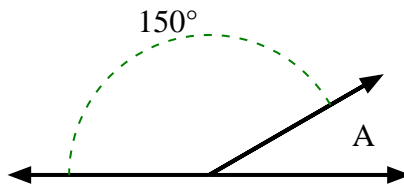
Trouvez la valeur de 'A' dans l'ensemble des angles supplémentaires.

**Réponses**

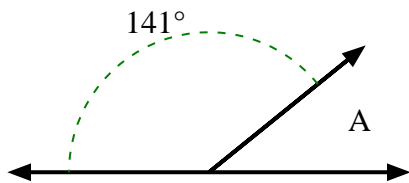
1)



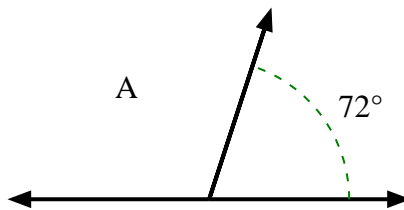
2)



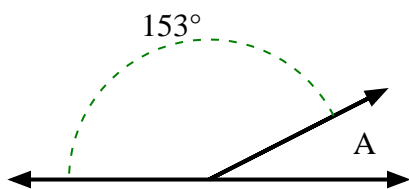
3)



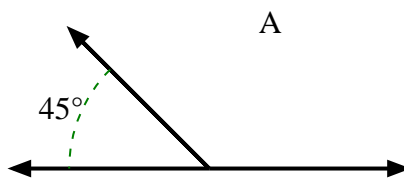
4)



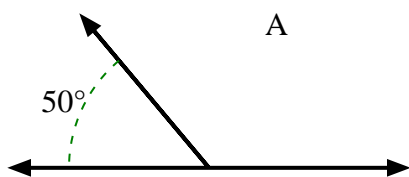
5)



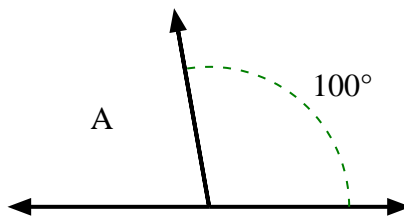
6)



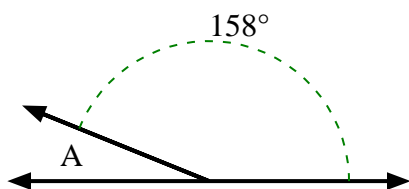
7)



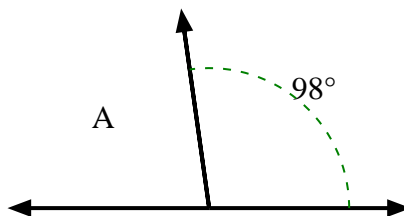
8)



9)



10)

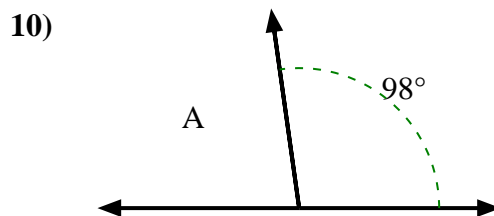
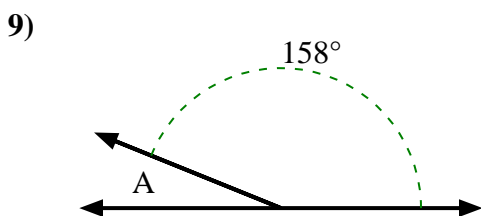
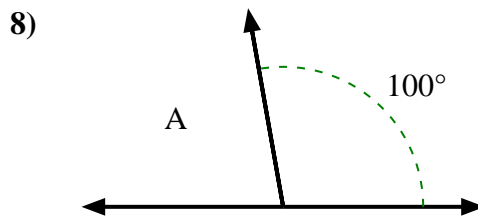
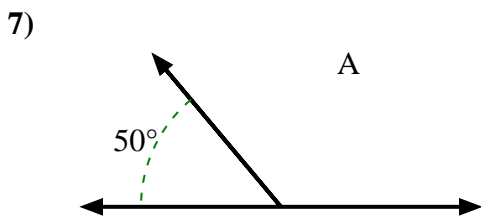
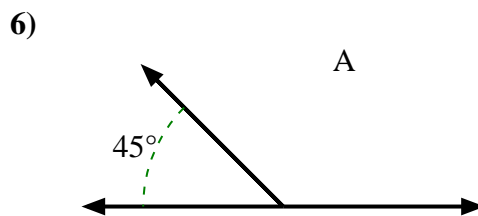
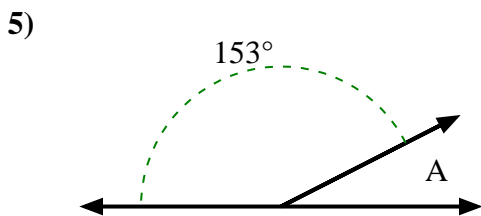
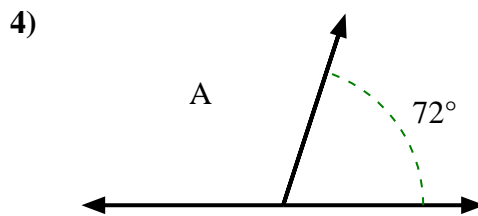
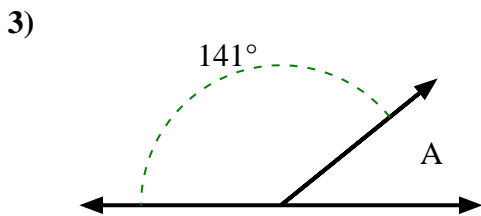
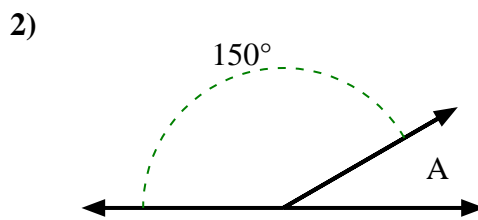
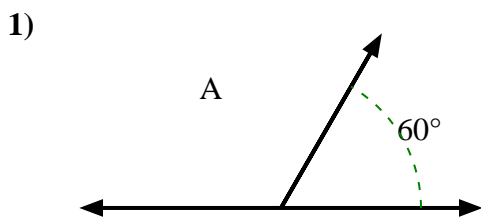


- 1. \_\_\_\_\_
- 2. \_\_\_\_\_
- 3. \_\_\_\_\_
- 4. \_\_\_\_\_
- 5. \_\_\_\_\_
- 6. \_\_\_\_\_
- 7. \_\_\_\_\_
- 8. \_\_\_\_\_
- 9. \_\_\_\_\_
- 10. \_\_\_\_\_



Trouvez la valeur de 'A' dans l'ensemble des angles supplémentaires.

**Réponses**



1. 120°
2. 30°
3. 39°
4. 108°
5. 27°
6. 135°
7. 130°
8. 80°
9. 22°
10. 82°