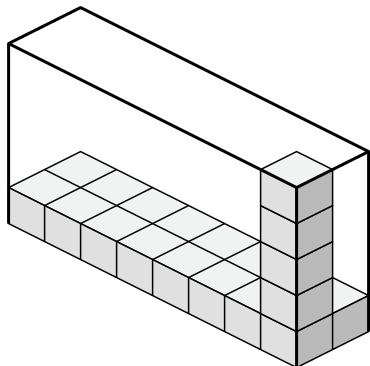




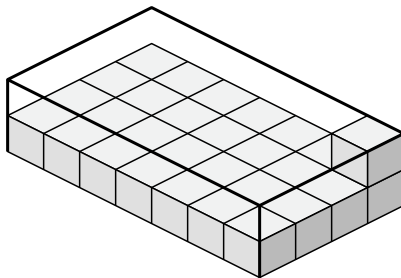
Créez une expression pour déterminer le volume de chaque boîte.

Réponses

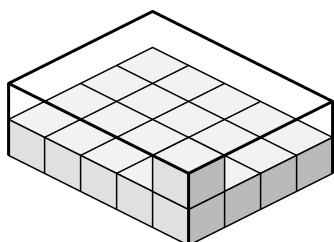
1)



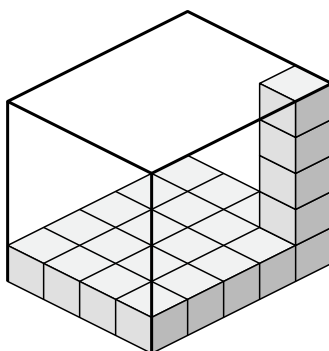
2)



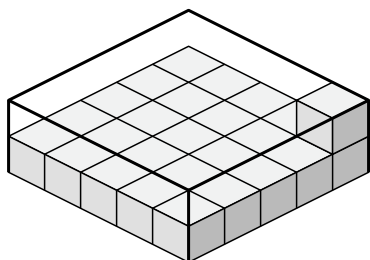
3)



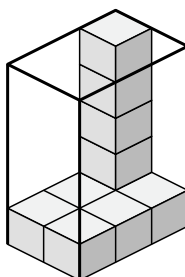
4)



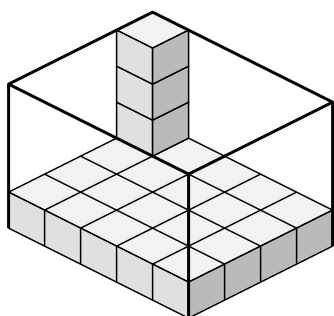
5)



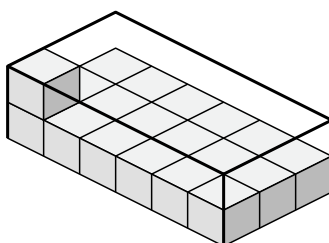
6)



7)



8)



1. _____

2. _____

3. _____

4. _____

5. _____

6. _____

7. _____

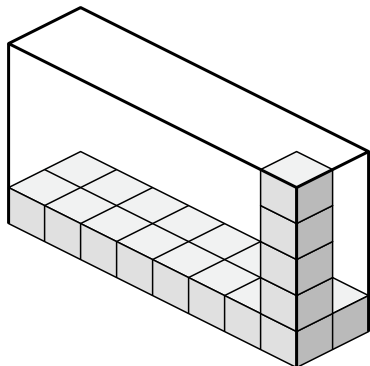
8. _____



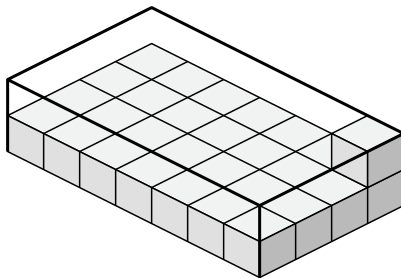
Créez une expression pour déterminer le volume de chaque boîte.

Réponses

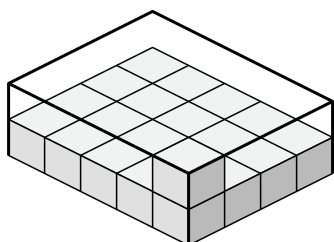
1)



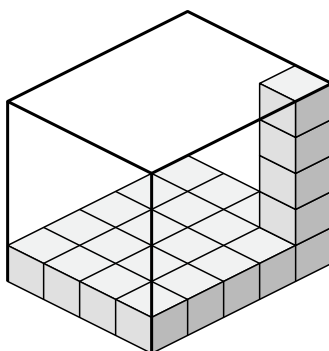
2)



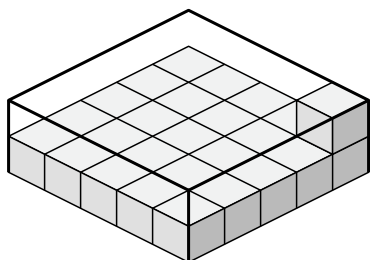
3)



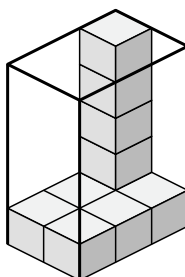
4)



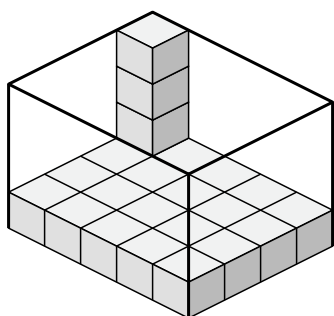
5)



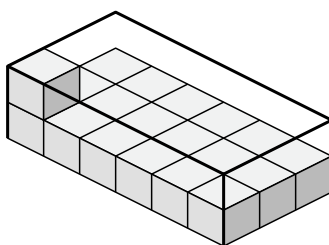
6)



7)



8)



1. $8 \times 2 \times 5$

2. $7 \times 4 \times 2$

3. $5 \times 4 \times 2$

4. $4 \times 5 \times 5$

5. $5 \times 5 \times 2$

6. $2 \times 3 \times 5$

7. $5 \times 4 \times 4$

8. $6 \times 3 \times 2$