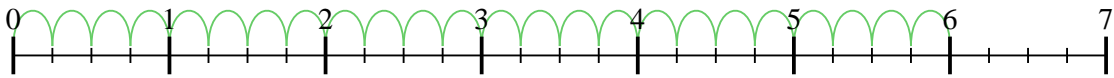


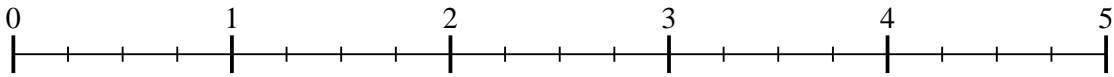


Utilisez la droite numérique pour résoudre chaque problème. Le premier est résolu.

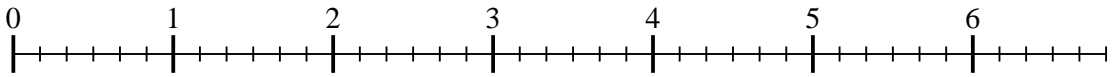
1) $6 \div \frac{1}{4}$



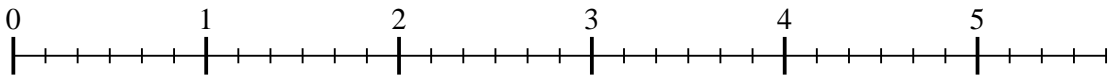
2) $4 \div \frac{1}{4}$



3) $6 \div \frac{1}{6}$



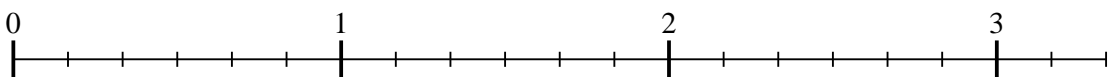
4) $5 \div \frac{1}{6}$



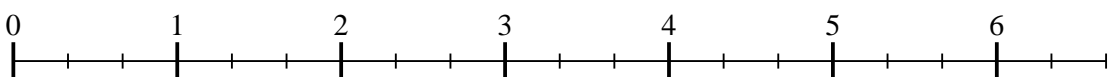
5) $7 \div \frac{1}{4}$



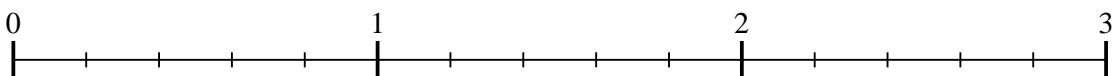
6) $3 \div \frac{1}{6}$



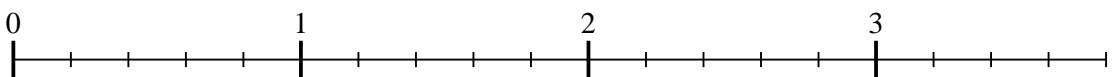
7) $6 \div \frac{1}{3}$



8) $2 \div \frac{1}{5}$



9) $3 \div \frac{1}{5}$

**Réponses**

1. _____

2. _____

3. _____

4. _____

5. _____

6. _____

7. _____

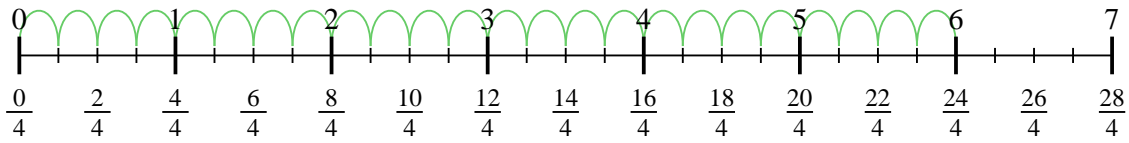
8. _____

9. _____

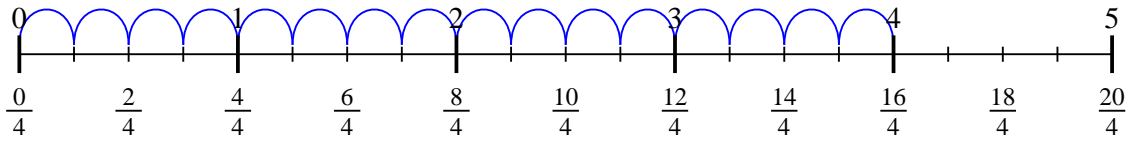


Utilisez la droite numérique pour résoudre chaque problème. Le premier est résolu.

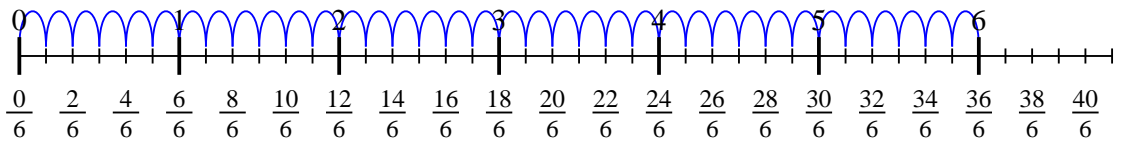
1) $6 \div \frac{1}{4}$



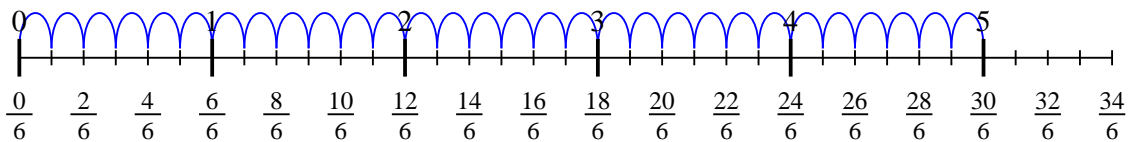
2) $4 \div \frac{1}{4}$



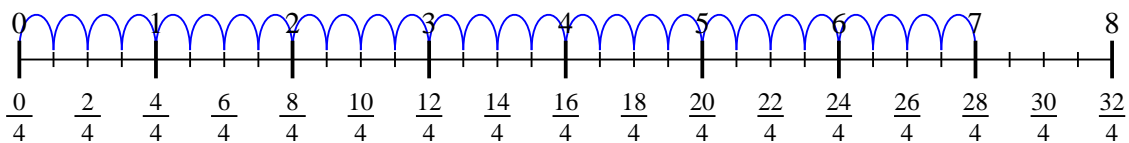
3) $6 \div \frac{1}{6}$



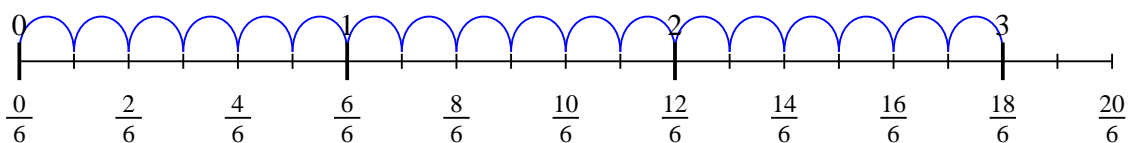
4) $5 \div \frac{1}{6}$



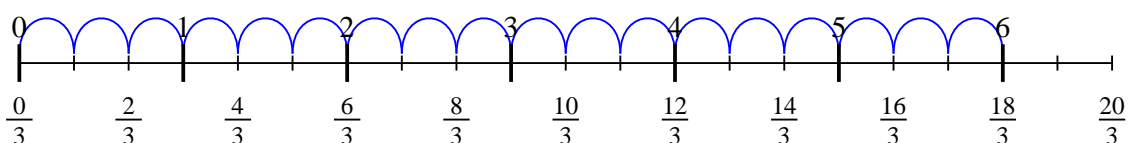
5) $7 \div \frac{1}{4}$



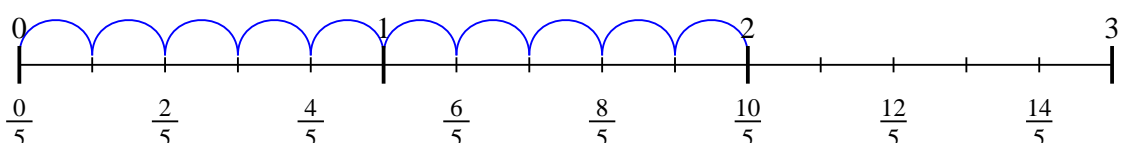
6) $3 \div \frac{1}{6}$



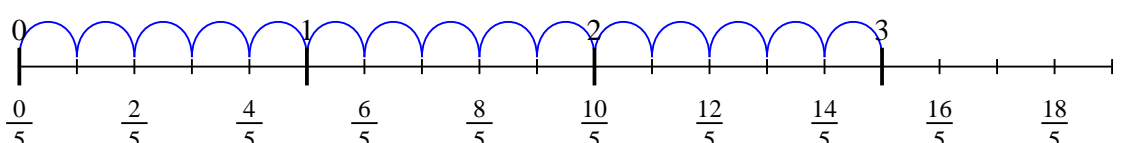
7) $6 \div \frac{1}{3}$



8) $2 \div \frac{1}{5}$



9) $3 \div \frac{1}{5}$

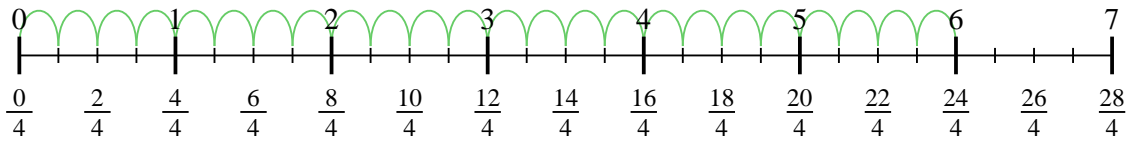
**Réponses**1. 242. 163. 364. 305. 286. 187. 188. 109. 15



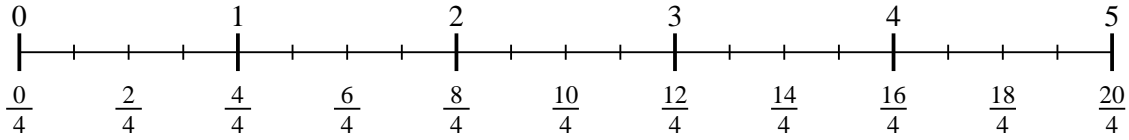
Utilisez la droite numérique pour résoudre chaque problème. Le premier est résolu.

Réponses

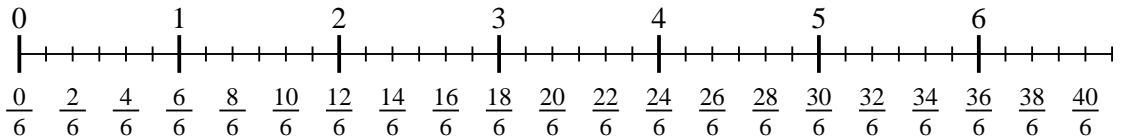
1) $6 \div \frac{1}{4}$



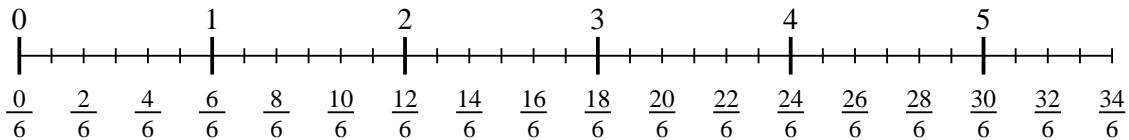
2) $4 \div \frac{1}{4}$



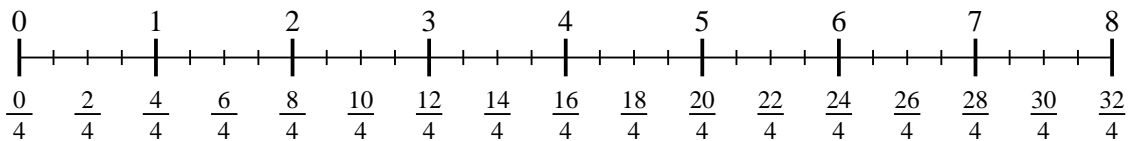
3) $6 \div \frac{1}{6}$



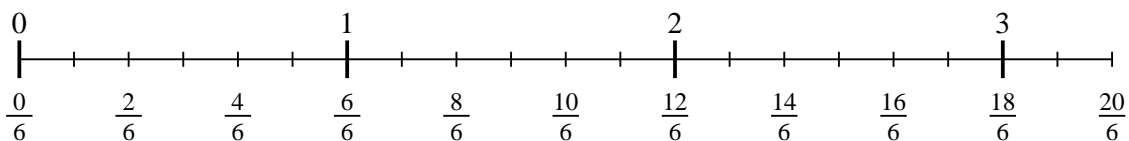
4) $5 \div \frac{1}{6}$



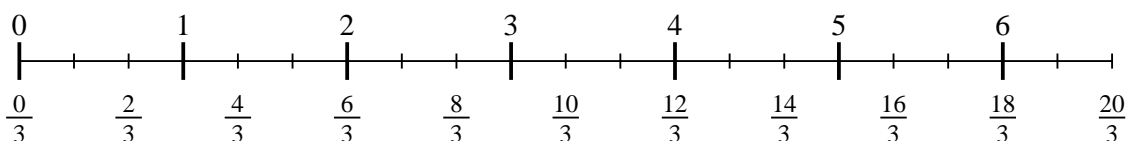
5) $7 \div \frac{1}{4}$



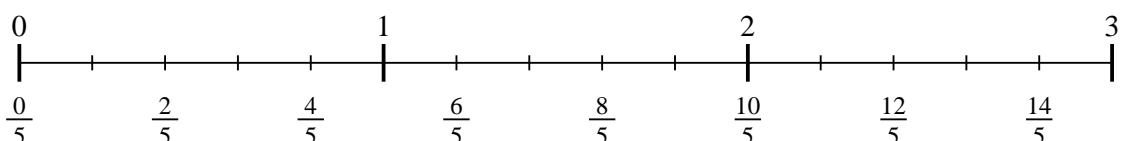
6) $3 \div \frac{1}{6}$



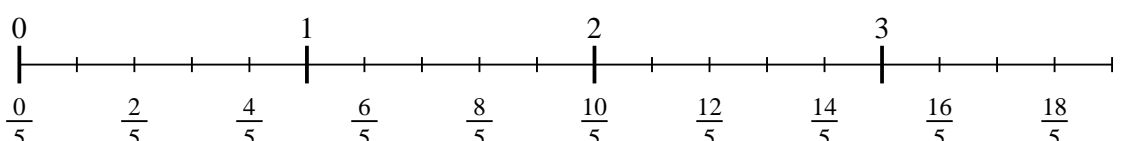
7) $6 \div \frac{1}{3}$



8) $2 \div \frac{1}{5}$



9) $3 \div \frac{1}{5}$



1. _____

2. _____

3. _____

4. _____

5. _____

6. _____

7. _____

8. _____

9. _____