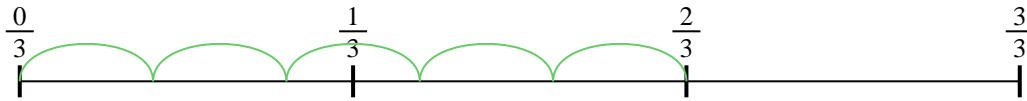




Utilisez la droite numérique pour résoudre chaque problème. Le premier est résolu.

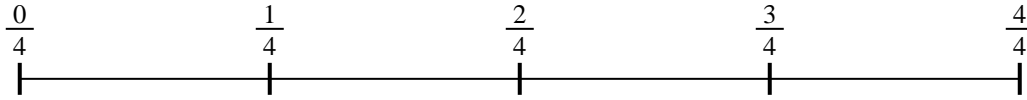
Réponses

1) $\frac{2}{3} \div 5$




1. _____

2) $\frac{3}{4} \div 2$




2. _____

3) $\frac{2}{7} \div 4$



3. _____

4) $\frac{2}{3} \div 2$



4. _____

5) $\frac{2}{3} \div 3$



5. _____

6) $\frac{4}{5} \div 2$




6. _____

7) $\frac{4}{7} \div 5$



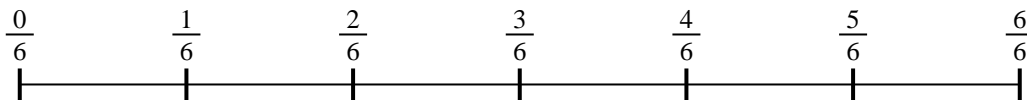
7. _____

8) $\frac{4}{5} \div 3$



8. _____

9) $\frac{5}{6} \div 2$



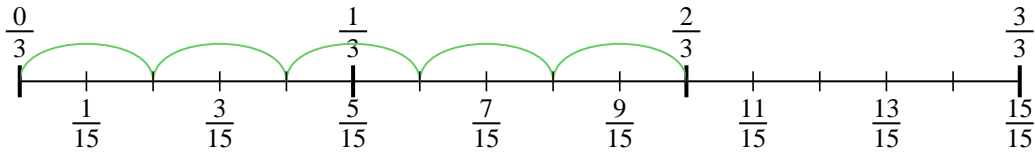
9. _____



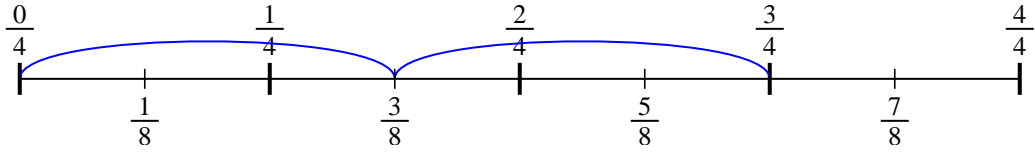
Utilisez la droite numérique pour résoudre chaque problème. Le premier est résolu.

Réponses

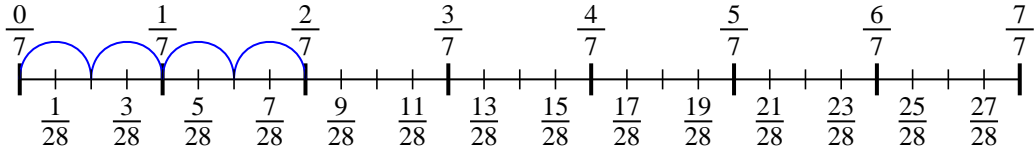
1) $\frac{2}{3} \div 5$



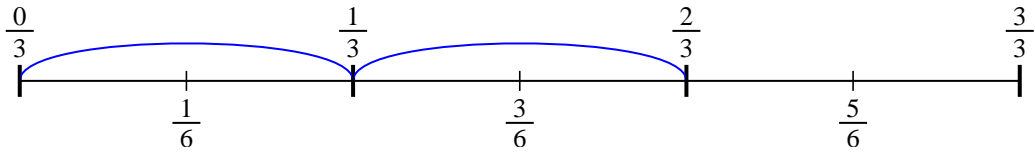
2) $\frac{3}{4} \div 2$



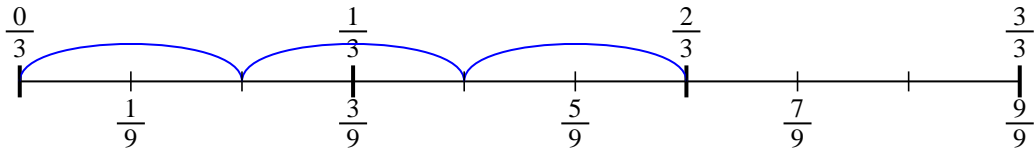
3) $\frac{2}{7} \div 4$



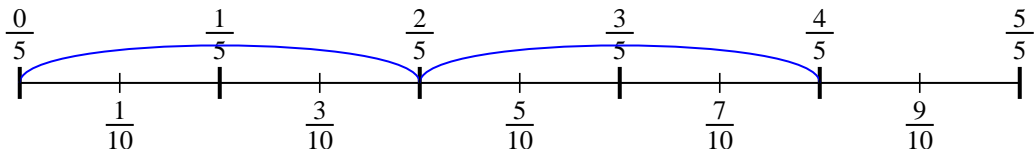
4) $\frac{2}{3} \div 2$



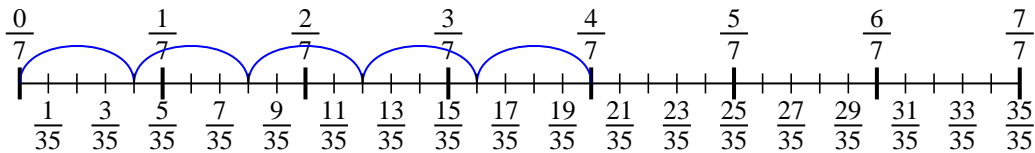
5) $\frac{2}{3} \div 3$



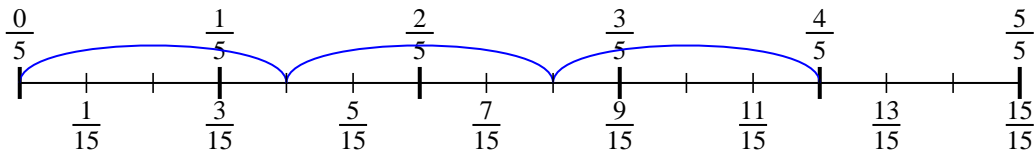
6) $\frac{4}{5} \div 2$



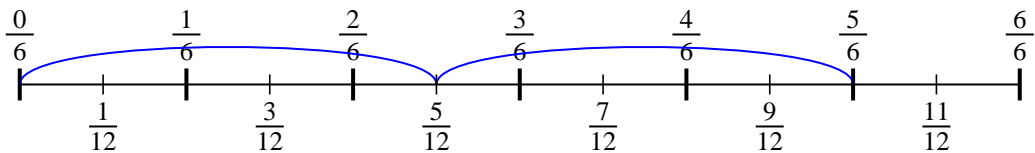
7) $\frac{4}{7} \div 5$



8) $\frac{4}{5} \div 3$



9) $\frac{5}{6} \div 2$



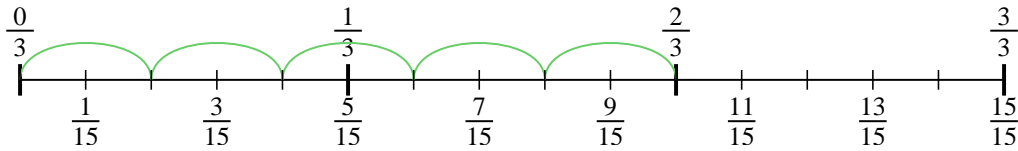
1. $\frac{2}{15}$
2. $\frac{3}{8}$
3. $\frac{2}{28}$
4. $\frac{2}{6}$
5. $\frac{2}{9}$
6. $\frac{4}{10}$
7. $\frac{4}{35}$
8. $\frac{4}{15}$
9. $\frac{5}{12}$



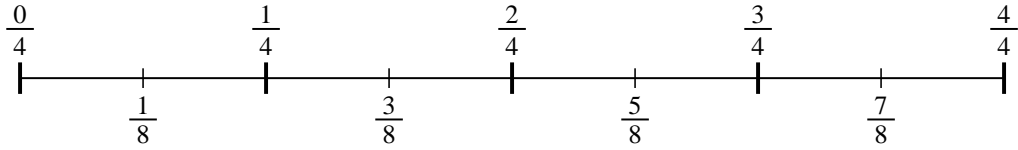
Utilisez la droite numérique pour résoudre chaque problème. Le premier est résolu.

Réponses

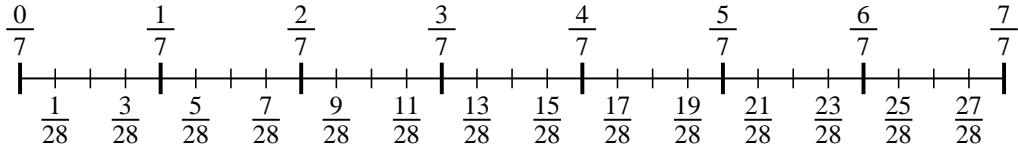
1) $\frac{2}{3} \div 5$



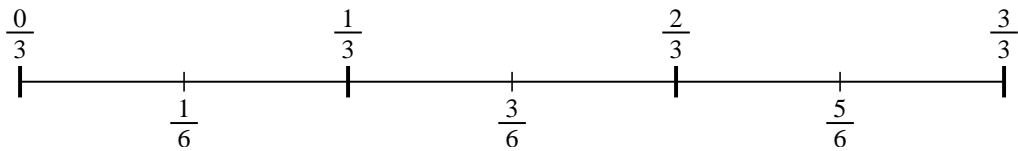
2) $\frac{3}{4} \div 2$



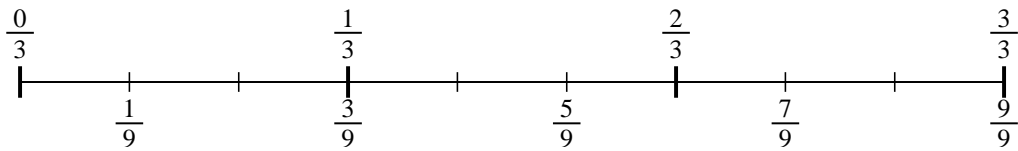
3) $\frac{2}{7} \div 4$



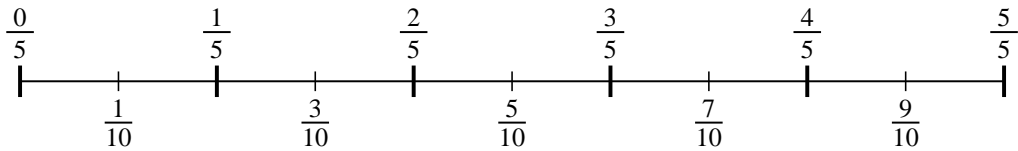
4) $\frac{2}{3} \div 2$



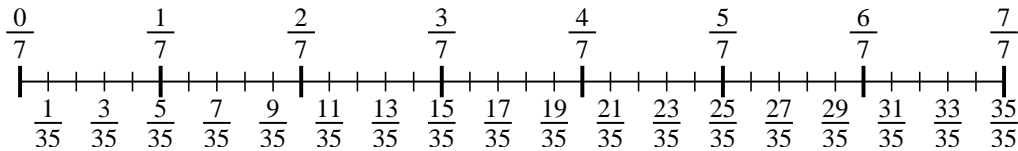
5) $\frac{2}{3} \div 3$



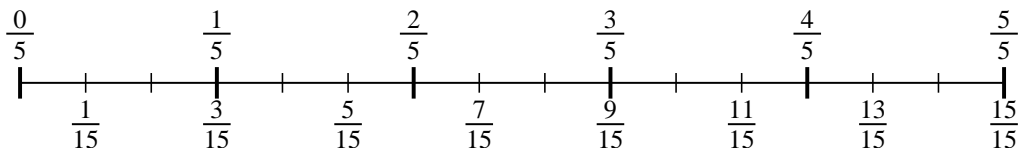
6) $\frac{4}{5} \div 2$



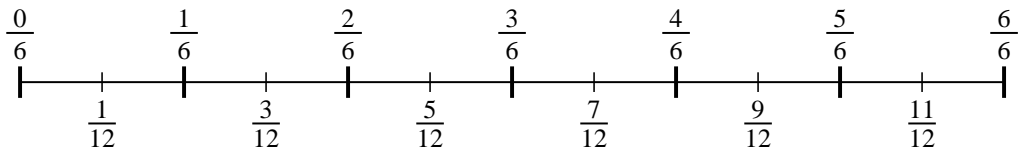
7) $\frac{4}{7} \div 5$



8) $\frac{4}{5} \div 3$



9) $\frac{5}{6} \div 2$



1. _____
2. _____
3. _____
4. _____
5. _____
6. _____
7. _____
8. _____
9. _____