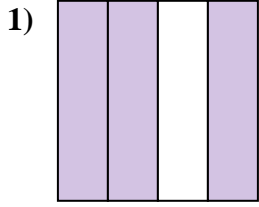


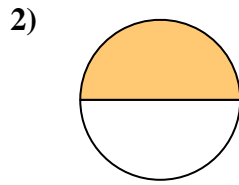


Déterminez quelle lettre représente le mieux la partie colorée de la figure.

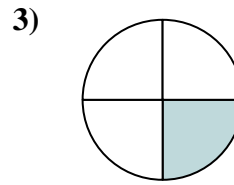
**Réponses**



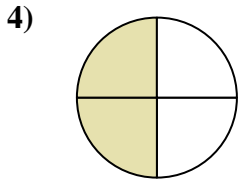
- A. deux demis
- B. deux quarts
- C. trois quarts



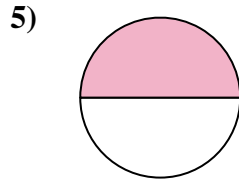
- A. deux demis
- B. trois quarts
- C. un demi



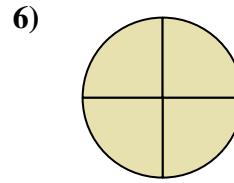
- A. un quart
- B. un demi
- C. trois quarts



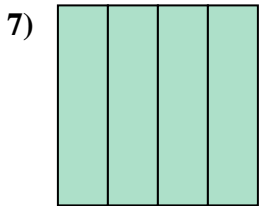
- A. deux demis
- B. trois quarts
- C. deux quarts



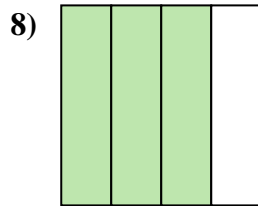
- A. quatre quarts
- B. un demi
- C. deux demis



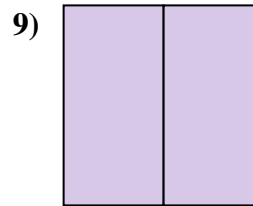
- A. trois quarts
- B. un quart
- C. quatre quarts



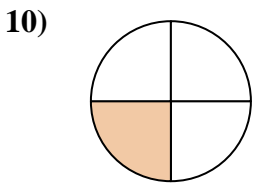
- A. un quart
- B. quatre quarts
- C. trois quarts



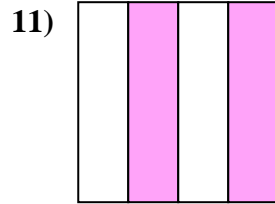
- A. deux demis
- B. un demi
- C. trois quarts



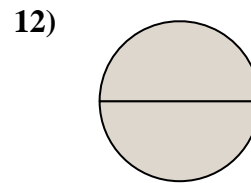
- A. un demi
- B. un quart
- C. deux demis



- A. un quart
- B. quatre quarts
- C. deux quarts



- A. deux quarts
- B. deux demis
- C. un quart



- A. deux demis
- B. un demi
- C. un quart

1. \_\_\_\_\_

2. \_\_\_\_\_

3. \_\_\_\_\_

4. \_\_\_\_\_

5. \_\_\_\_\_

6. \_\_\_\_\_

7. \_\_\_\_\_

8. \_\_\_\_\_

9. \_\_\_\_\_

10. \_\_\_\_\_

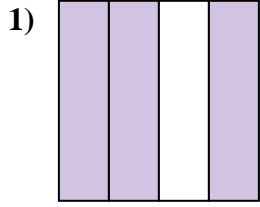
11. \_\_\_\_\_

12. \_\_\_\_\_

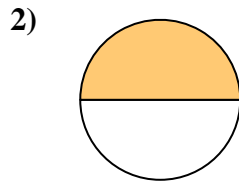


Déterminez quelle lettre représente le mieux la partie colorée de la figure.

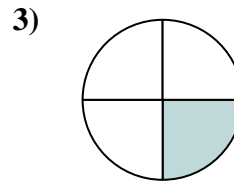
**Réponses**



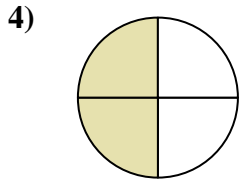
- A. deux demis
- B. deux quarts
- C. trois quarts



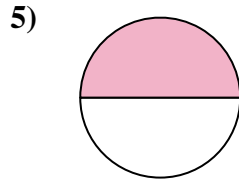
- A. deux demis
- B. trois quarts
- C. un demi



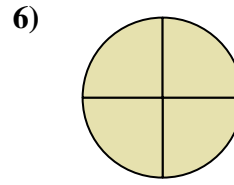
- A. un quart
- B. un demi
- C. trois quarts



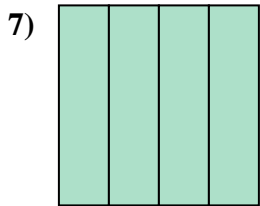
- A. deux demis
- B. trois quarts
- C. deux quarts



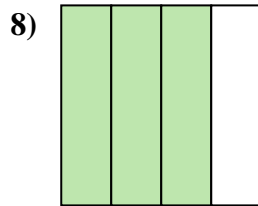
- A. quatre quarts
- B. un demi
- C. deux demis



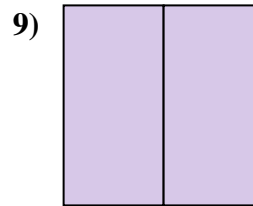
- A. trois quarts
- B. un quart
- C. quatre quarts



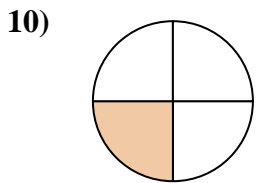
- A. un quart
- B. quatre quarts
- C. trois quarts



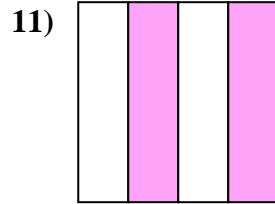
- A. deux demis
- B. un demi
- C. trois quarts



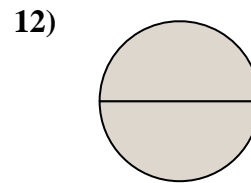
- A. un demi
- B. un quart
- C. deux demis



- A. un quart
- B. quatre quarts
- C. deux quarts



- A. deux quarts
- B. deux demis
- C. un quart



- A. deux demis
- B. un demi
- C. un quart

1.   **C**  

2.   **C**  

3.   **A**  

4.   **C**  

5.   **B**  

6.   **C**  

7.   **B**  

8.   **C**  

9.   **C**  

10.   **A**  

11.   **A**  

12.   **A**