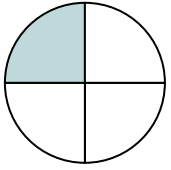




Déterminez quelle lettre représente le mieux la partie colorée de la figure.

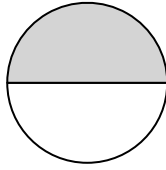
**Réponses**

1)



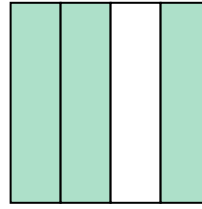
- A. quatre quarts
- B. un quart
- C. un demi

2)



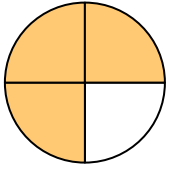
- A. un demi
- B. deux demis
- C. deux tiers

3)



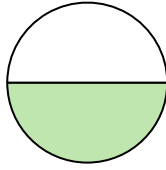
- A. trois quarts
- B. deux tiers
- C. quatre quarts

4)




- A. quatre quarts
- B. un tiers
- C. trois quarts

5)



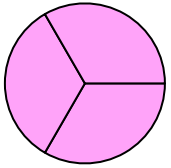
- A. un demi
- B. trois tiers
- C. deux tiers

6)



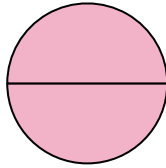
- A. deux tiers
- B. deux demis
- C. un demi

7)



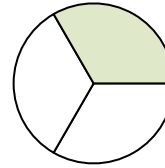
- A. trois quarts
- B. un demi
- C. trois tiers

8)



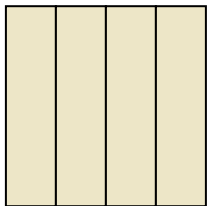
- A. deux quarts
- B. deux demis
- C. un demi

9)



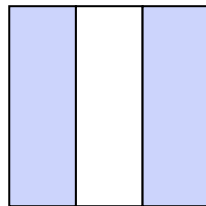
- A. un demi
- B. trois tiers
- C. un tiers

10)



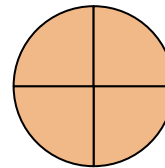
- A. deux tiers
- B. quatre quarts
- C. un tiers

11)



- A. deux tiers
- B. deux quarts
- C. un demi

12)



- A. trois quarts
- B. quatre quarts
- C. un quart

1. \_\_\_\_\_

2. \_\_\_\_\_

3. \_\_\_\_\_

4. \_\_\_\_\_

5. \_\_\_\_\_

6. \_\_\_\_\_

7. \_\_\_\_\_

8. \_\_\_\_\_

9. \_\_\_\_\_

10. \_\_\_\_\_

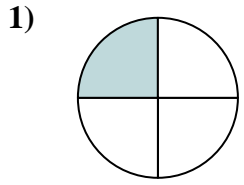
11. \_\_\_\_\_

12. \_\_\_\_\_

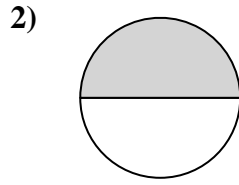


Déterminez quelle lettre représente le mieux la partie colorée de la figure.

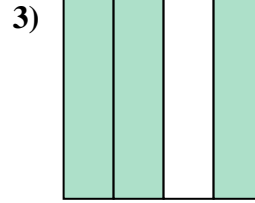
**Réponses**



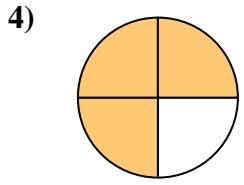
- A. quatre quarts
- B. un quart
- C. un demi



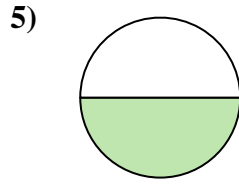
- A. un demi
- B. deux demis
- C. deux tiers



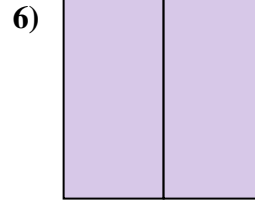
- A. trois quarts
- B. deux tiers
- C. quatre quarts



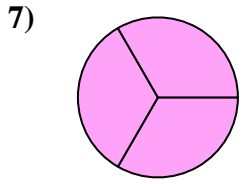
- A. quatre quarts
- B. un tiers
- C. trois quarts



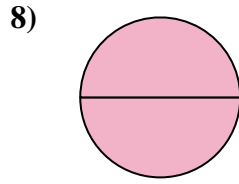
- A. un demi
- B. trois tiers
- C. deux tiers



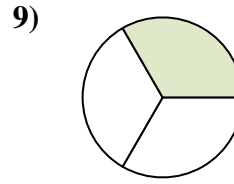
- A. deux tiers
- B. deux demis
- C. un demi



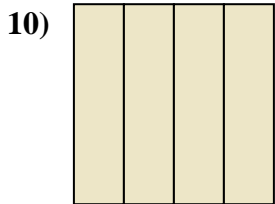
- A. trois quarts
- B. un demi
- C. trois tiers



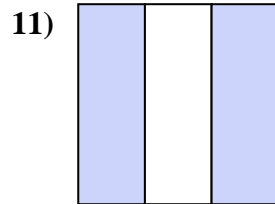
- A. deux quarts
- B. deux demis
- C. un demi



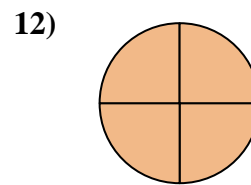
- A. un demi
- B. trois tiers
- C. un tiers



- A. deux tiers
- B. quatre quarts
- C. un tiers



- A. deux tiers
- B. deux quarts
- C. un demi



- A. trois quarts
- B. quatre quarts
- C. un quart

- 1.   **B**
- 2.   **A**
- 3.   **A**
- 4.   **C**
- 5.   **A**
- 6.   **B**
- 7.   **C**
- 8.   **B**
- 9.   **C**
- 10.   **B**
- 11.   **A**
- 12.   **B**