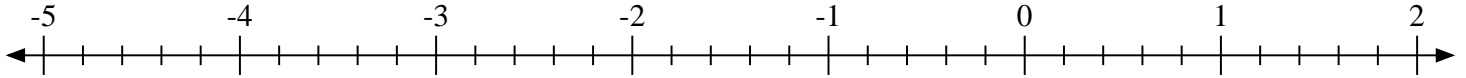


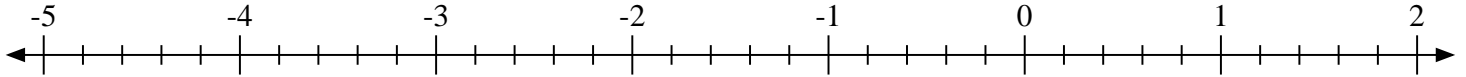


Indiquez la position de chaque fraction.

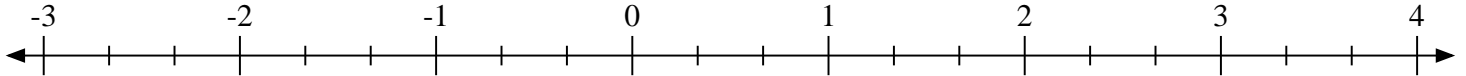
1) Indiquez la position de $1\frac{2}{5}$



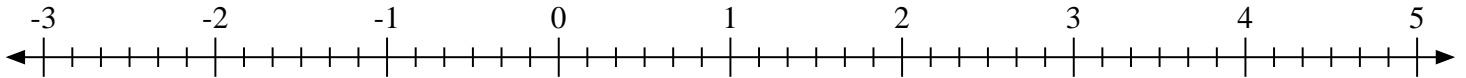
2) Indiquez la position de $-3\frac{2}{5}$



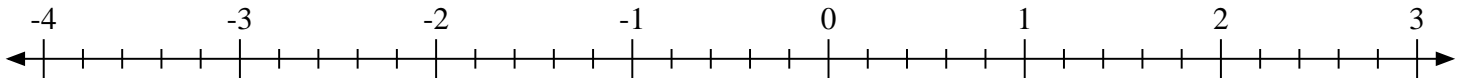
3) Indiquez la position de $3\frac{1}{3}$



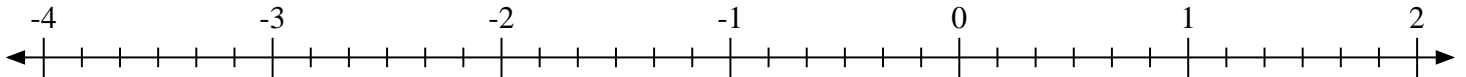
4) Indiquez la position de $4\frac{1}{6}$



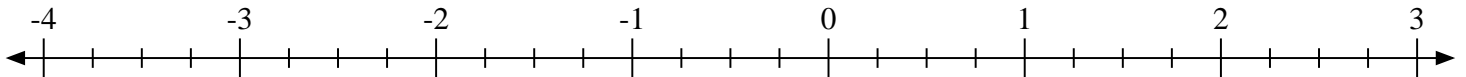
5) Indiquez la position de $-1\frac{3}{5}$



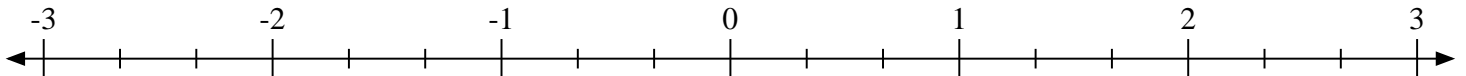
6) Indiquez la position de $-3\frac{1}{6}$



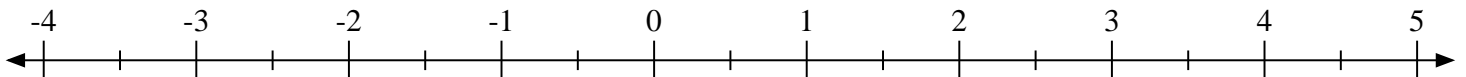
7) Indiquez la position de $-3\frac{1}{4}$



8) Indiquez la position de $-1\frac{2}{3}$

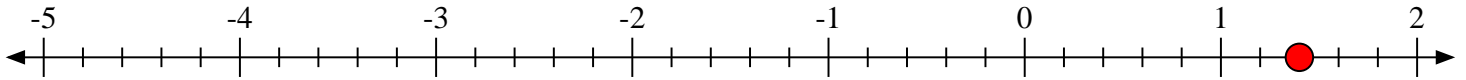
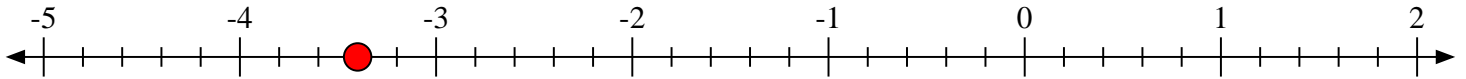
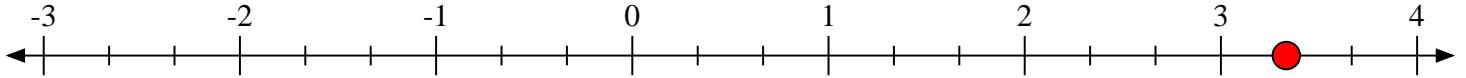
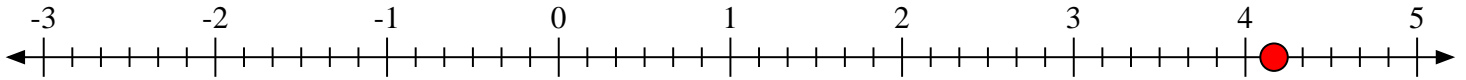
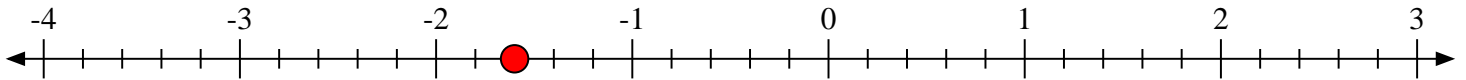
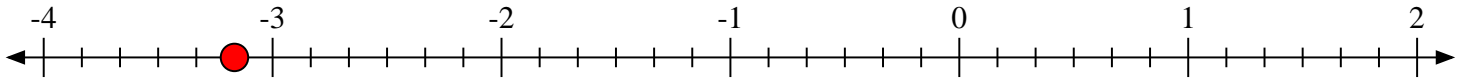
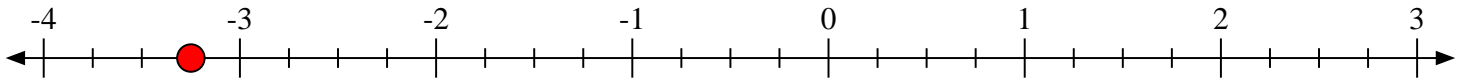
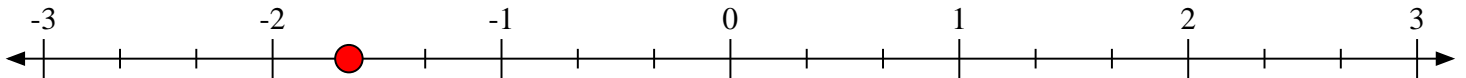


9) Indiquez la position de $3\frac{1}{2}$





Indiquez la position de chaque fraction.

1) Indiquez la position de $1\frac{2}{5}$ 2) Indiquez la position de $-3\frac{2}{5}$ 3) Indiquez la position de $3\frac{1}{3}$ 4) Indiquez la position de $4\frac{1}{6}$ 5) Indiquez la position de $-1\frac{3}{5}$ 6) Indiquez la position de $-3\frac{1}{6}$ 7) Indiquez la position de $-3\frac{1}{4}$ 8) Indiquez la position de $-1\frac{2}{3}$ 9) Indiquez la position de $3\frac{1}{2}$ 