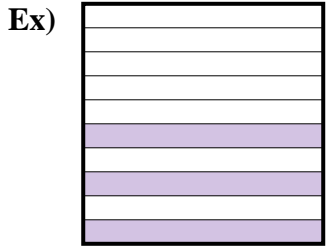


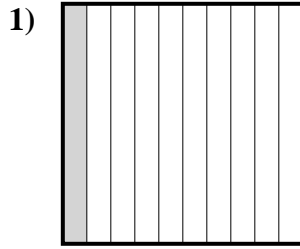


Exprimez la valeur en fraction , décimal & pourcentage.


Réponses



Fraction $\frac{3}{10}$
 Décimal 0,3
 Pourcentage 30%



Fraction _____
 Décimal _____
 Pourcentage _____




Fraction _____
 Décimal _____
 Pourcentage _____

Ex. $\frac{3}{10}$ 0,3 30%

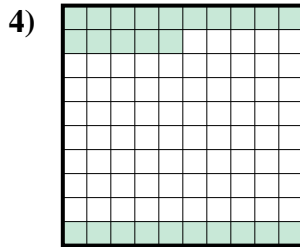
1. _____

2. _____

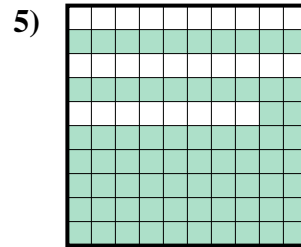
3. _____



Fraction _____
 Décimal _____
 Pourcentage _____



Fraction _____
 Décimal _____
 Pourcentage _____

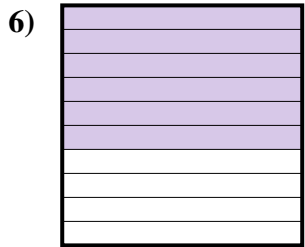


Fraction _____
 Décimal _____
 Pourcentage _____

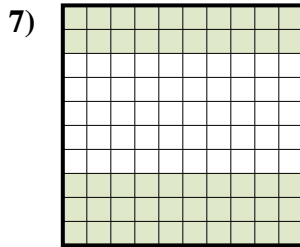
4. _____

5. _____

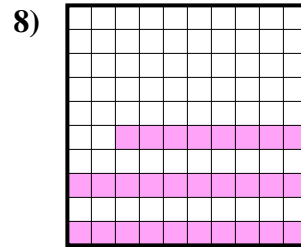
6. _____



Fraction _____
 Décimal _____
 Pourcentage _____



Fraction _____
 Décimal _____
 Pourcentage _____



Fraction _____
 Décimal _____
 Pourcentage _____

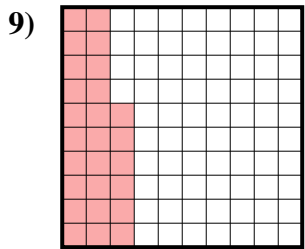
7. _____

8. _____

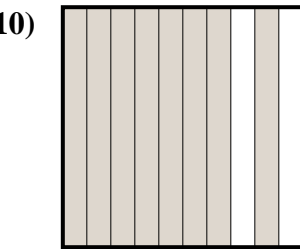
9. _____

10. _____

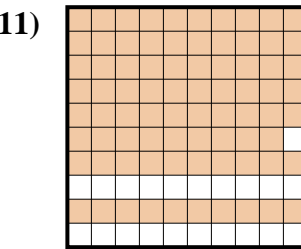
11. _____



Fraction _____
 Décimal _____
 Pourcentage _____



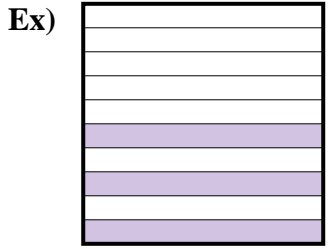
Fraction _____
 Décimal _____
 Pourcentage _____



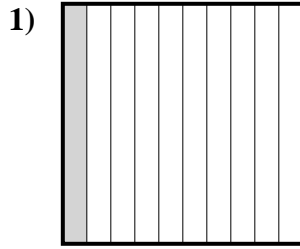
Fraction _____
 Décimal _____
 Pourcentage _____




Exprimez la valeur en fraction , décimal & pourcentage.




Fraction $\frac{3}{10}$
 Décimal $0,3$
 Pourcentage 30%



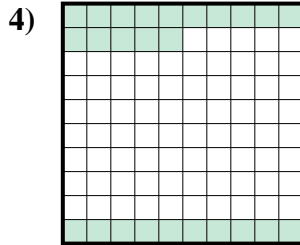
Fraction $\frac{1}{10}$
 Décimal $0,1$
 Pourcentage 10%



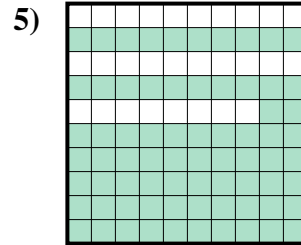
Fraction $\frac{7}{10}$
 Décimal $0,7$
 Pourcentage 70%



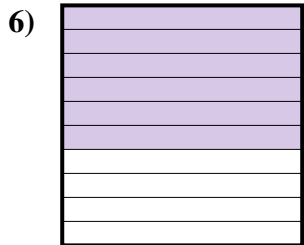
Fraction $\frac{5}{10}$
 Décimal $0,5$
 Pourcentage 50%



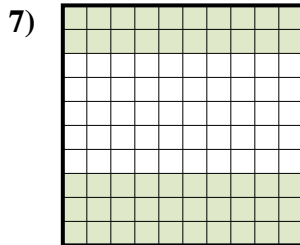
Fraction $\frac{25}{100}$
 Décimal $0,25$
 Pourcentage 25%



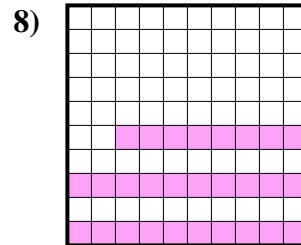
Fraction $\frac{72}{100}$
 Décimal $0,72$
 Pourcentage 72%



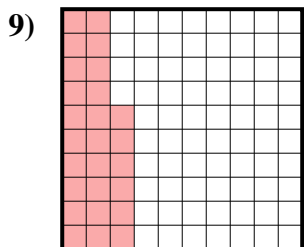
Fraction $\frac{6}{10}$
 Décimal $0,6$
 Pourcentage 60%



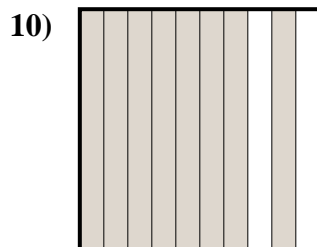
Fraction $\frac{50}{100}$
 Décimal $0,50$
 Pourcentage 50%



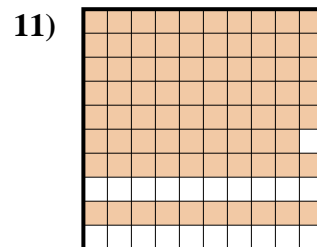
Fraction $\frac{28}{100}$
 Décimal $0,28$
 Pourcentage 28%



Fraction $\frac{26}{100}$
 Décimal $0,26$
 Pourcentage 26%



Fraction $\frac{8}{10}$
 Décimal $0,8$
 Pourcentage 80%



Fraction $\frac{79}{100}$
 Décimal $0,79$
 Pourcentage 79%

Réponses

Ex.	$\frac{3}{10}$	$0,3$	30%
1.	$\frac{1}{10}$	$0,1$	10%
2.	$\frac{7}{10}$	$0,7$	70%
3.	$\frac{5}{10}$	$0,5$	50%
	$\frac{25}{100}$		
4.	$\frac{25}{100}$	$0,25$	25%
	$\frac{72}{100}$		
5.	$\frac{72}{100}$	$0,72$	72%
6.	$\frac{6}{10}$	$0,6$	60%
	$\frac{50}{100}$		
7.	$\frac{50}{100}$	$0,50$	50%
	$\frac{28}{100}$		
8.	$\frac{28}{100}$	$0,28$	28%
	$\frac{26}{100}$		
9.	$\frac{26}{100}$	$0,26$	26%
	$\frac{8}{10}$		
10.	$\frac{8}{10}$	$0,8$	80%
	$\frac{79}{100}$		
11.	$\frac{79}{100}$	$0,79$	79%