



Exprimez chaque groupes d'objets en multiplication.

Réponses

Ex)

Ex. $5 \times 10 = 50$

1)

1. _____

2)

2. _____

3)

3. _____

4)

4. _____

5)

5. _____

6)

6. _____

7)

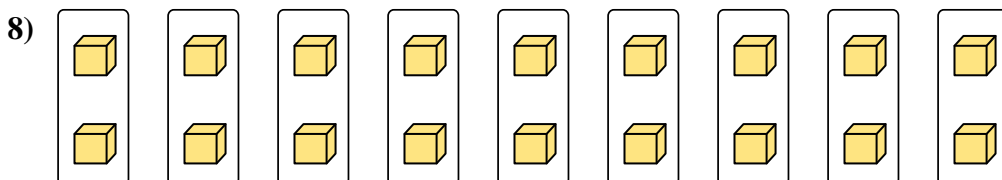
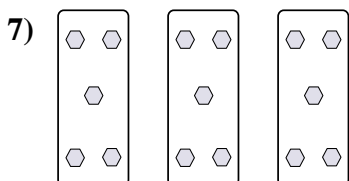
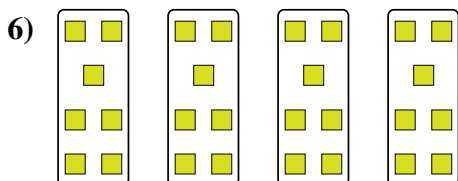


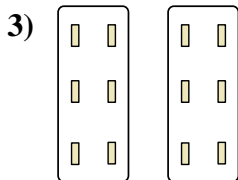
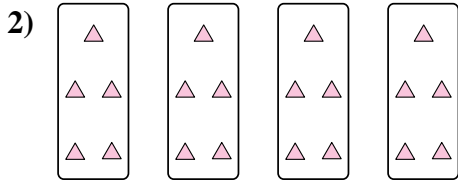
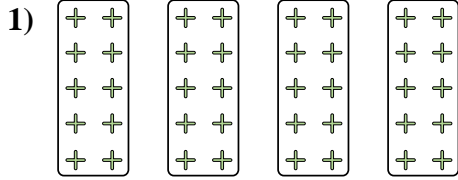
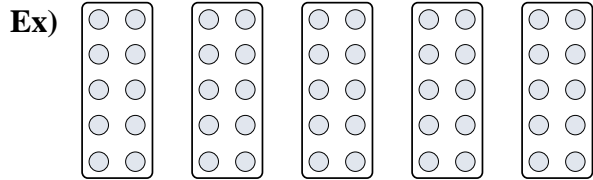
7. _____

8)

8. _____



Exprimez chaque groupes d'objets en multiplication.



Réponses

Ex. $5 \times 10 = 50$

1. $4 \times 10 = 40$

2. $4 \times 5 = 20$

3. $2 \times 6 = 12$

4. $3 \times 8 = 24$

5. $10 \times 6 = 60$

6. $4 \times 7 = 28$

7. $3 \times 5 = 15$

8. $9 \times 2 = 18$