



Exprimez chaque groupes d'objets en multiplication.

**Réponses**

Ex)

Ex.  $6 \times 5 = 30$

1)

1. \_\_\_\_\_

2. \_\_\_\_\_

3. \_\_\_\_\_

2)

4. \_\_\_\_\_

5. \_\_\_\_\_

3)

6. \_\_\_\_\_

7. \_\_\_\_\_

4)

8. \_\_\_\_\_

5)

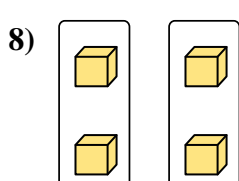
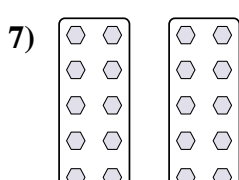
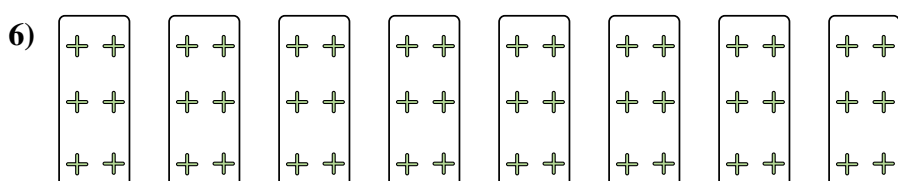
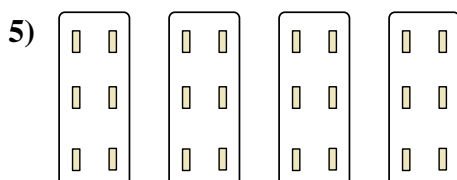
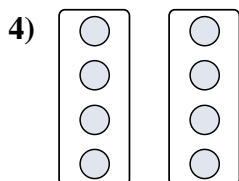

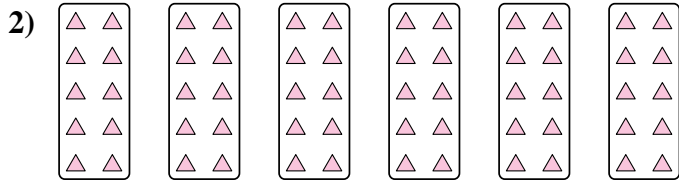


6)

7)

8)



Exprimez chaque groupes d'objets en multiplication.



**Réponses**

Ex. 6×5=30

1. 4×10=40

2. 6×10=60

3. 6×7=42

4. 2×4=8

5. 4×6=24

6. 8×6=48

7. 2×10=20

8. 2×2=4