



Exprimez chaque groupes d'objets en multiplication.

**Réponses**

Ex)

Ex.  $8 \times 6 = 48$

1. \_\_\_\_\_

1)

2. \_\_\_\_\_

3. \_\_\_\_\_

2)

4. \_\_\_\_\_

5. \_\_\_\_\_

3)

6. \_\_\_\_\_

7. \_\_\_\_\_

4)

8. \_\_\_\_\_

5)

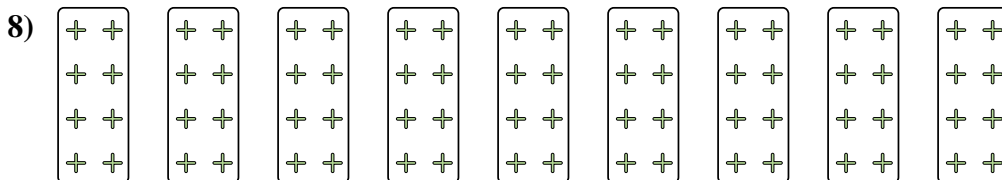

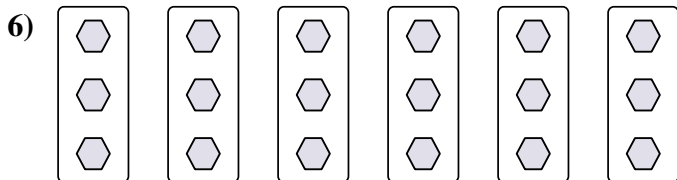

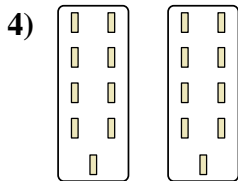
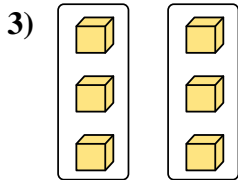
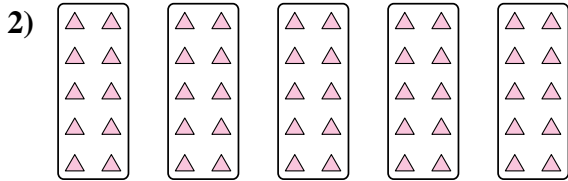
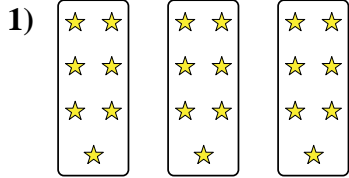
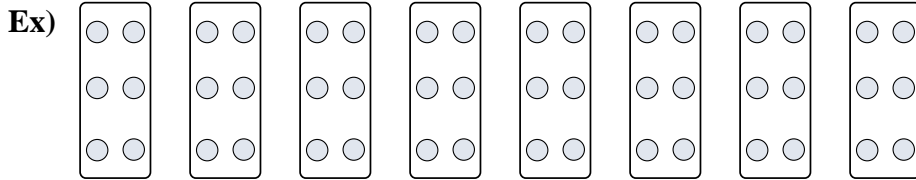
6)

7)

8)



Exprimez chaque groupes d'objets en multiplication.



**Réponses**

Ex.  $8 \times 3 = 24$

1.  $3 \times 7 = 21$

2.  $5 \times 10 = 50$

3.  $2 \times 3 = 6$

4.  $2 \times 9 = 18$

5.  $5 \times 5 = 25$

6.  $6 \times 3 = 18$

7.  $8 \times 2 = 16$

8.  $9 \times 8 = 72$