



Exprimez chaque groupes d'objets en multiplication.

**Réponses**

Ex)

Ex.  $4 \times 8 = 32$

1)

1. \_\_\_\_\_

2. \_\_\_\_\_

3. \_\_\_\_\_

2)

4. \_\_\_\_\_

5. \_\_\_\_\_

3)

6. \_\_\_\_\_

7. \_\_\_\_\_

4)

8. \_\_\_\_\_

5)

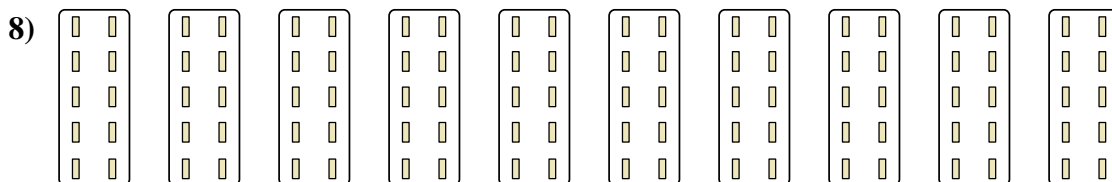
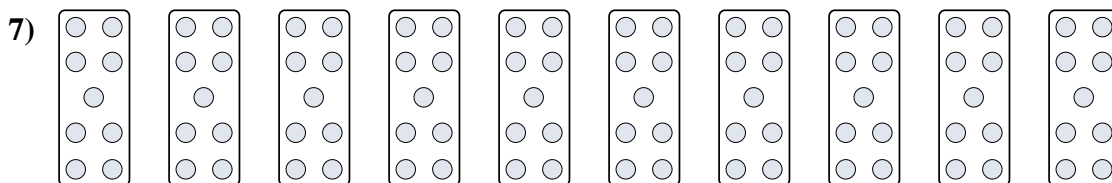

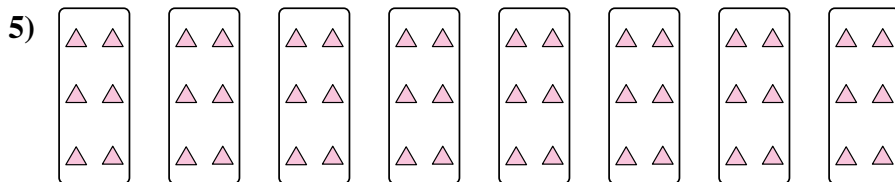


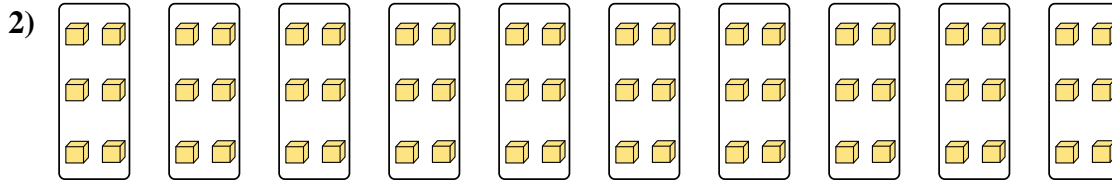
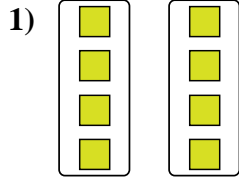
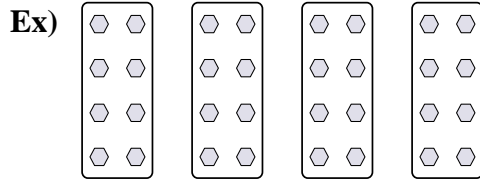
6)

7)

8)



Exprimez chaque groupes d'objets en multiplication.



**Réponses**

Ex. 4×8=32

1. 2×4=8

2. 10×6=60

3. 3×4=12

4. 4×4=16

5. 8×6=48

6. 9×6=54

7. 10×9=90

8. 10×10=100