

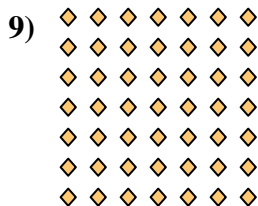


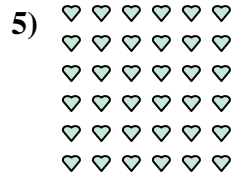
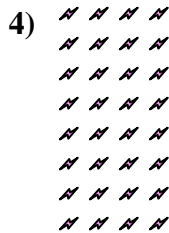

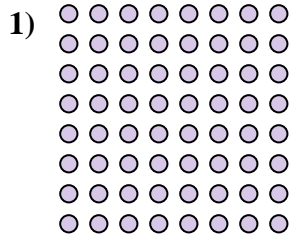
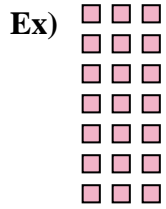






Interpréter chaque figure en multiplication.



**Réponses**

Ex.  $7 \times 3 = 21$

1.  $8 \times 8 = 64$

2.  $3 \times 4 = 12$

3.  $5 \times 9 = 45$

4.  $8 \times 4 = 32$

5.  $6 \times 6 = 36$

6.  $3 \times 3 = 9$

7.  $8 \times 10 = 80$

8.  $6 \times 7 = 42$

9.  $7 \times 7 = 49$

10.  $7 \times 10 = 70$

11.  $6 \times 10 = 60$