

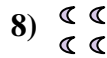


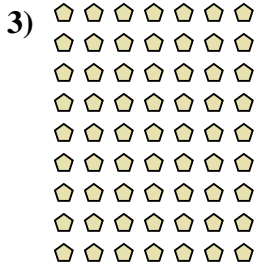


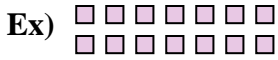




Interpréter chaque figure en multiplication.



Réponses

Ex. 2 × 7 = 14

1. 10 × 3 = 30

2. 7 × 10 = 70

3. 9 × 7 = 63

4. 10 × 6 = 60

5. 6 × 3 = 18

6. 8 × 5 = 40

7. 8 × 2 = 16

8. 2 × 2 = 4

9. 7 × 7 = 49

10. 10 × 8 = 80

11. 3 × 8 = 24