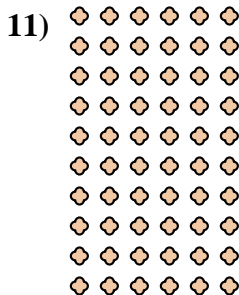





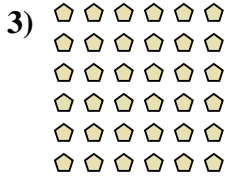


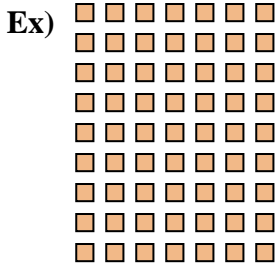




Interpréter chaque figure en multiplication.



Réponses

Ex. 9 × 7 = 63

1. 6 × 7 = 42

2. 8 × 10 = 80

3. 6 × 6 = 36

4. 10 × 7 = 70

5. 2 × 6 = 12

6. 7 × 6 = 42

7. 10 × 3 = 30

8. 5 × 9 = 45

9. 3 × 4 = 12

10. 10 × 10 = 100

11. 10 × 6 = 60