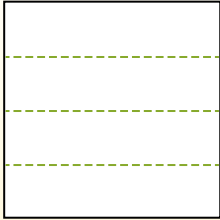


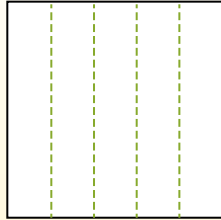


Partitionnez la figure comme indiqué et comptez le nombre de cellules formées.

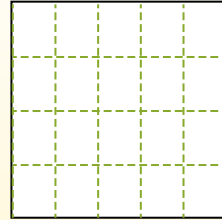
Les lignes vont de gauche à droite.



Les colonnes vont de haut en bas.




Il y a ici 4 lignes et 5 colonnes. Formant 20 cellules au total.




Réponses

- 1. _____
- 2. _____
- 3. _____
- 4. _____
- 5. _____
- 6. _____
- 7. _____
- 8. _____
- 9. _____


1) 5 lignes
2 colonnes




2) 2 lignes
2 colonnes




3) 2 lignes
4 colonnes



4) 5 lignes
4 colonnes




5) 3 lignes
5 colonnes




6) 4 lignes
2 colonnes



7) 3 lignes
3 colonnes



8) 4 lignes
3 colonnes



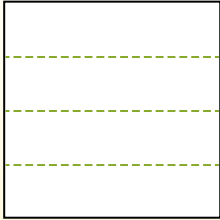
9) 5 lignes
5 colonnes



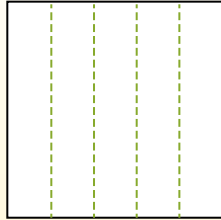


Partitionnez la figure comme indiqué et comptez le nombre de cellules formées.

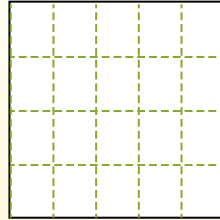
Les lignes vont de gauche à droite.



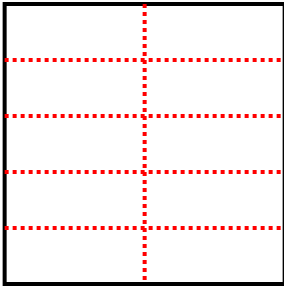
Les colonnes vont de haut en bas.



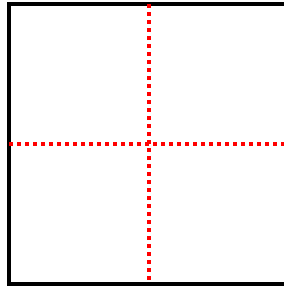
Il y a ici 4 lignes et 5 colonnes. Formant 20 cellules au total.



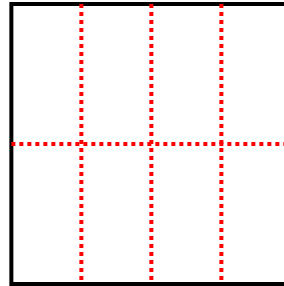
1) 5 lignes
2 colonnes



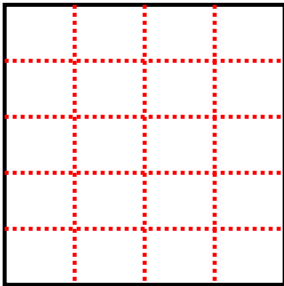
2) 2 lignes
2 colonnes



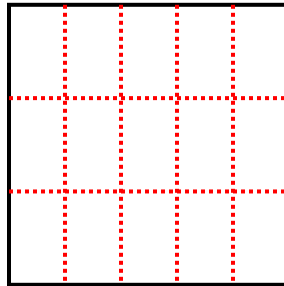
3) 2 lignes
4 colonnes



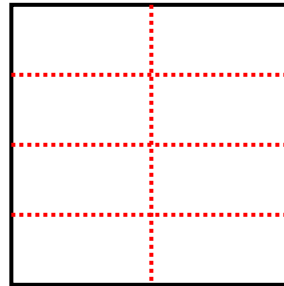
4) 5 lignes
4 colonnes



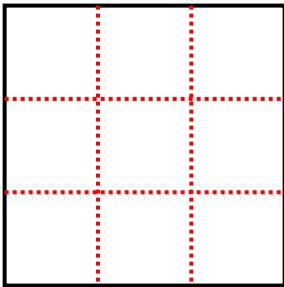
5) 3 lignes
5 colonnes



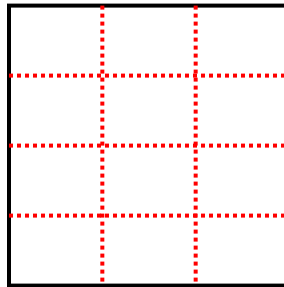
6) 4 lignes
2 colonnes



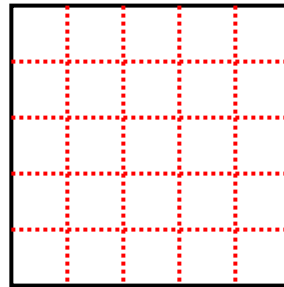
7) 3 lignes
3 colonnes



8) 4 lignes
3 colonnes



9) 5 lignes
5 colonnes



Réponses

1. 10

2. 4

3. 8

4. 20

5. 15

6. 8

7. 9

8. 12

9. 25