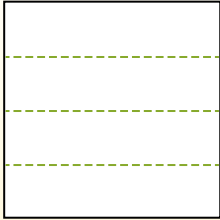


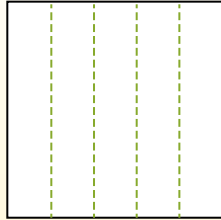


Partitionnez la figure comme indiqué et comptez le nombre de cellules formées.

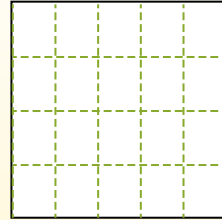
Les lignes vont de gauche à droite.




Les colonnes vont de haut en bas.




Il y a ici 4 lignes et 5 colonnes. Formant 20 cellules au total.




1) 5 lignes
4 colonnes




2) 3 lignes
3 colonnes




3) 2 lignes
3 colonnes




4) 3 lignes
2 colonnes




5) 2 lignes
2 colonnes




6) 5 lignes
2 colonnes




7) 4 lignes
4 colonnes



8) 5 lignes
3 colonnes



9) 3 lignes
5 colonnes




Réponses

- 1. _____
- 2. _____
- 3. _____
- 4. _____
- 5. _____
- 6. _____
- 7. _____
- 8. _____
- 9. _____

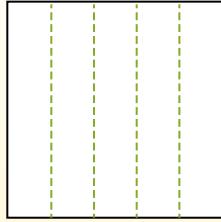


Partitionnez la figure comme indiqué et comptez le nombre de cellules formées.

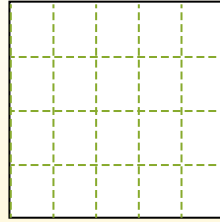
Les lignes vont de gauche à droite.



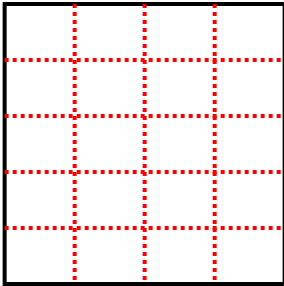
Les colonnes vont de haut en bas.



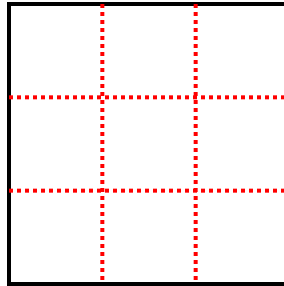
Il y a ici 4 lignes et 5 colonnes. Formant 20 cellules au total.



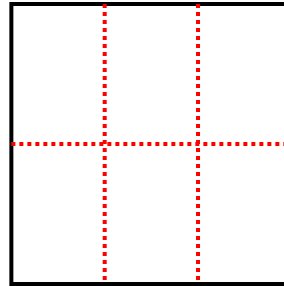
1) 5 lignes
4 colonnes



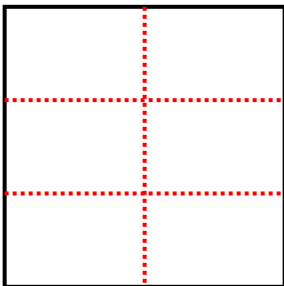
2) 3 lignes
3 colonnes



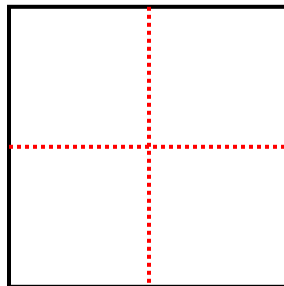
3) 2 lignes
3 colonnes



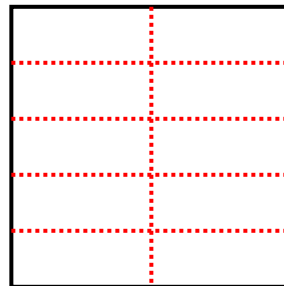
4) 3 lignes
2 colonnes



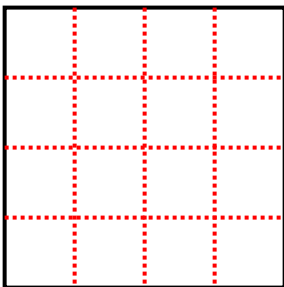
5) 2 lignes
2 colonnes



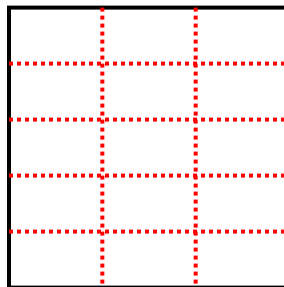
6) 5 lignes
2 colonnes



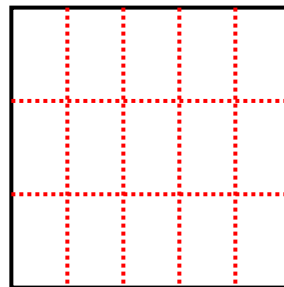
7) 4 lignes
4 colonnes



8) 5 lignes
3 colonnes



9) 3 lignes
5 colonnes



Réponses

1. 20

2. 9

3. 6

4. 6

5. 4

6. 10

7. 16

8. 15

9. 15