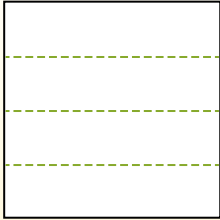


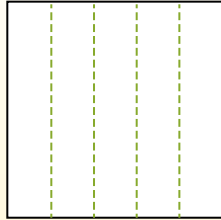


Partitionnez la figure comme indiqué et comptez le nombre de cellules formées.

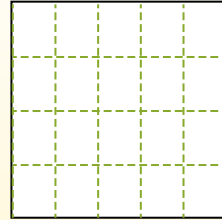
Les lignes vont de gauche à droite.




Les colonnes vont de haut en bas.




Il y a ici 4 lignes et 5 colonnes. Formant 20 cellules au total.




1) 2 lignes
3 colonnes




2) 3 lignes
4 colonnes




3) 4 lignes
3 colonnes




4) 2 lignes
4 colonnes




5) 3 lignes
3 colonnes




6) 2 lignes
2 colonnes




7) 2 lignes
5 colonnes



8) 4 lignes
4 colonnes



9) 5 lignes
5 colonnes



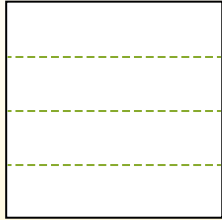
Réponses

- 1. _____
- 2. _____
- 3. _____
- 4. _____
- 5. _____
- 6. _____
- 7. _____
- 8. _____
- 9. _____

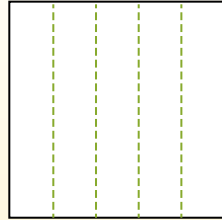


Partitionnez la figure comme indiqué et comptez le nombre de cellules formées.

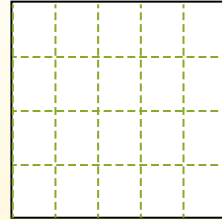
Les lignes vont de gauche à droite.



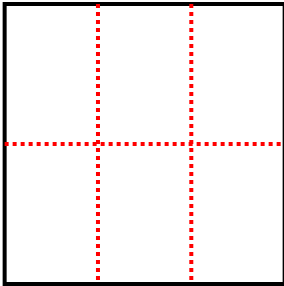
Les colonnes vont de haut en bas.



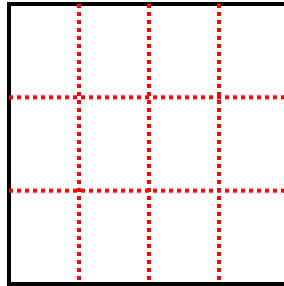
Il y a ici 4 lignes et 5 colonnes. Formant 20 cellules au total.



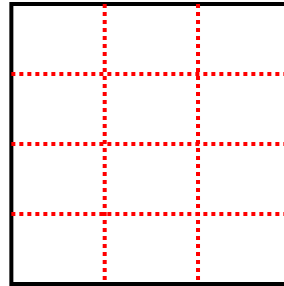
1) 2 lignes
3 colonnes



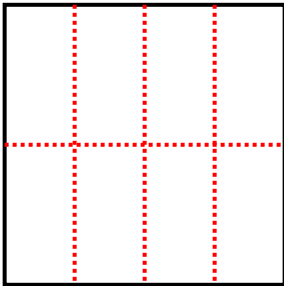
2) 3 lignes
4 colonnes



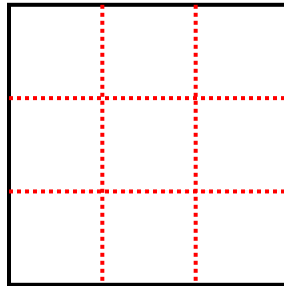
3) 4 lignes
3 colonnes



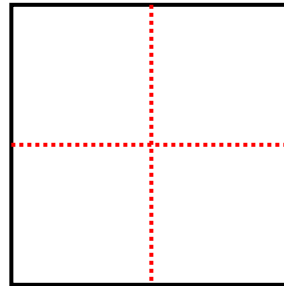
4) 2 lignes
4 colonnes



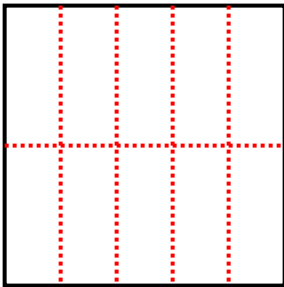
5) 3 lignes
3 colonnes



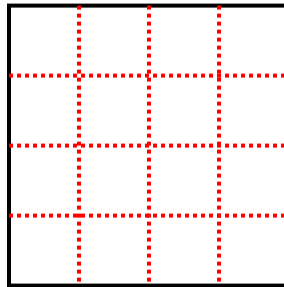
6) 2 lignes
2 colonnes



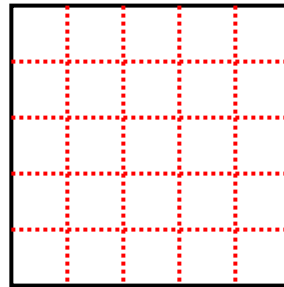
7) 2 lignes
5 colonnes



8) 4 lignes
4 colonnes



9) 5 lignes
5 colonnes



Réponses

1. 6

2. 12

3. 12

4. 8

5. 9

6. 4

7. 10

8. 16

9. 25