


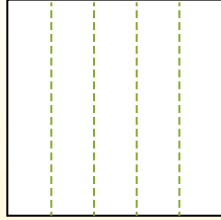


Partitionnez la figure comme indiqué et comptez le nombre de cellules formées.

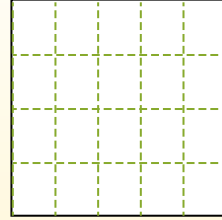
Les lignes vont de gauche à droite.



Les colonnes vont de haut en bas.




Il y a ici 4 lignes et 5 colonnes. Formant 20 cellules au total.




**Réponses**

- 1. \_\_\_\_\_
- 2. \_\_\_\_\_
- 3. \_\_\_\_\_
- 4. \_\_\_\_\_
- 5. \_\_\_\_\_
- 6. \_\_\_\_\_
- 7. \_\_\_\_\_
- 8. \_\_\_\_\_
- 9. \_\_\_\_\_


1) 5 lignes  
2 colonnes




2) 2 lignes  
3 colonnes




3) 5 lignes  
3 colonnes



4) 4 lignes  
4 colonnes




5) 2 lignes  
5 colonnes




6) 3 lignes  
5 colonnes



7) 5 lignes  
4 colonnes



8) 4 lignes  
2 colonnes




9) 3 lignes  
3 colonnes



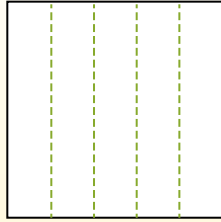


Partitionnez la figure comme indiqué et comptez le nombre de cellules formées.

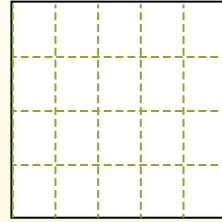
Les lignes vont de gauche à droite.



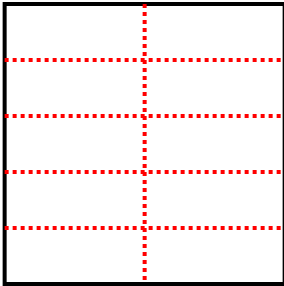
Les colonnes vont de haut en bas.



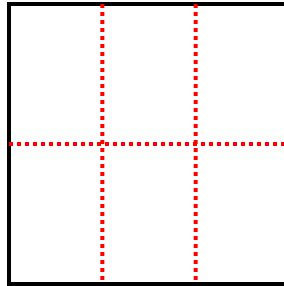
Il y a ici 4 lignes et 5 colonnes. Formant 20 cellules au total.



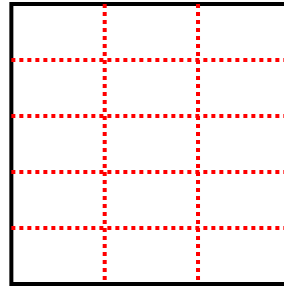
1) 5 lignes  
2 colonnes



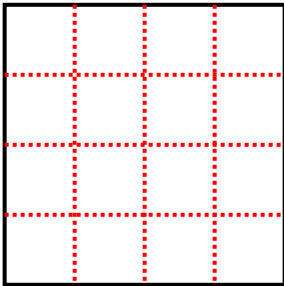
2) 2 lignes  
3 colonnes



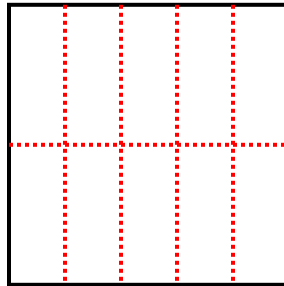
3) 5 lignes  
3 colonnes



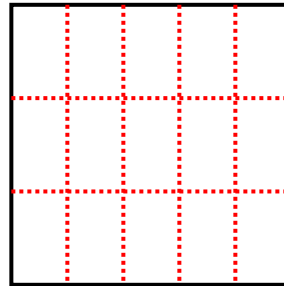
4) 4 lignes  
4 colonnes




5) 2 lignes  
5 colonnes



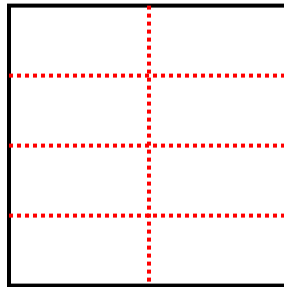
6) 3 lignes  
5 colonnes



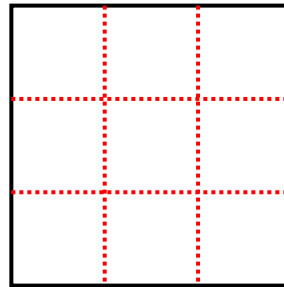
7) 5 lignes  
4 colonnes



8) 4 lignes  
2 colonnes



9) 3 lignes  
3 colonnes



**Réponses**

1. 10

2. 6

3. 15

4. 16

5. 10

6. 15

7. 20

8. 8

9. 9