


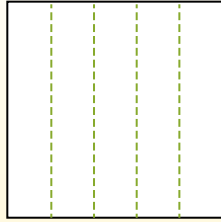


Partitionnez la figure comme indiqué et comptez le nombre de cellules formées.

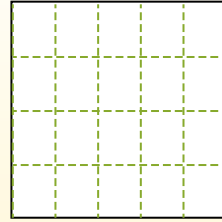
Les lignes vont de gauche à droite.




Les colonnes vont de haut en bas.




Il y a ici 4 lignes et 5 colonnes. Formant 20 cellules au total.




1) 4 lignes
2 colonnes




2) 2 lignes
5 colonnes




3) 4 lignes
4 colonnes




4) 5 lignes
2 colonnes




5) 3 lignes
2 colonnes




6) 4 lignes
3 colonnes




7) 3 lignes
4 colonnes



8) 5 lignes
4 colonnes



9) 3 lignes
3 colonnes




Réponses

- 1. _____
- 2. _____
- 3. _____
- 4. _____
- 5. _____
- 6. _____
- 7. _____
- 8. _____
- 9. _____

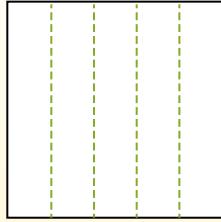


Partitionnez la figure comme indiqué et comptez le nombre de cellules formées.

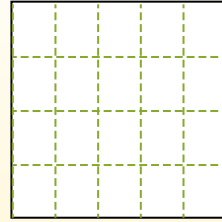
Les lignes vont de gauche à droite.



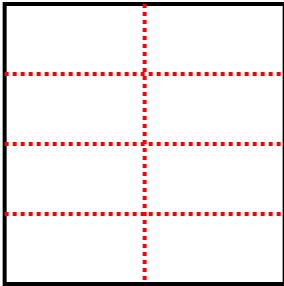
Les colonnes vont de haut en bas.



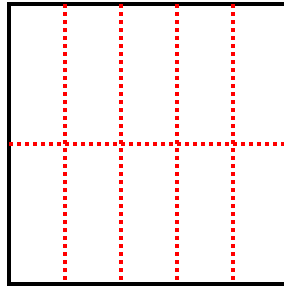
Il y a ici 4 lignes et 5 colonnes. Formant 20 cellules au total.



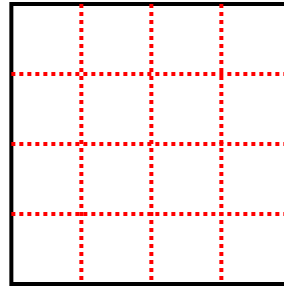
1) 4 lignes
2 colonnes



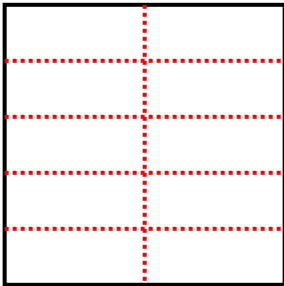
2) 2 lignes
5 colonnes



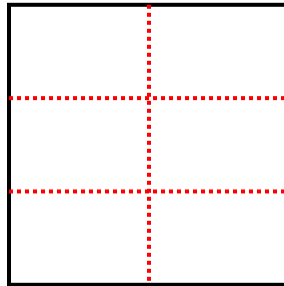
3) 4 lignes
4 colonnes



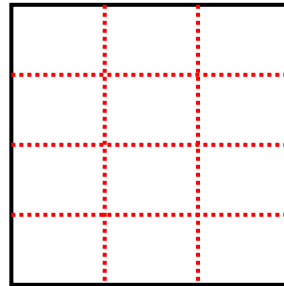
4) 5 lignes
2 colonnes



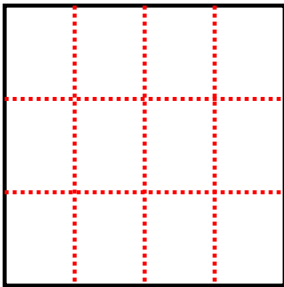
5) 3 lignes
2 colonnes



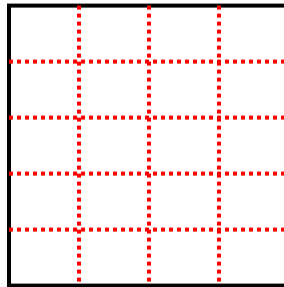
6) 4 lignes
3 colonnes



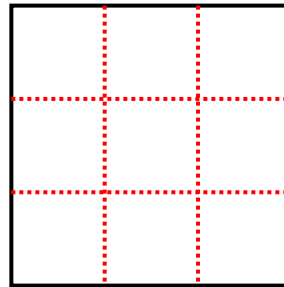
7) 3 lignes
4 colonnes



8) 5 lignes
4 colonnes



9) 3 lignes
3 colonnes



Réponses

1. 8

2. 10

3. 16

4. 10

5. 6

6. 12

7. 12

8. 20

9. 9