


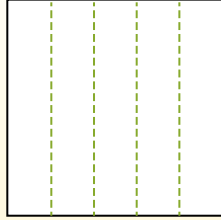


Partitionnez la figure comme indiqué et comptez le nombre de cellules formées.

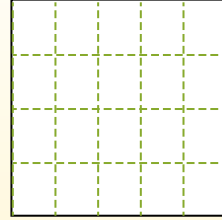
Les lignes vont de gauche à droite.




Les colonnes vont de haut en bas.




Il y a ici 4 lignes et 5 colonnes. Formant 20 cellules au total.



1) 3 lignes
5 colonnes




2) 2 lignes
5 colonnes




3) 5 lignes
3 colonnes




4) 2 lignes
2 colonnes




5) 3 lignes
2 colonnes




6) 5 lignes
5 colonnes




7) 2 lignes
4 colonnes



8) 3 lignes
3 colonnes



9) 3 lignes
4 colonnes




Réponses

- 1. _____
- 2. _____
- 3. _____
- 4. _____
- 5. _____
- 6. _____
- 7. _____
- 8. _____
- 9. _____

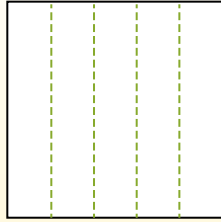


Partitionnez la figure comme indiqué et comptez le nombre de cellules formées.

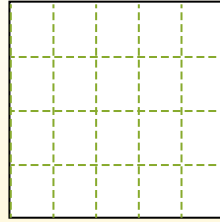
Les lignes vont de gauche à droite.



Les colonnes vont de haut en bas.



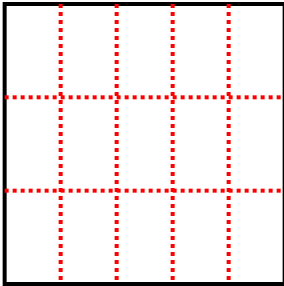
Il y a ici 4 lignes et 5 colonnes. Formant 20 cellules au total.



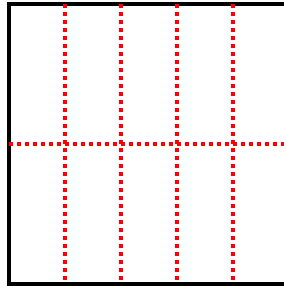
Réponses

- 1. 15
- 2. 10
- 3. 15
- 4. 4
- 5. 6
- 6. 25
- 7. 8
- 8. 9
- 9. 12

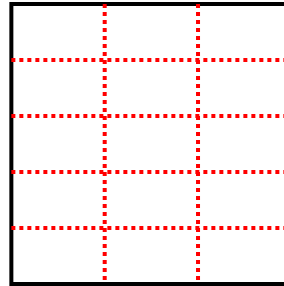
1) 3 lignes
5 colonnes



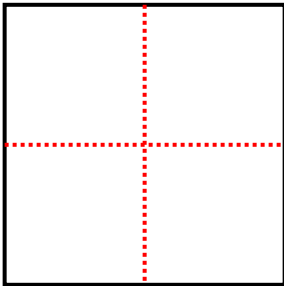
2) 2 lignes
5 colonnes



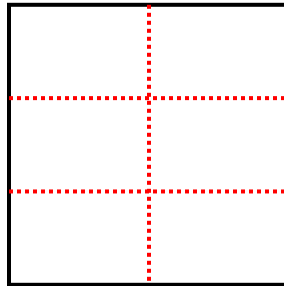
3) 5 lignes
3 colonnes



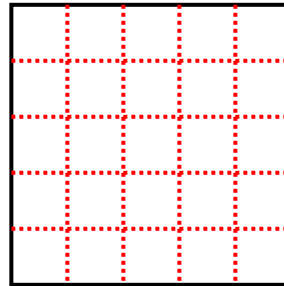
4) 2 lignes
2 colonnes



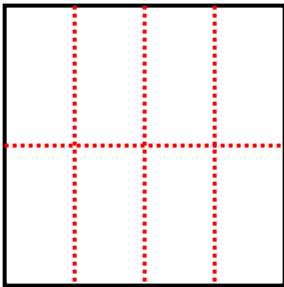
5) 3 lignes
2 colonnes



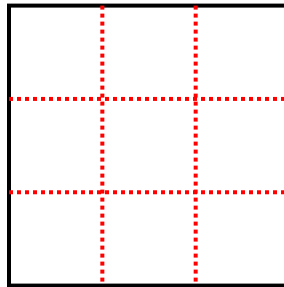
6) 5 lignes
5 colonnes



7) 2 lignes
4 colonnes



8) 3 lignes
3 colonnes



9) 3 lignes
4 colonnes

